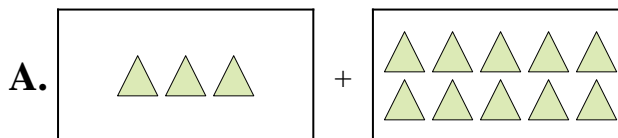




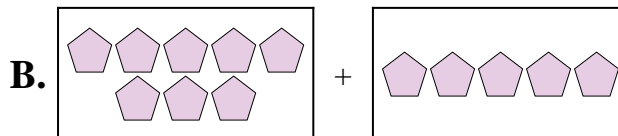
Match each addition equation to its visual equivalent.

Answers

1)  $9 + 5$



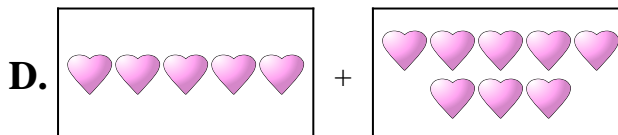
2)  $8 + 5$



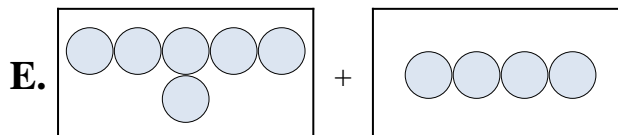
3)  $10 + 1$




4)  $1 + 1$



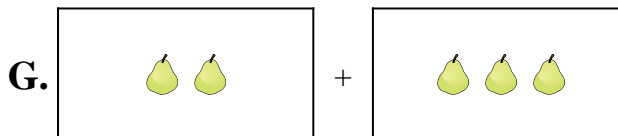
5)  $3 + 9$



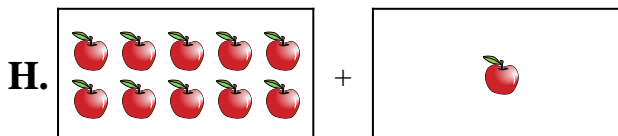
6)  $7 + 1$



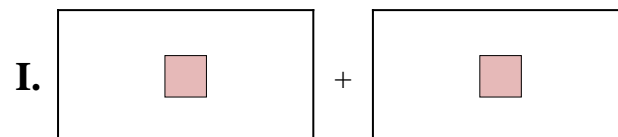
7)  $2 + 3$



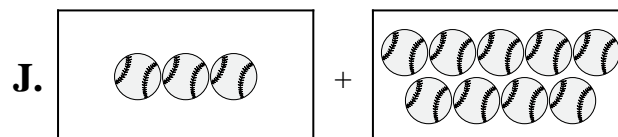
8)  $5 + 8$



9)  $6 + 4$



10)  $3 + 10$

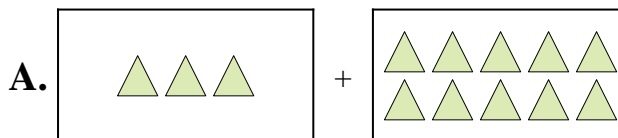


1. \_\_\_\_\_
2. \_\_\_\_\_
3. \_\_\_\_\_
4. \_\_\_\_\_
5. \_\_\_\_\_
6. \_\_\_\_\_
7. \_\_\_\_\_
8. \_\_\_\_\_
9. \_\_\_\_\_
10. \_\_\_\_\_

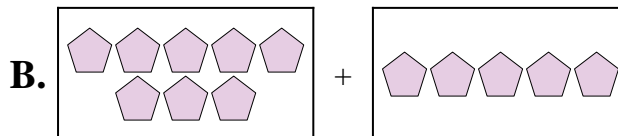


Match each addition equation to its visual equivalent.

1)  $9 + 5$



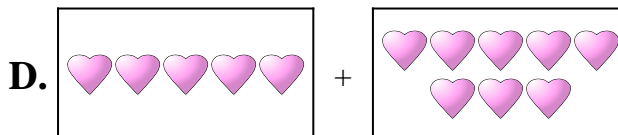
2)  $8 + 5$



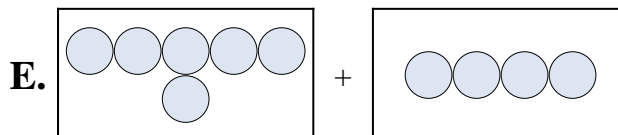
3)  $10 + 1$




4)  $1 + 1$



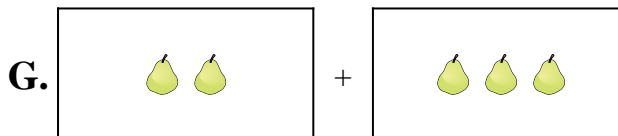
5)  $3 + 9$



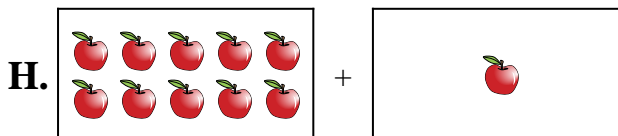
6)  $7 + 1$



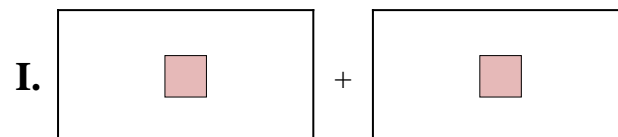
7)  $2 + 3$



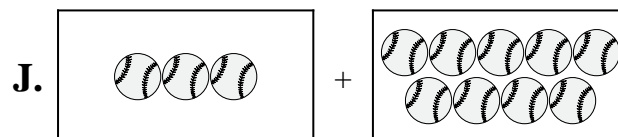
8)  $5 + 8$



9)  $6 + 4$



10)  $3 + 10$



Answers

1. **F**

2. **B**

3. **H**

4. **I**

5. **J**

6. **C**

7. **G**

8. **D**

9. **E**

10. **A**