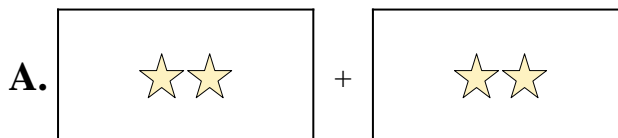





Match each addition equation to its visual equivalent.

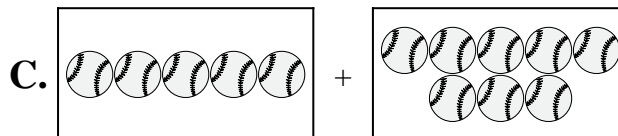
1) $9 + 5$



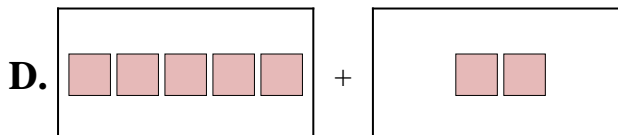
2) $9 + 10$



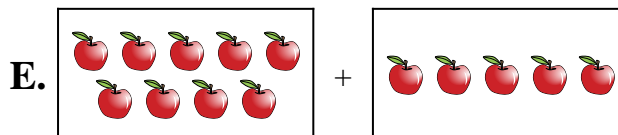
3) $5 + 2$




4) $10 + 2$



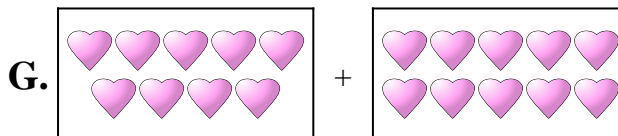
5) $1 + 10$



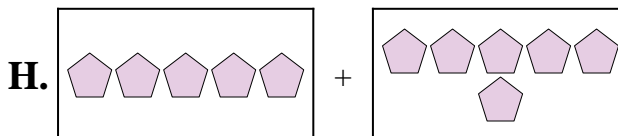
6) $2 + 2$



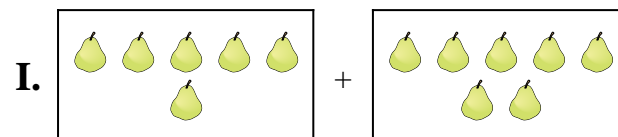
7) $8 + 8$



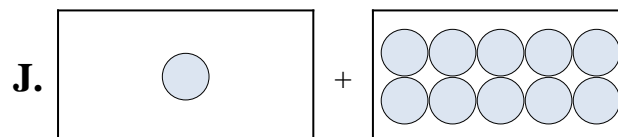
8) $6 + 7$



9) $5 + 8$



10) $5 + 6$



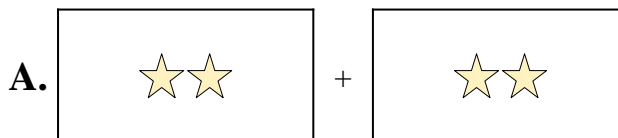
Answers

1. _____
2. _____
3. _____
4. _____
5. _____
6. _____
7. _____
8. _____
9. _____
10. _____




Match each addition equation to its visual equivalent.

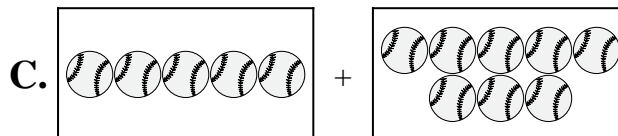
1) $9 + 5$



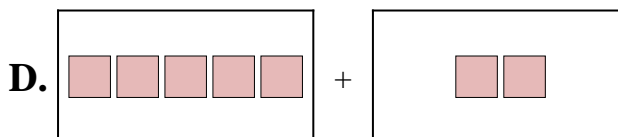
2) $9 + 10$



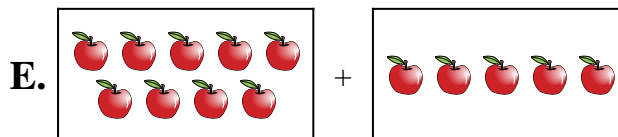
3) $5 + 2$




4) $10 + 2$



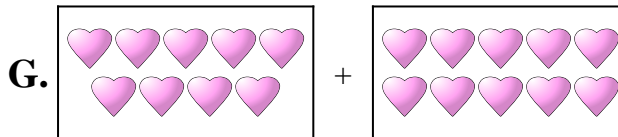
5) $1 + 10$



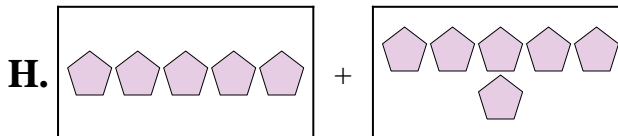
6) $2 + 2$



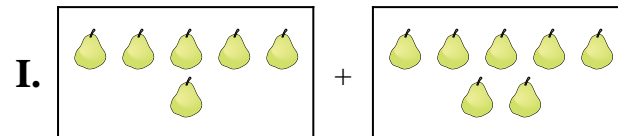
7) $8 + 8$



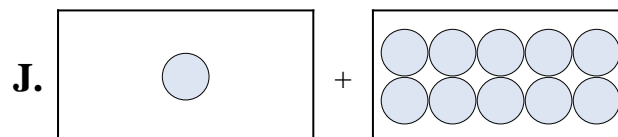
8) $6 + 7$



9) $5 + 8$



10) $5 + 6$



Answers

1. E

2. G

3. D

4. B

5. J

6. A

7. F

8. I

9. C

10. H