




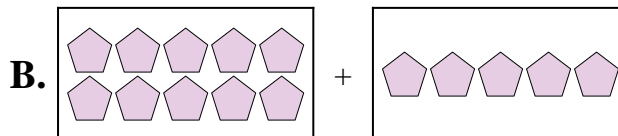
Match each addition equation to its visual equivalent.

Answers

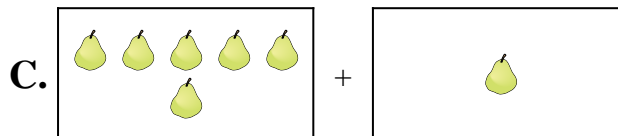
1)  $8 + 8$




2)  $5 + 1$



3)  $6 + 1$



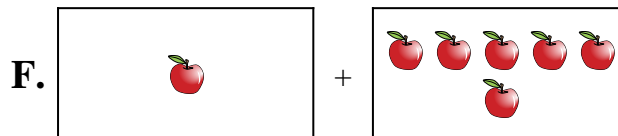
4)  $3 + 7$



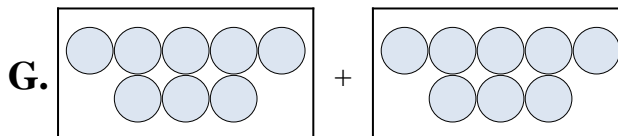
5)  $5 + 9$



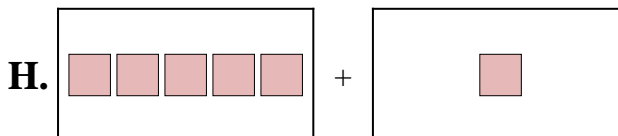
6)  $1 + 6$



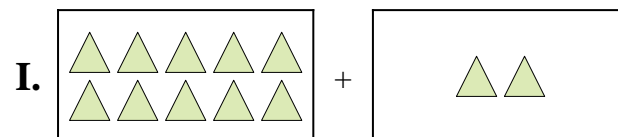
7)  $10 + 2$



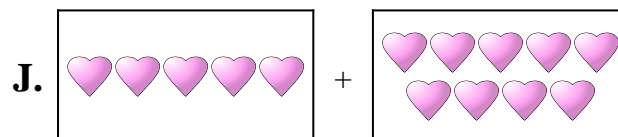
8)  $9 + 5$



9)  $10 + 5$



10)  $7 + 9$




1. \_\_\_\_\_
2. \_\_\_\_\_
3. \_\_\_\_\_
4. \_\_\_\_\_
5. \_\_\_\_\_
6. \_\_\_\_\_
7. \_\_\_\_\_
8. \_\_\_\_\_
9. \_\_\_\_\_
10. \_\_\_\_\_

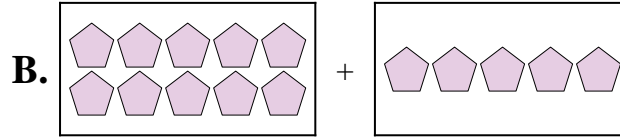


Match each addition equation to its visual equivalent.

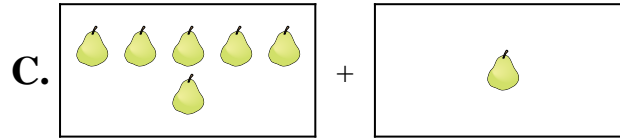
1)  $8 + 8$




2)  $5 + 1$



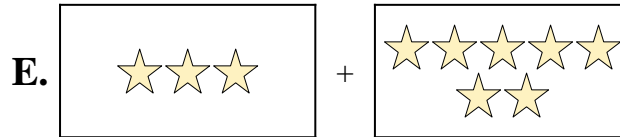
3)  $6 + 1$



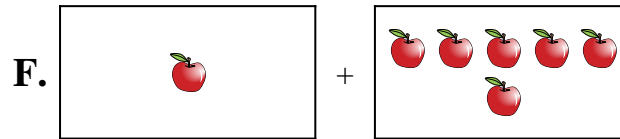
4)  $3 + 7$



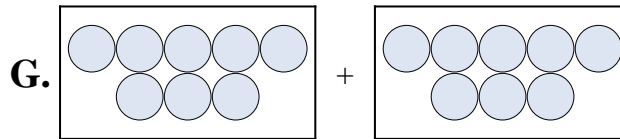
5)  $5 + 9$



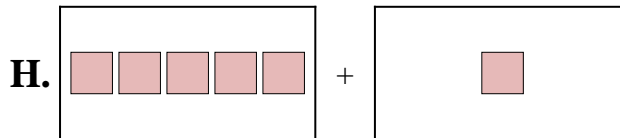
6)  $1 + 6$



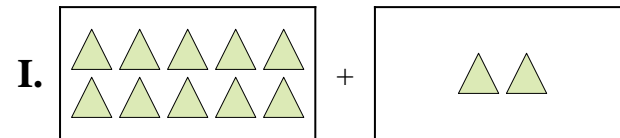
7)  $10 + 2$



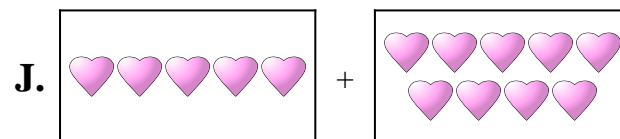
8)  $9 + 5$



9)  $10 + 5$



10)  $7 + 9$



Answers

1.     **G**    

2.     **H**    

3.     **C**    

4.     **E**    

5.     **J**    

6.     **F**    

7.     **I**    

8.     **D**    

9.     **B**    

10.     **A**