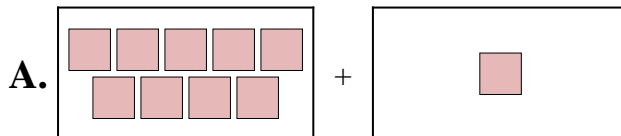


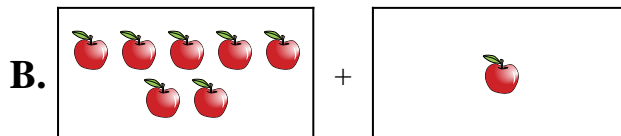


Match each addition equation to its visual equivalent.

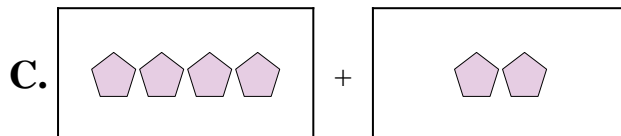
1) $4 + 10$



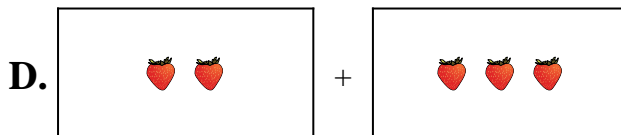
2) $3 + 8$



3) $4 + 2$



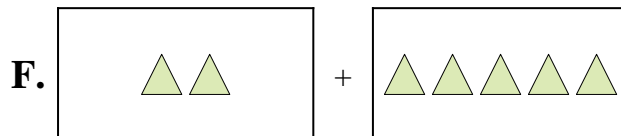
4) $7 + 1$



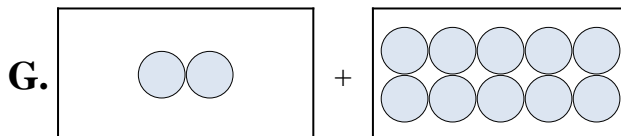
5) $2 + 5$




6) $2 + 10$



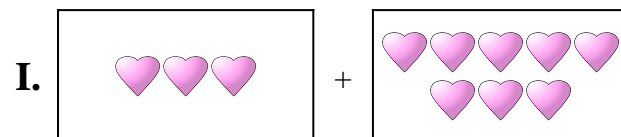
7) $5 + 8$



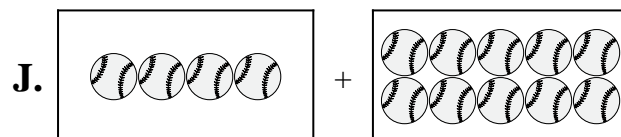
8) $2 + 3$



9) $9 + 7$



10) $9 + 1$



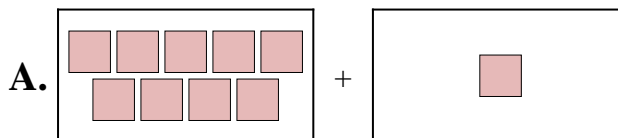
Answers

1. _____
2. _____
3. _____
4. _____
5. _____
6. _____
7. _____
8. _____
9. _____
10. _____

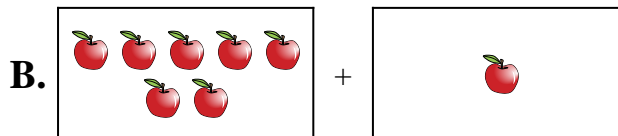


Match each addition equation to its visual equivalent.

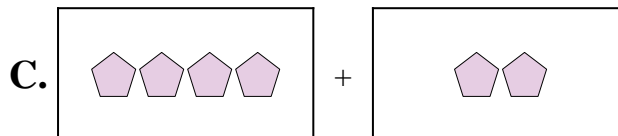
1) $4 + 10$



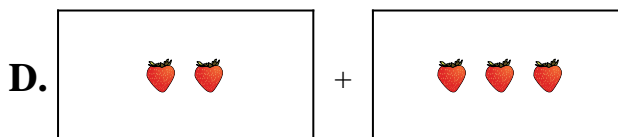
2) $3 + 8$



3) $4 + 2$



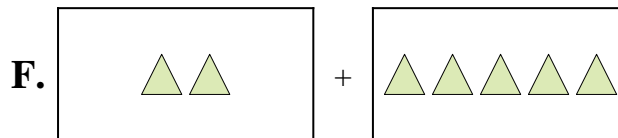
4) $7 + 1$



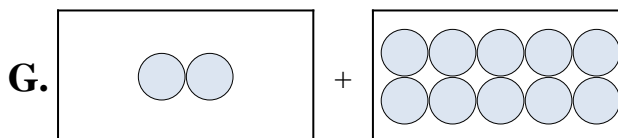
5) $2 + 5$




6) $2 + 10$



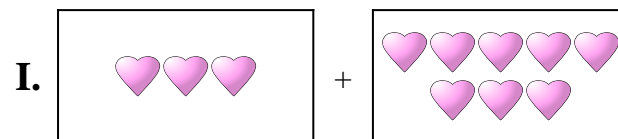
7) $5 + 8$



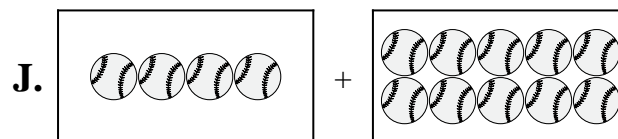
8) $2 + 3$



9) $9 + 7$



10) $9 + 1$



Answers

1. **J**

2. **I**

3. **C**

4. **B**

5. **F**

6. **G**

7. **E**

8. **D**

9. **H**

10. **A**