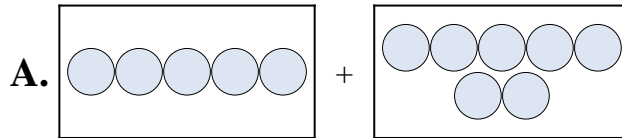




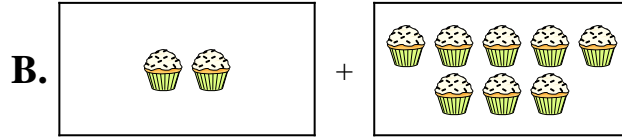
Match each addition equation to its visual equivalent.

Answers

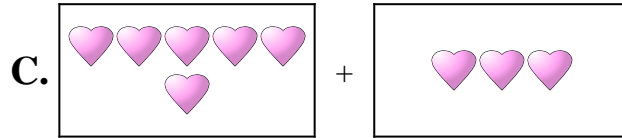
1) $8 + 6$



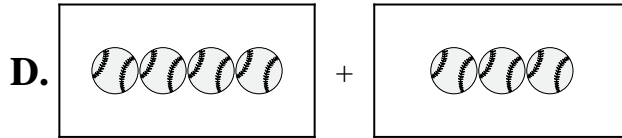
2) $4 + 1$



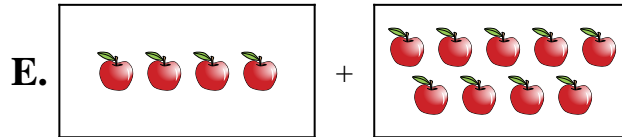
3) $6 + 3$



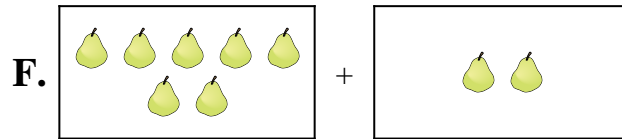
4) $5 + 7$




5) $6 + 1$



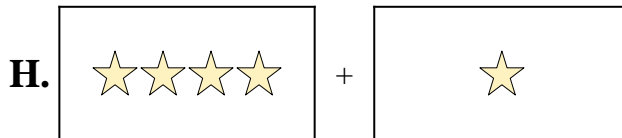
6) $1 + 3$



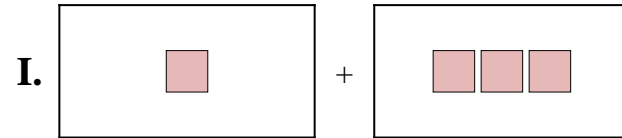
7) $4 + 3$



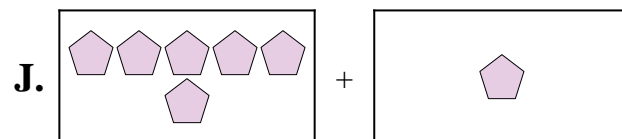
8) $7 + 2$



9) $2 + 8$



10) $4 + 9$

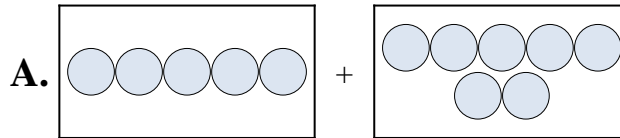


1. _____
2. _____
3. _____
4. _____
5. _____
6. _____
7. _____
8. _____
9. _____
10. _____

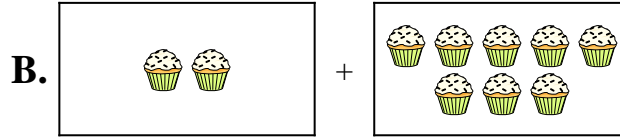


Match each addition equation to its visual equivalent.

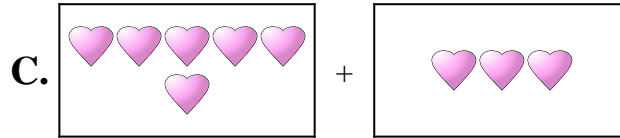
1) $8 + 6$



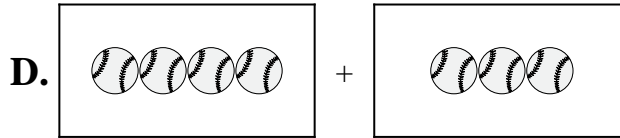
2) $4 + 1$



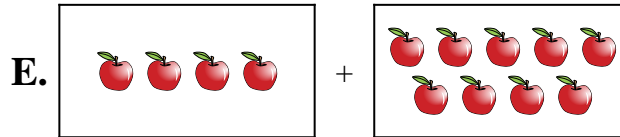
3) $6 + 3$



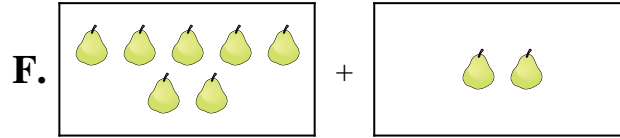
4) $5 + 7$




5) $6 + 1$



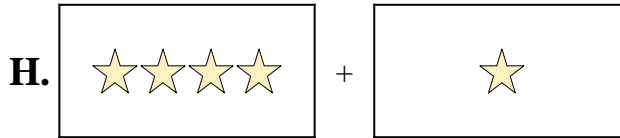
6) $1 + 3$



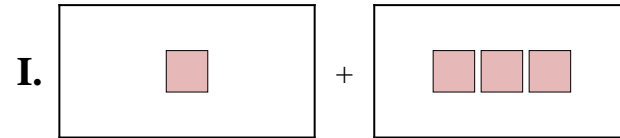
7) $4 + 3$



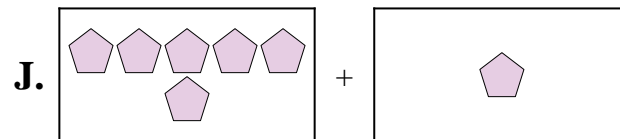
8) $7 + 2$



9) $2 + 8$



10) $4 + 9$



Answers

1. **G**

2. **H**

3. **C**

4. **A**

5. **J**

6. **I**

7. **D**

8. **F**

9. **B**

10. **E**