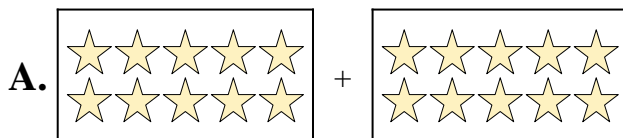


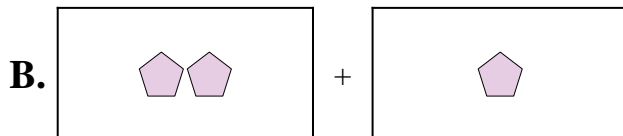


Match each addition equation to its visual equivalent.

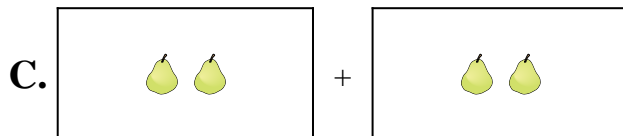
1) $10 + 7$



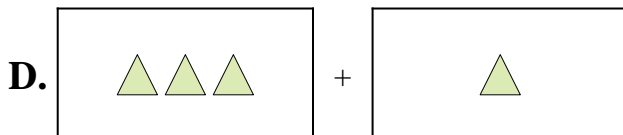
2) $9 + 9$



3) $7 + 6$



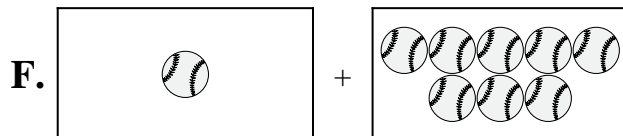
4) $1 + 8$



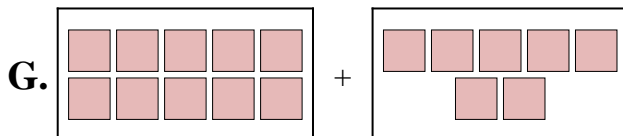
5) $10 + 10$



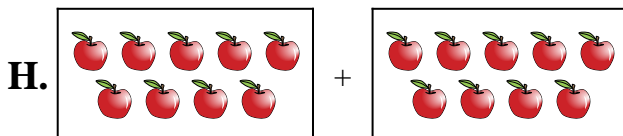
6) $2 + 3$




7) $10 + 9$



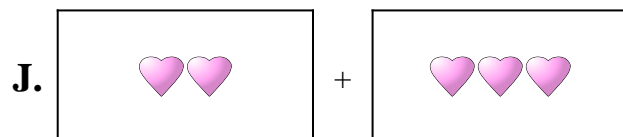
8) $2 + 2$



9) $3 + 1$



10) $2 + 1$



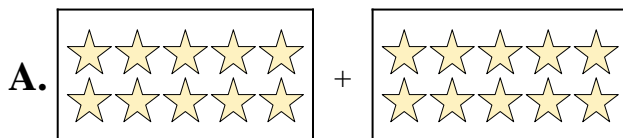
Answers

1. _____
2. _____
3. _____
4. _____
5. _____
6. _____
7. _____
8. _____
9. _____
10. _____

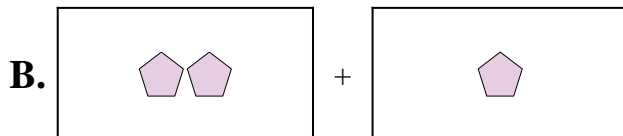


Match each addition equation to its visual equivalent.

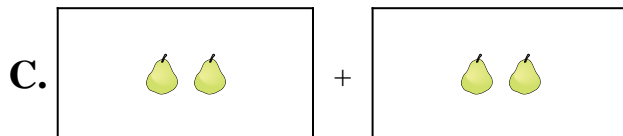
1) $10 + 7$



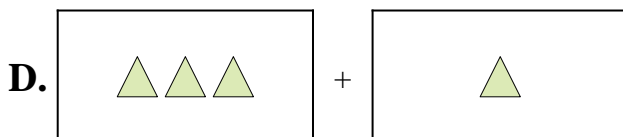
2) $9 + 9$



3) $7 + 6$



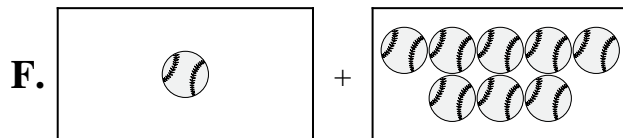
4) $1 + 8$



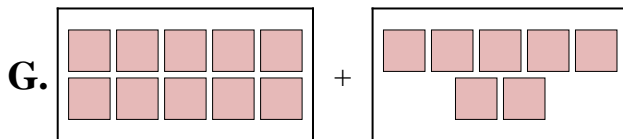
5) $10 + 10$



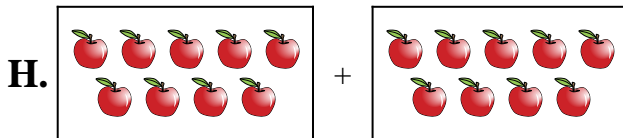
6) $2 + 3$




7) $10 + 9$



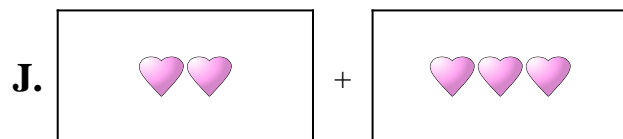
8) $2 + 2$



9) $3 + 1$



10) $2 + 1$



Answers

1. **G**

2. **H**

3. **E**

4. **F**

5. **A**

6. **J**

7. **I**

8. **C**

9. **D**

10. **B**