


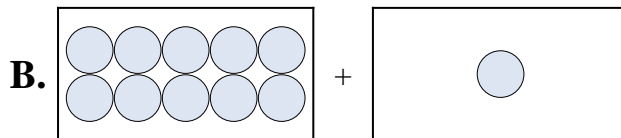


Match each addition equation to its visual equivalent.

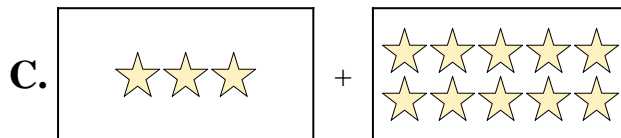
1) $6 + 3$




2) $3 + 10$



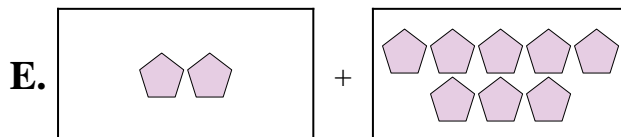
3) $4 + 5$



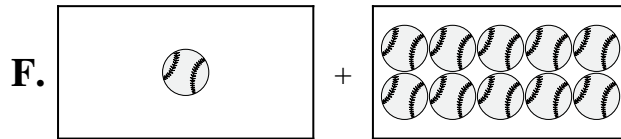
4) $2 + 8$



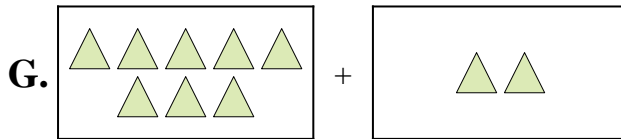
5) $8 + 2$



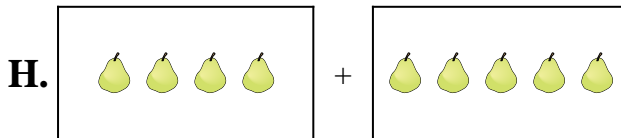
6) $5 + 8$



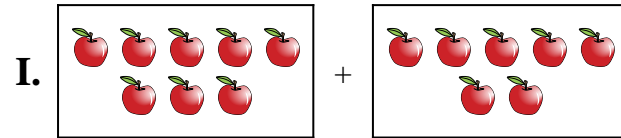
7) $8 + 7$



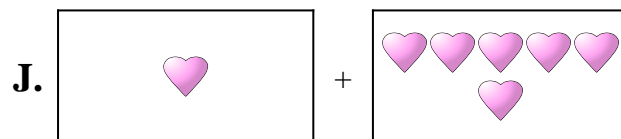
8) $10 + 1$



9) $1 + 6$



10) $1 + 10$




Answers

1. _____
2. _____
3. _____
4. _____
5. _____
6. _____
7. _____
8. _____
9. _____
10. _____

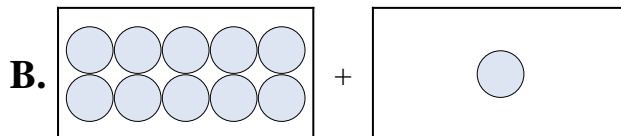


Match each addition equation to its visual equivalent.

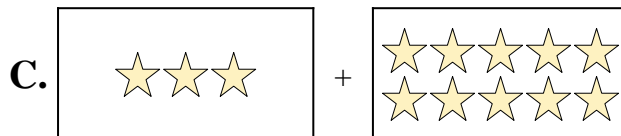
1) $6 + 3$



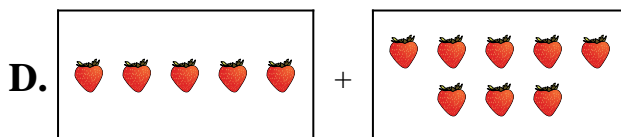
2) $3 + 10$



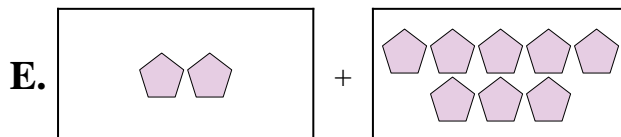
3) $4 + 5$



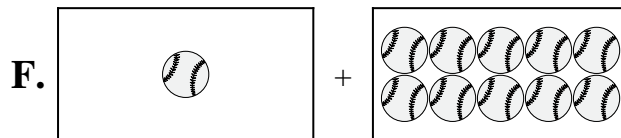
4) $2 + 8$



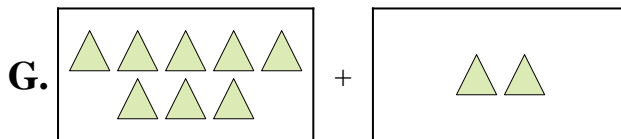
5) $8 + 2$



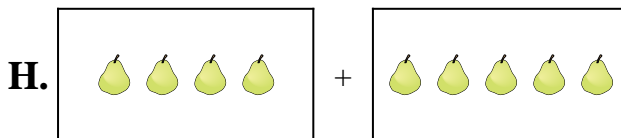
6) $5 + 8$



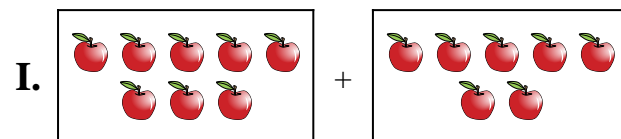
7) $8 + 7$



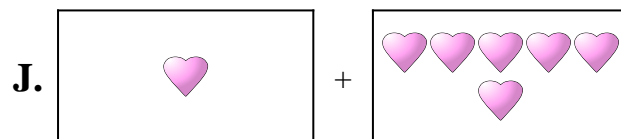
8) $10 + 1$



9) $1 + 6$



10) $1 + 10$



Answers

1. **A**

2. **C**

3. **H**

4. **E**

5. **G**

6. **D**

7. **I**

8. **B**

9. **J**

10. **F**