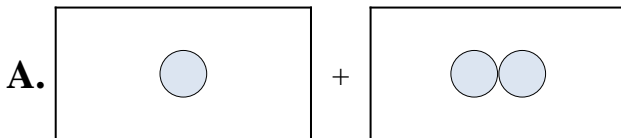




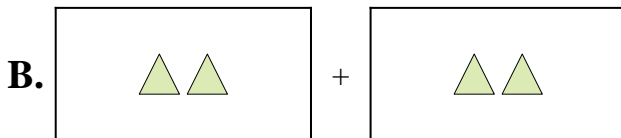
Match each addition equation to its visual equivalent.

Answers

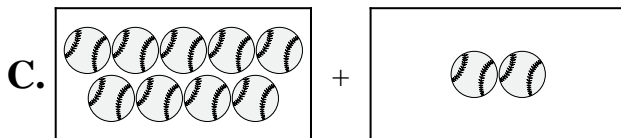
1) $9 + 2$



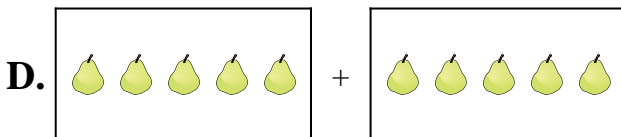
2) $2 + 6$



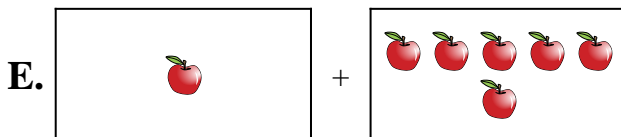
3) $1 + 2$



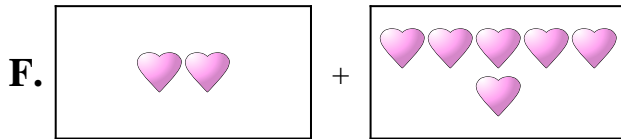
4) $1 + 6$




5) $3 + 4$



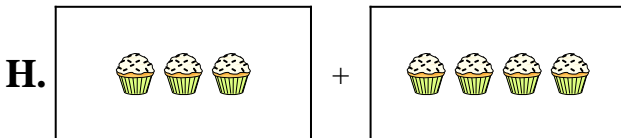
6) $10 + 10$



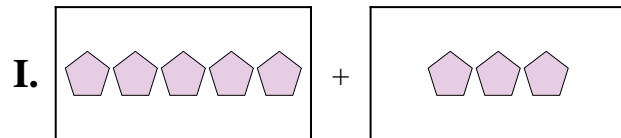
7) $5 + 3$



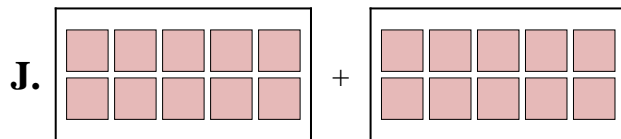
8) $7 + 10$



9) $2 + 2$



10) $5 + 5$

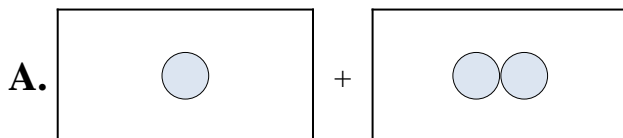


1. _____
2. _____
3. _____
4. _____
5. _____
6. _____
7. _____
8. _____
9. _____
10. _____

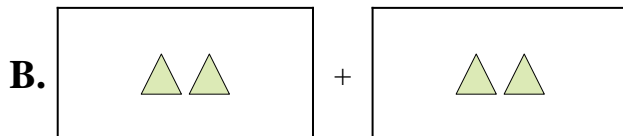


Match each addition equation to its visual equivalent.

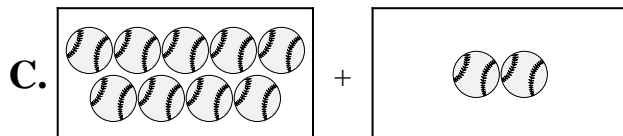
1) $9 + 2$



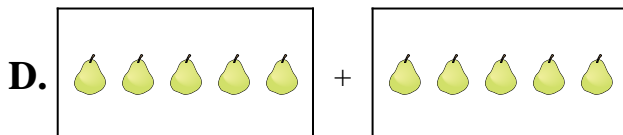
2) $2 + 6$



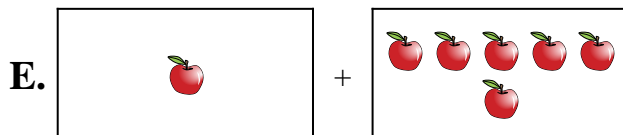
3) $1 + 2$



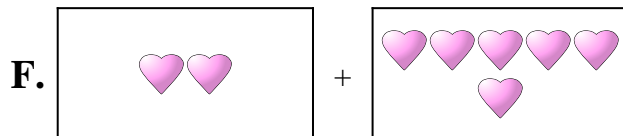
4) $1 + 6$



5) $3 + 4$




6) $10 + 10$



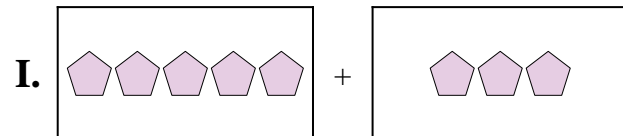
7) $5 + 3$



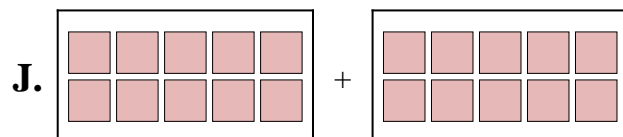
8) $7 + 10$



9) $2 + 2$



10) $5 + 5$



Answers

1. C

2. F

3. A

4. E

5. H

6. J

7. I

8. G

9. B

10. D