



Solve each problem.

1) $2 + 2 = \underline{\quad}$

2) $1 + 3 = \underline{\quad}$

3) $1 + 1 = \underline{\quad}$

4) $3 + 0 = \underline{\quad}$

5) $1 + 0 = \underline{\quad}$

6) $2 + 3 = \underline{\quad}$

7) $4 + 0 = \underline{\quad}$

8) $2 + 0 = \underline{\quad}$

9) $4 - 1 = \underline{\quad}$

10) $1 - 0 = \underline{\quad}$

11) $5 - 3 = \underline{\quad}$

12) $1 - 1 = \underline{\quad}$

13) $5 - 2 = \underline{\quad}$

14) $5 - 5 = \underline{\quad}$

15) $5 - 1 = \underline{\quad}$

16) $3 - 3 = \underline{\quad}$

Answers

1. _____

2. _____

3. _____

4. _____

5. _____

6. _____

7. _____

8. _____

9. _____

10. _____

11. _____

12. _____

13. _____

14. _____

15. _____

16. _____



Solve each problem.

1) $2 + 2 = \underline{4}$

2) $1 + 3 = \underline{4}$

3) $1 + 1 = \underline{2}$

4) $3 + 0 = \underline{3}$

5) $1 + 0 = \underline{1}$

6) $2 + 3 = \underline{5}$

7) $4 + 0 = \underline{4}$

8) $2 + 0 = \underline{2}$

9) $4 - 1 = \underline{3}$

10) $1 - 0 = \underline{1}$

11) $5 - 3 = \underline{2}$

12) $1 - 1 = \underline{0}$

13) $5 - 2 = \underline{3}$

14) $5 - 5 = \underline{0}$

15) $5 - 1 = \underline{4}$



16) $3 - 3 = \underline{0}$



Answers1. 42. 43. 24. 35. 16. 57. 48. 29. 310. 111. 212. 013. 314. 015. 416. 0






Solve each problem.


Answers



1) 2 + 2 = _____
 


2) 1 + 3 = _____
 


3) 1 + 1 = _____
 



4) 3 + 0 = _____



5) 1 + 0 = _____




6) 2 + 3 = _____
 



7) 4 + 0 = _____




8) 2 + 0 = _____




9) 4 - 1 = _____
 



10) 1 - 0 = _____




11) 5 - 3 = _____
 

12) 1 - 1 = _____
 

13) 5 - 2 = _____
 

14) 5 - 5 = _____
 

15) 5 - 1 = _____
 

16) 3 - 3 = _____
 

1. _____

2. _____

3. _____

4. _____

5. _____

6. _____

7. _____

8. _____

9. _____

10. _____

11. _____

12. _____

13. _____

14. _____

15. _____

16. _____