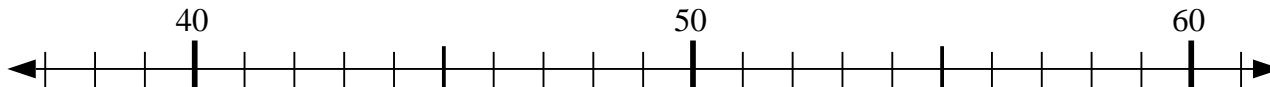




Use the numberlines to solve each problem.

Answers

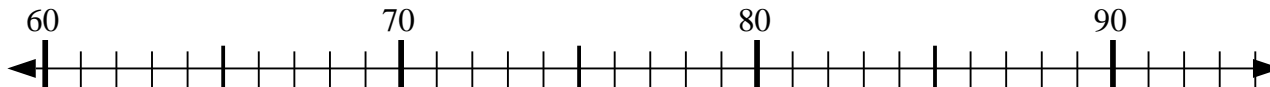
1) $50 - 8 = ?$



2) $61 + 12 = ?$



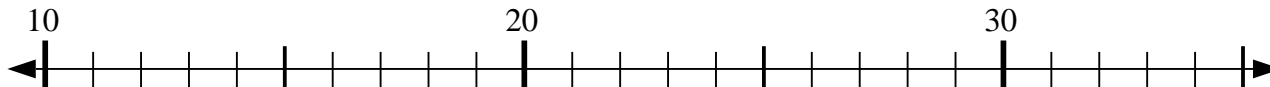
3) $60 + 5 = ?$



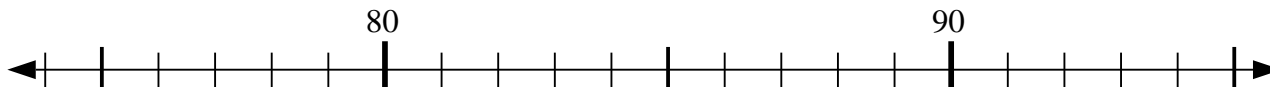
4) $39 + 5 = ?$



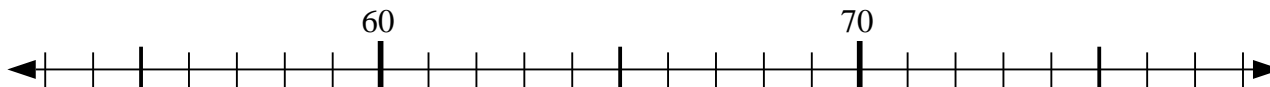
5) $12 + 16 = ?$



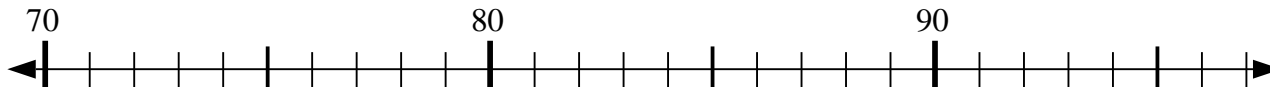
6) $82 - 8 = ?$



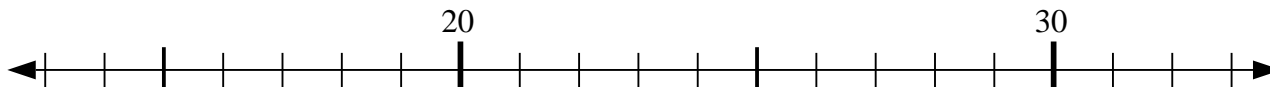
7) $55 + 7 = ?$



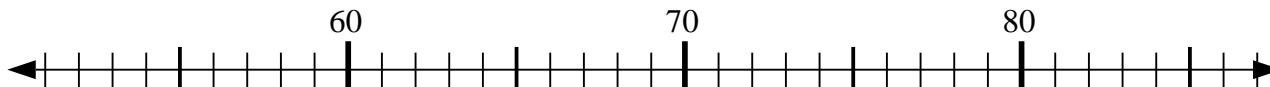
8) $72 + 21 = ?$



9) $19 + 2 = ?$



10) $62 - 9 = ?$

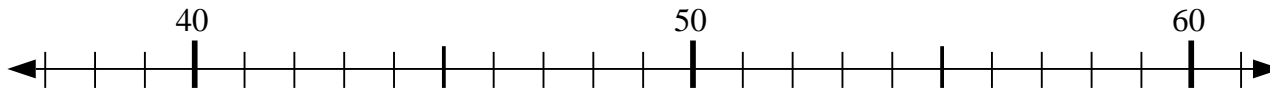


1. _____
2. _____
3. _____
4. _____
5. _____
6. _____
7. _____
8. _____
9. _____
10. _____

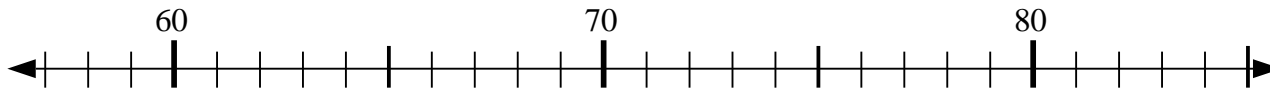


Use the numberlines to solve each problem.

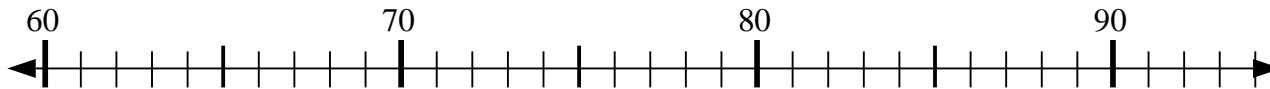
1) $50 - 8 = ?$



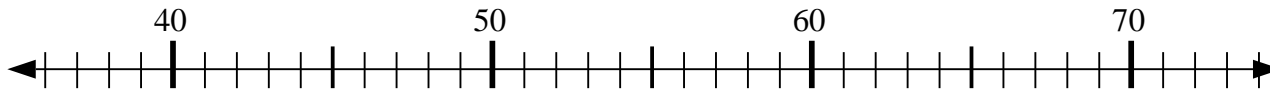
2) $61 + 12 = ?$



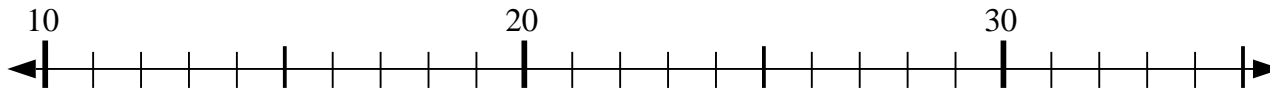
3) $60 + 5 = ?$



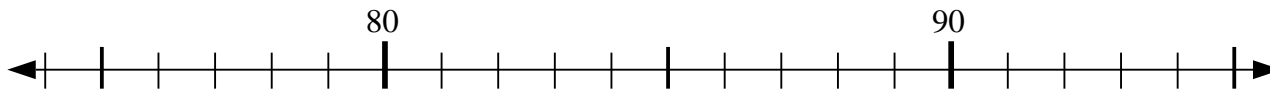
4) $39 + 5 = ?$



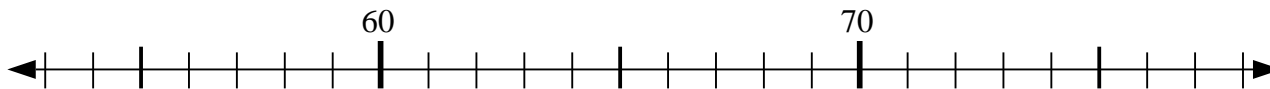
5) $12 + 16 = ?$



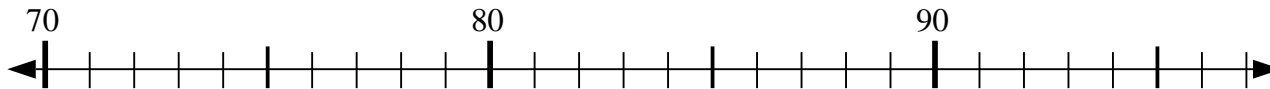
6) $82 - 8 = ?$



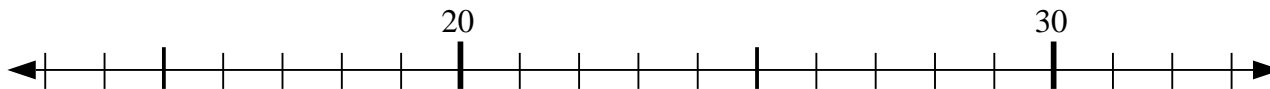
7) $55 + 7 = ?$



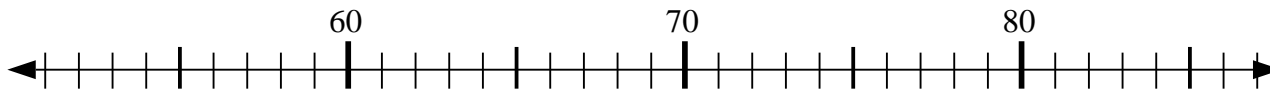
8) $72 + 21 = ?$



9) $19 + 2 = ?$



10) $62 - 9 = ?$



Answers

1. 42
2. 73
3. 65
4. 44
5. 28
6. 74
7. 62
8. 93
9. 21
10. 53