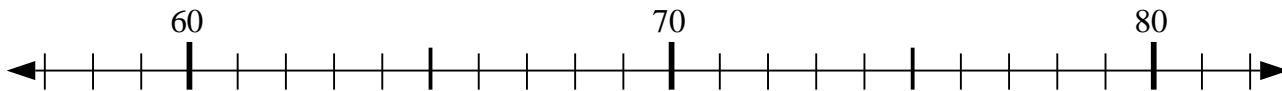




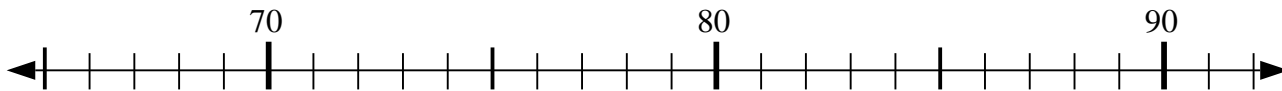
Use the numberlines to solve each problem.

Answers

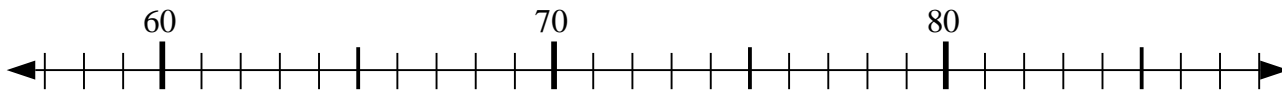
1) $74 + 3 = ?$



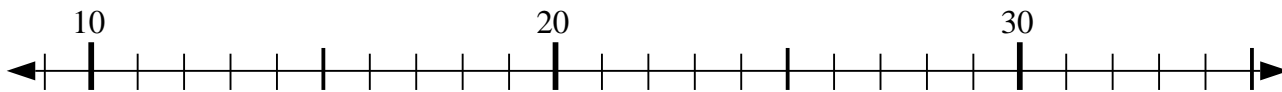
2) $71 - 2 = ?$



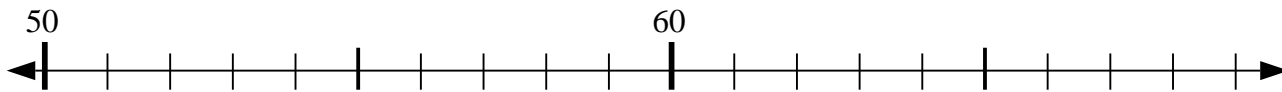
3) $83 - 16 = ?$



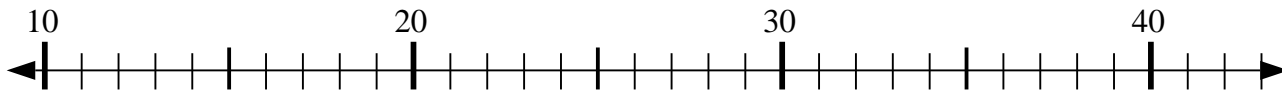
4) $18 - 5 = ?$



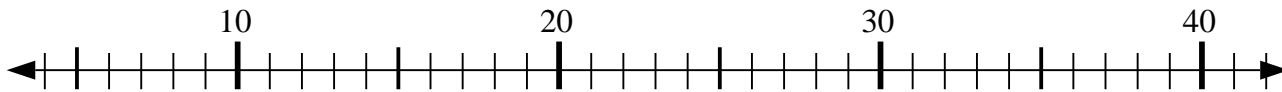
5) $51 + 9 = ?$



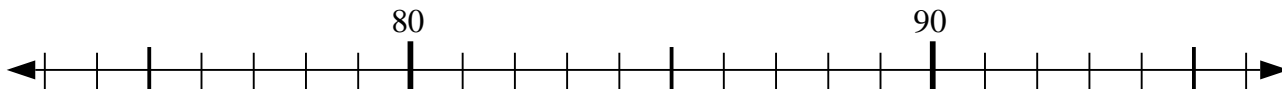
6) $17 + 6 = ?$



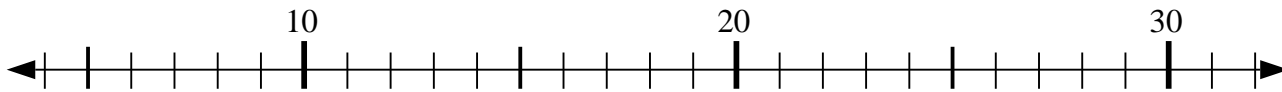
7) $17 - 13 = ?$



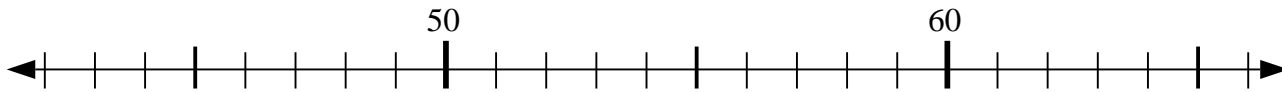
8) $81 + 12 = ?$



9) $28 - 1 = ?$



10) $53 + 3 = ?$

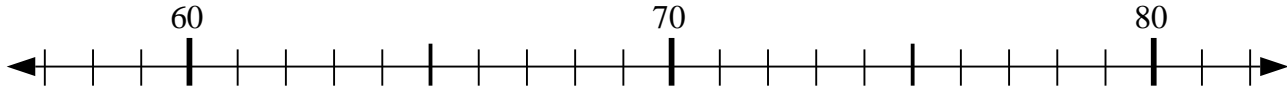


1. _____
2. _____
3. _____
4. _____
5. _____
6. _____
7. _____
8. _____
9. _____
10. _____

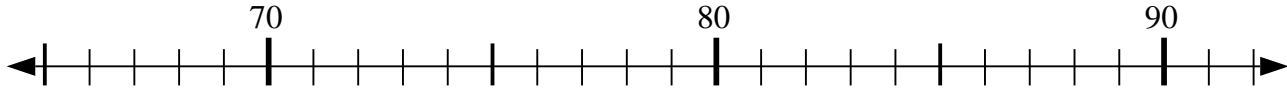


Use the numberlines to solve each problem.

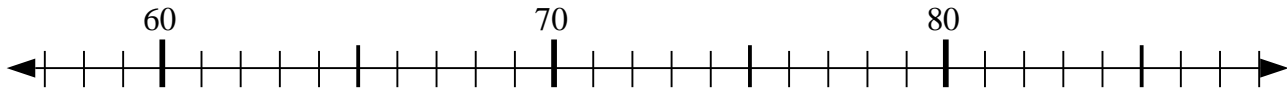
1) $74 + 3 = ?$



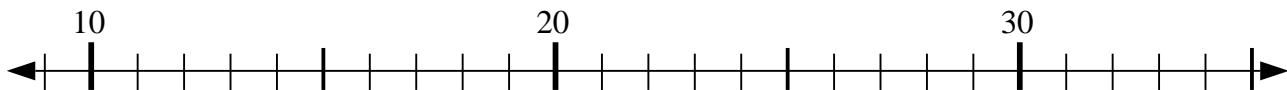
2) $71 - 2 = ?$



3) $83 - 16 = ?$



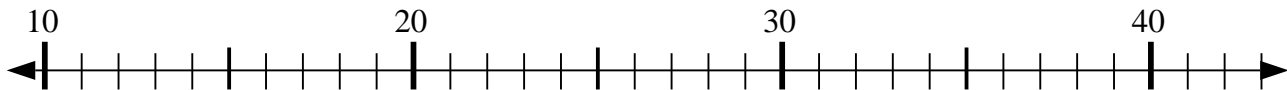
4) $18 - 5 = ?$



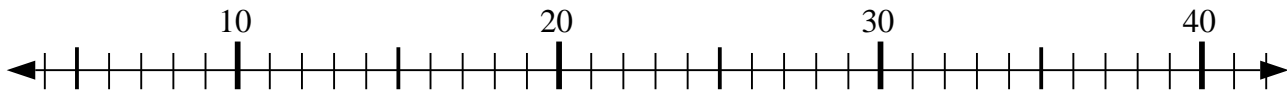
5) $51 + 9 = ?$



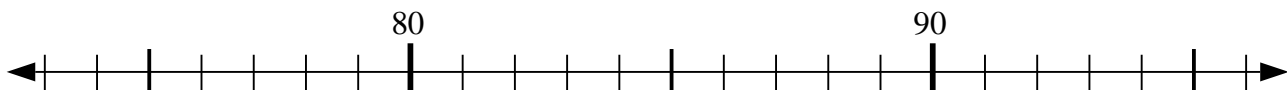
6) $17 + 6 = ?$



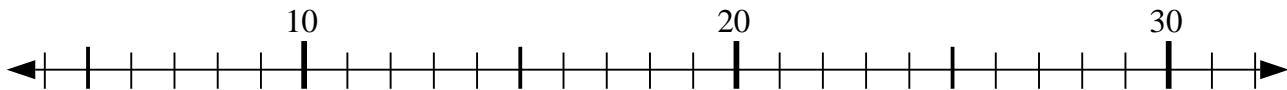
7) $17 - 13 = ?$



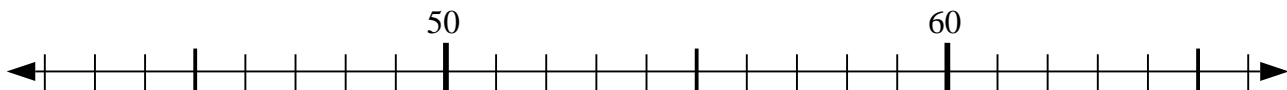
8) $81 + 12 = ?$



9) $28 - 1 = ?$



10) $53 + 3 = ?$



Answers

1. 77
2. 69
3. 67
4. 13
5. 60
6. 23
7. 4
8. 93
9. 27
10. 56