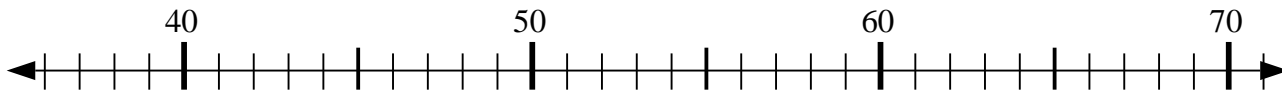




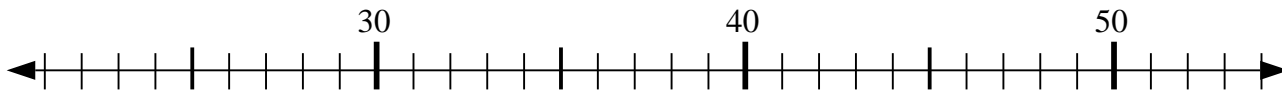
Use the numberlines to solve each problem.

**Answers**

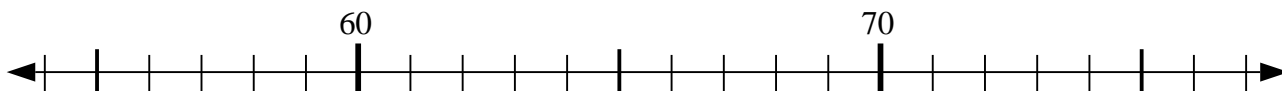
1)  $64 + 7 = ?$



2)  $29 + 5 = ?$



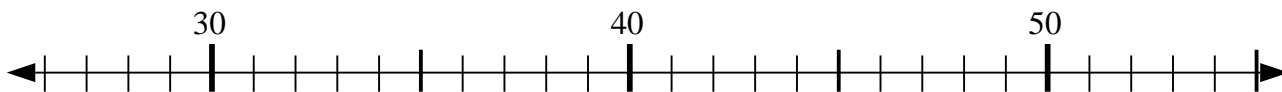
3)  $70 - 7 = ?$



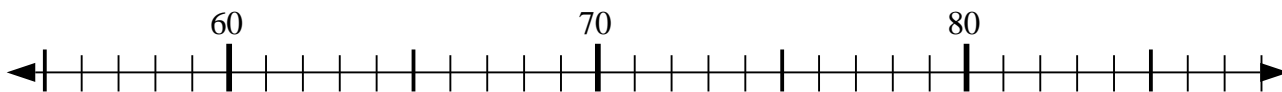
4)  $56 + 13 = ?$



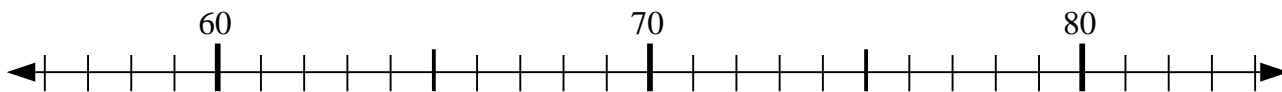
5)  $49 - 14 = ?$



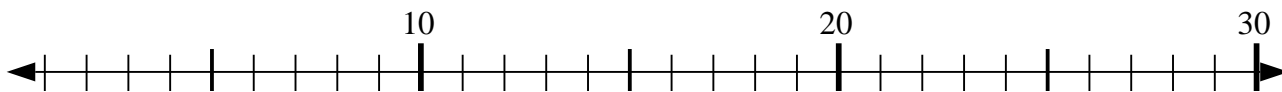
6)  $83 - 8 = ?$



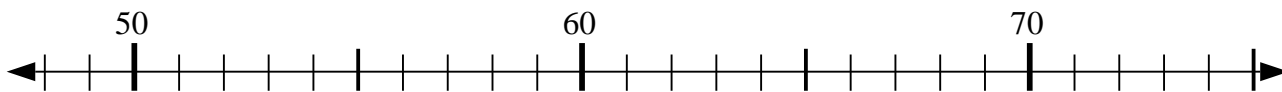
7)  $66 - 10 = ?$



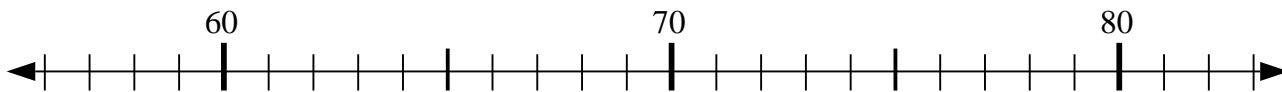
8)  $19 - 14 = ?$



9)  $54 - 2 = ?$



10)  $76 + 7 = ?$

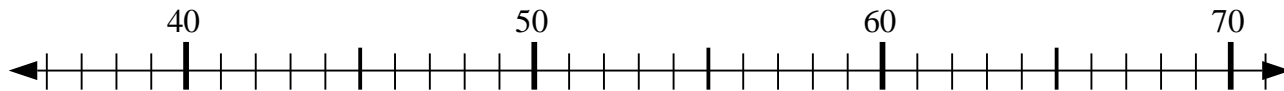


1. \_\_\_\_\_
2. \_\_\_\_\_
3. \_\_\_\_\_
4. \_\_\_\_\_
5. \_\_\_\_\_
6. \_\_\_\_\_
7. \_\_\_\_\_
8. \_\_\_\_\_
9. \_\_\_\_\_
10. \_\_\_\_\_

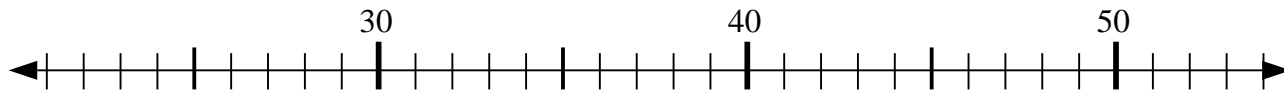


Use the numberlines to solve each problem.

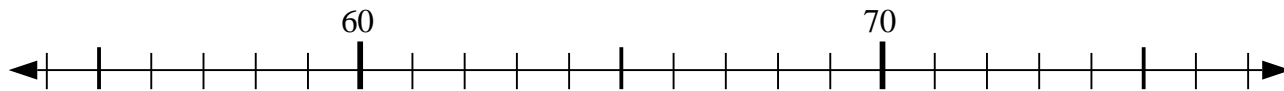
1)  $64 + 7 = ?$



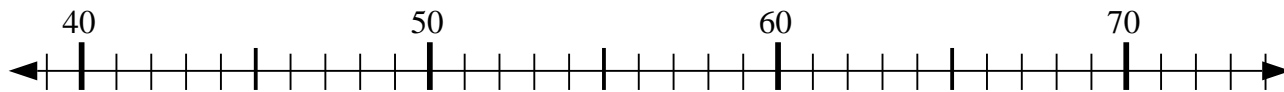
2)  $29 + 5 = ?$



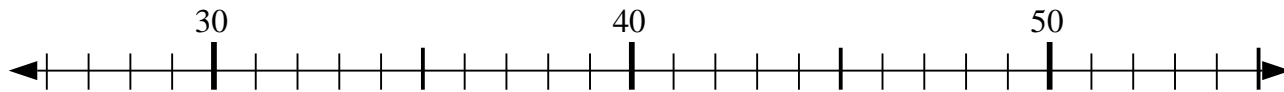
3)  $70 - 7 = ?$



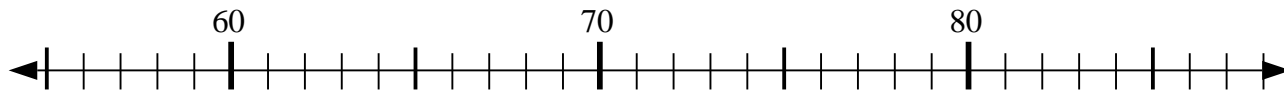
4)  $56 + 13 = ?$



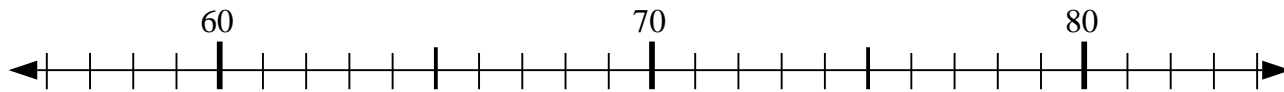
5)  $49 - 14 = ?$



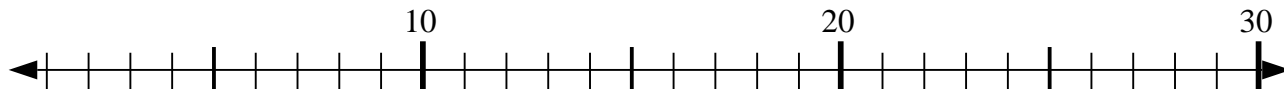
6)  $83 - 8 = ?$



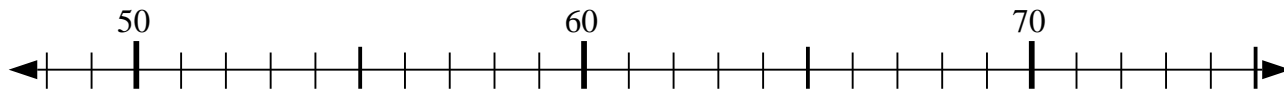
7)  $66 - 10 = ?$



8)  $19 - 14 = ?$



9)  $54 - 2 = ?$



10)  $76 + 7 = ?$



Answers

1. 71
2. 34
3. 63
4. 69
5. 35
6. 75
7. 56
8. 5
9. 52
10. 83