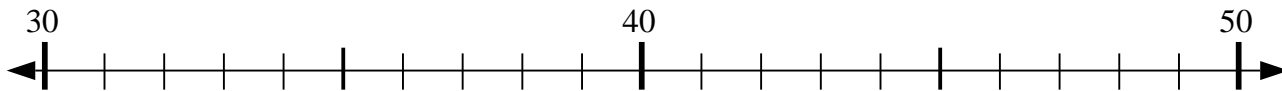




Use the numberlines to solve each problem.

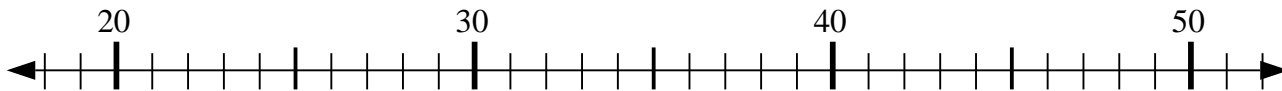
Answers

1) $35 + 6 = ?$



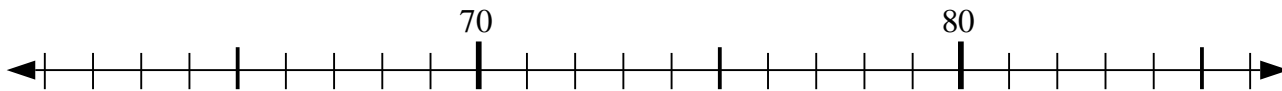
1. _____

2) $23 + 0 = ?$



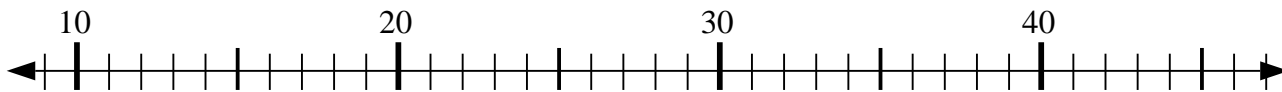
2. _____

3) $65 + 4 = ?$



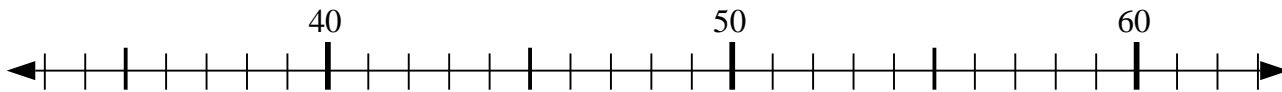
3. _____

4) $11 + 6 = ?$



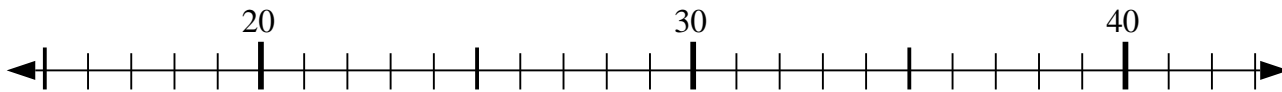
4. _____

5) $57 - 24 = ?$



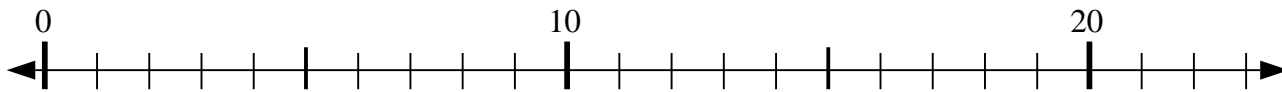
5. _____

6) $36 - 0 = ?$



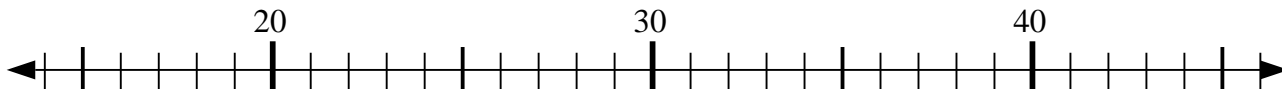
6. _____

7) $3 + 19 = ?$



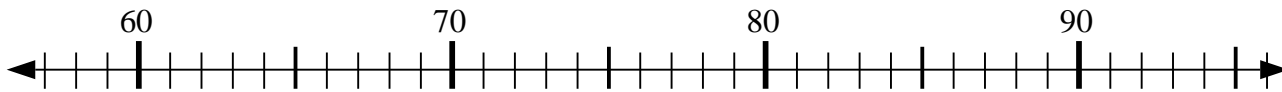
7. _____

8) $20 - 5 = ?$



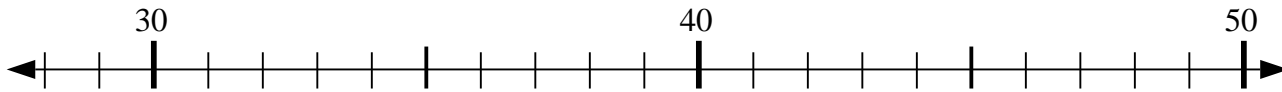
8. _____

9) $81 - 9 = ?$



9. _____

10) $44 - 9 = ?$

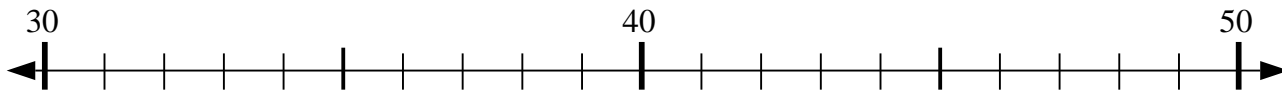


10. _____

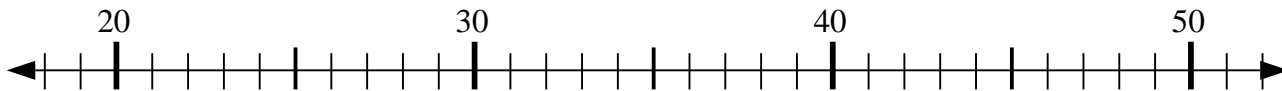


Use the numberlines to solve each problem.

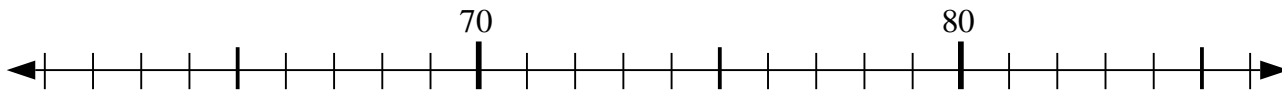
1) $35 + 6 = ?$



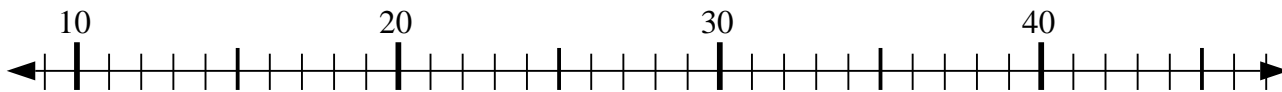
2) $23 + 0 = ?$



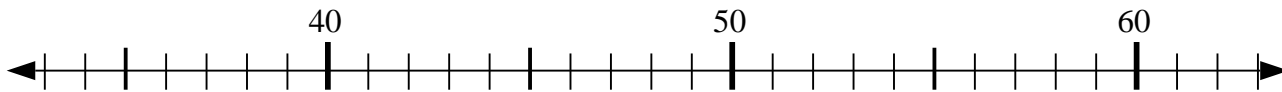
3) $65 + 4 = ?$



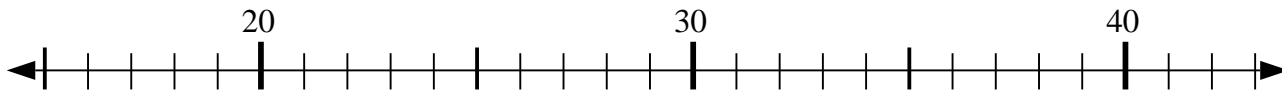
4) $11 + 6 = ?$



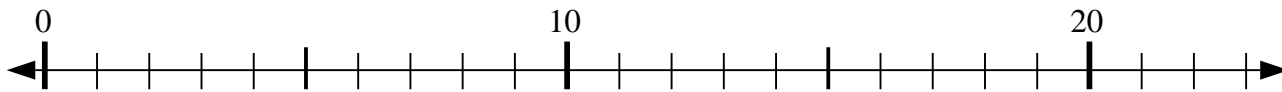
5) $57 - 24 = ?$



6) $36 - 0 = ?$



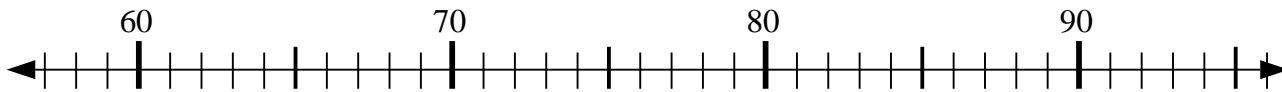
7) $3 + 19 = ?$



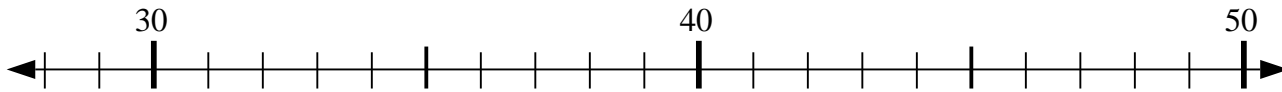
8) $20 - 5 = ?$



9) $81 - 9 = ?$



10) $44 - 9 = ?$



Answers

1. 41

2. 23

3. 69

4. 17

5. 33

6. 36

7. 22

8. 15

9. 72

10. 35