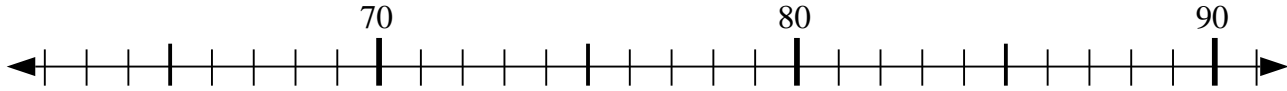


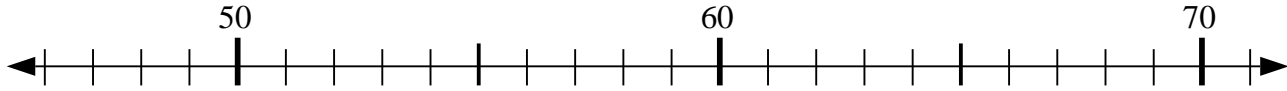


Use the numberlines to solve each problem.

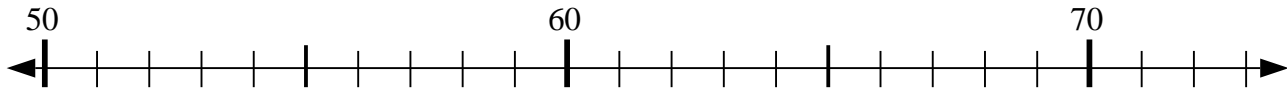
1) $76 - 2 = ?$



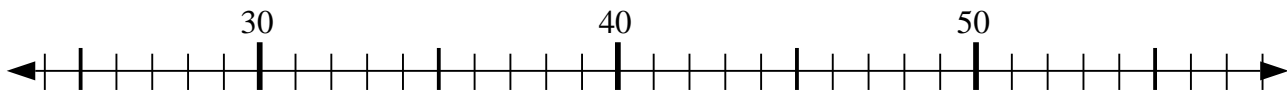
2) $57 + 4 = ?$



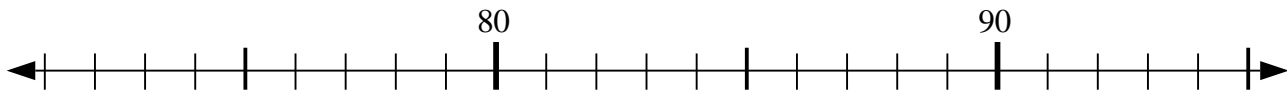
3) $51 + 7 = ?$



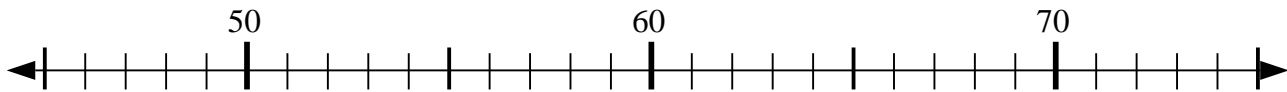
4) $34 - 3 = ?$



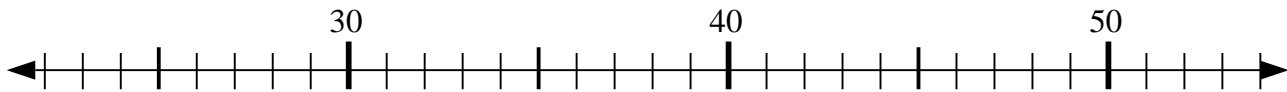
5) $87 - 9 = ?$



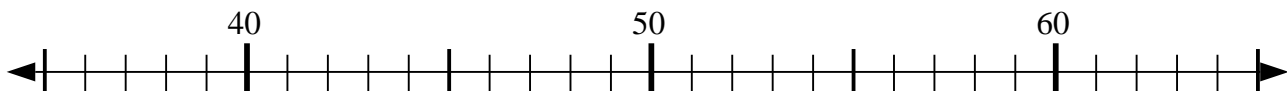
6) $50 + 6 = ?$



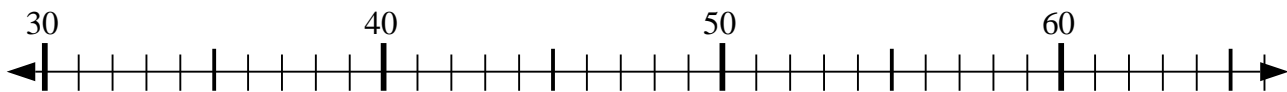
7) $32 - 10 = ?$



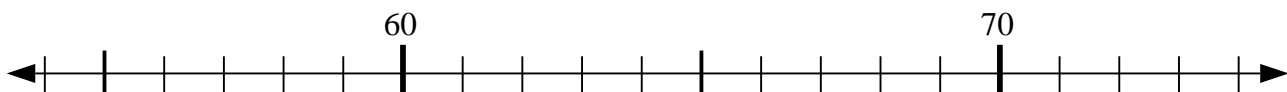
8) $57 - 5 = ?$



9) $35 + 26 = ?$



10) $71 + 0 = ?$



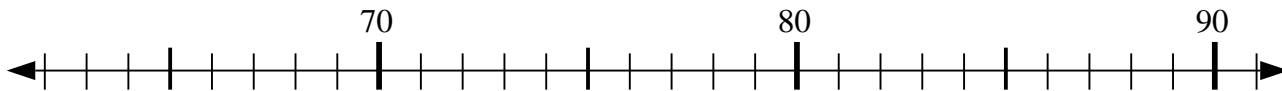
Answers

1. _____
2. _____
3. _____
4. _____
5. _____
6. _____
7. _____
8. _____
9. _____
10. _____

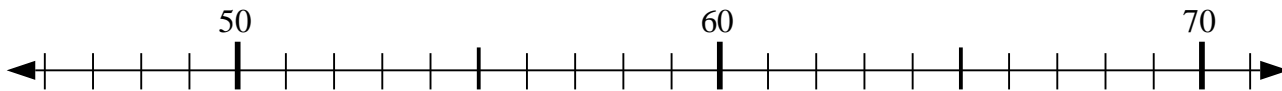


Use the numberlines to solve each problem.

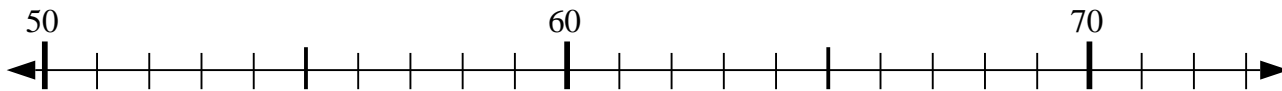
1) $76 - 2 = ?$



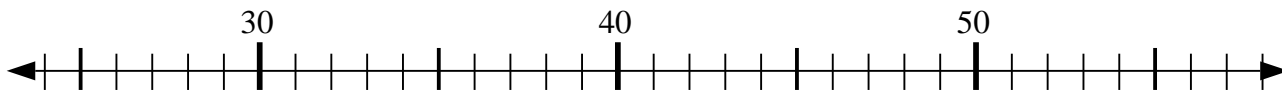
2) $57 + 4 = ?$



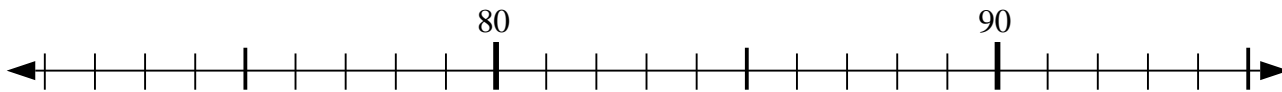
3) $51 + 7 = ?$



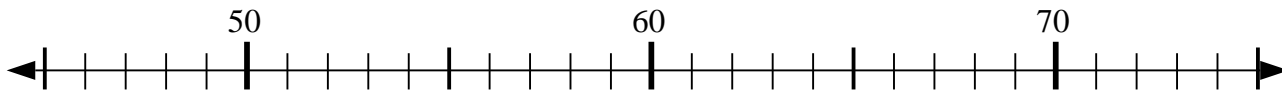
4) $34 - 3 = ?$



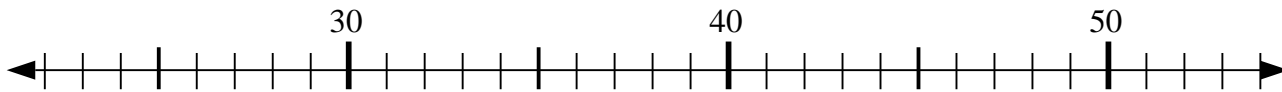
5) $87 - 9 = ?$



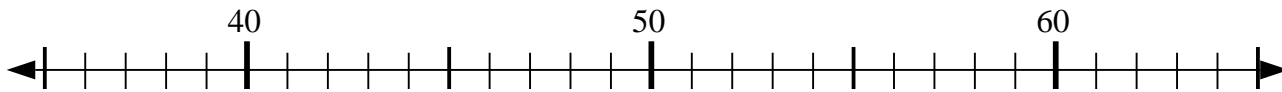
6) $50 + 6 = ?$



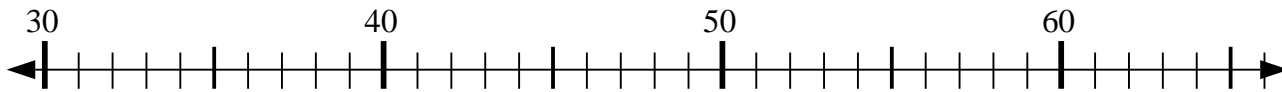
7) $32 - 10 = ?$



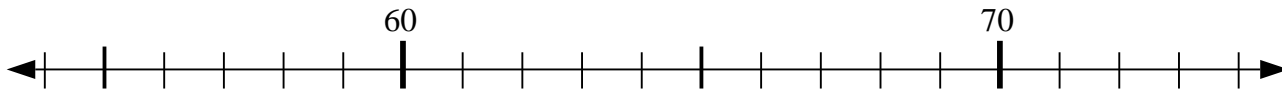
8) $57 - 5 = ?$



9) $35 + 26 = ?$



10) $71 + 0 = ?$



Answers

1. 74
2. 61
3. 58
4. 31
5. 78
6. 56
7. 22
8. 52
9. 61
10. 71