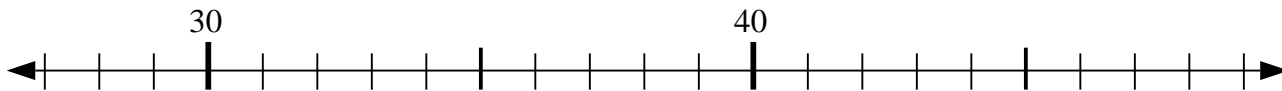


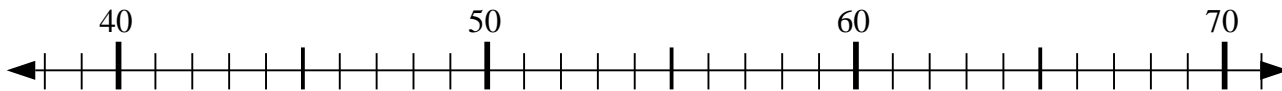


Use the numberlines to solve each problem.

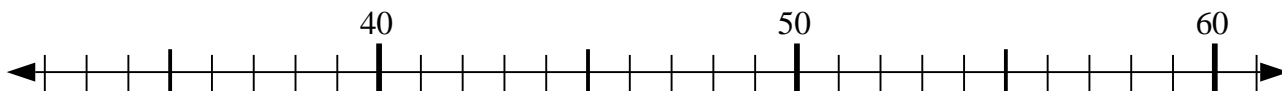
1) $31 + 14 = ?$



2) $39 + 15 = ?$



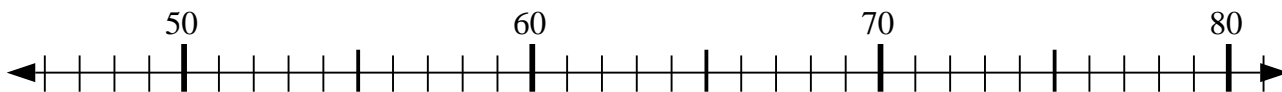
3) $51 - 10 = ?$



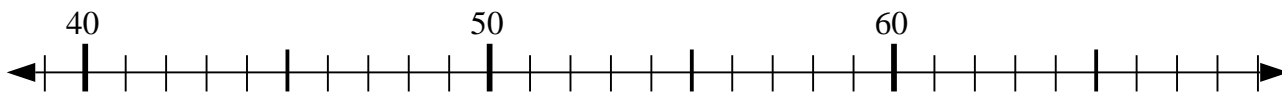
4) $37 - 7 = ?$



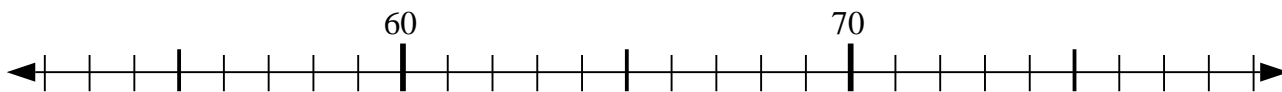
5) $60 - 8 = ?$



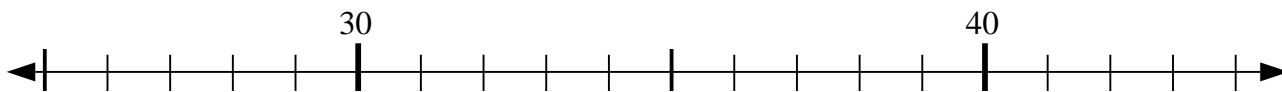
6) $46 - 4 = ?$



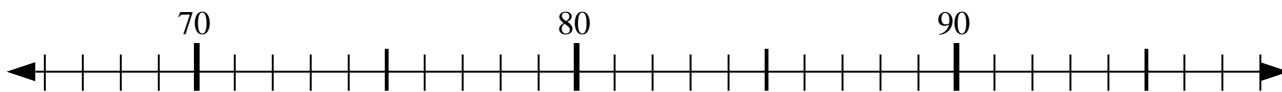
7) $73 + 4 = ?$



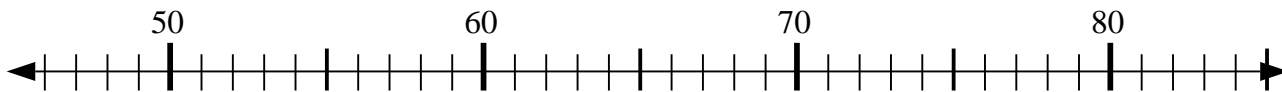
8) $35 + 6 = ?$



9) $91 + 0 = ?$



10) $65 + 6 = ?$



Answers

1. _____

2. _____

3. _____

4. _____

5. _____

6. _____

7. _____

8. _____

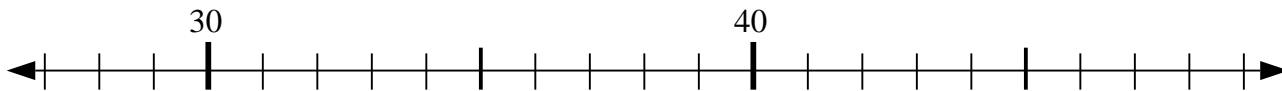
9. _____

10. _____

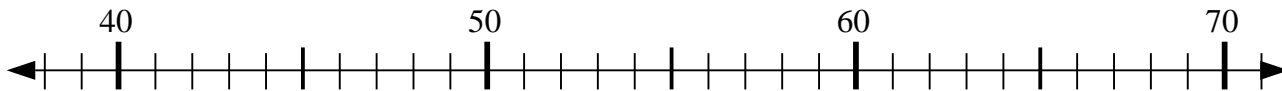


Use the numberlines to solve each problem.

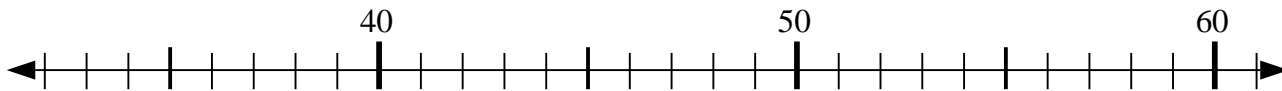
1) $31 + 14 = ?$



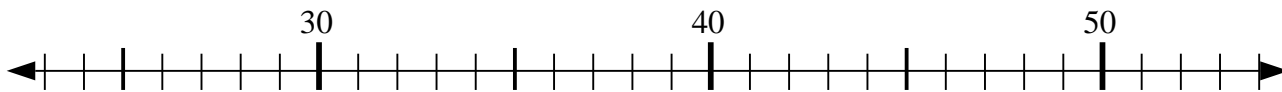
2) $39 + 15 = ?$



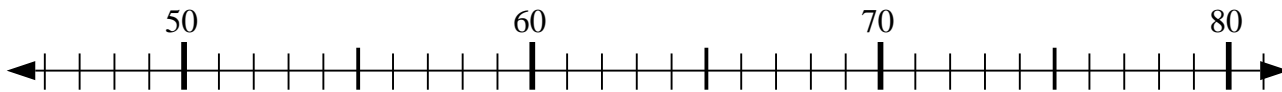
3) $51 - 10 = ?$



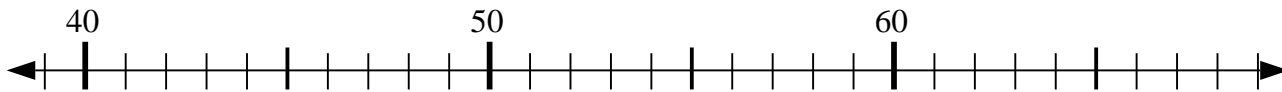
4) $37 - 7 = ?$



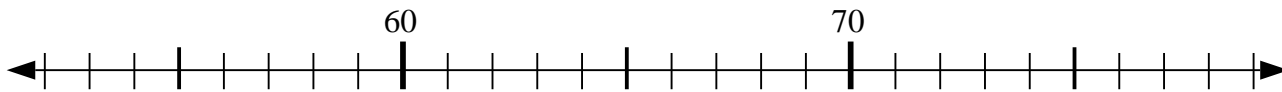
5) $60 - 8 = ?$



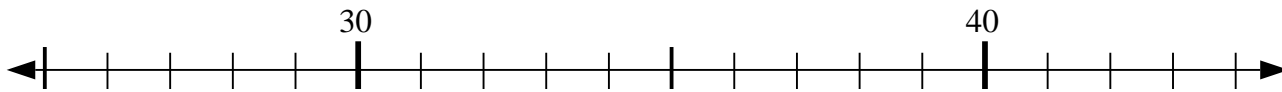
6) $46 - 4 = ?$



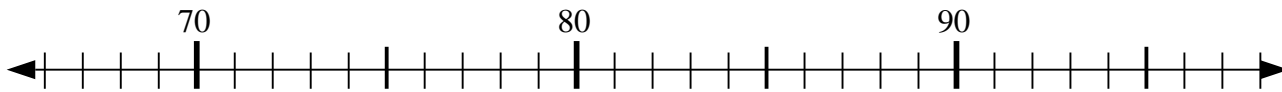
7) $73 + 4 = ?$



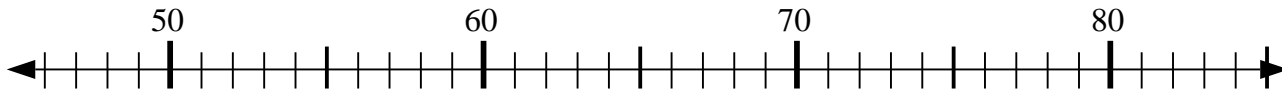
8) $35 + 6 = ?$



9) $91 + 0 = ?$



10) $65 + 6 = ?$



Answers

1. 45

2. 54

3. 41

4. 30

5. 52

6. 42

7. 77

8. 41

9. 91

10. 71