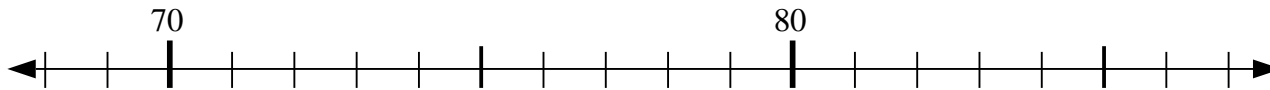




Use the numberlines to solve each problem.

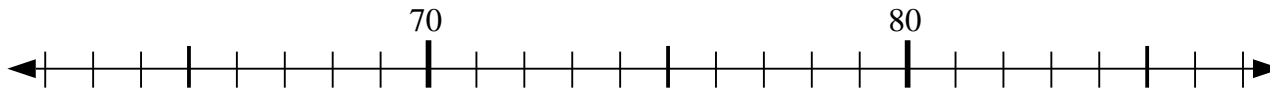
**Answers**

1)  $74 + 1 = ?$



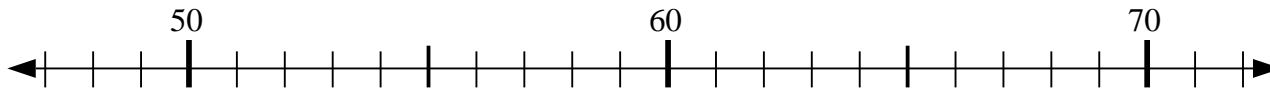
1. \_\_\_\_\_

2)  $62 + 19 = ?$



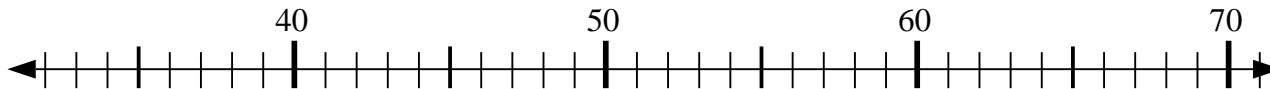
2. \_\_\_\_\_

3)  $66 - 6 = ?$



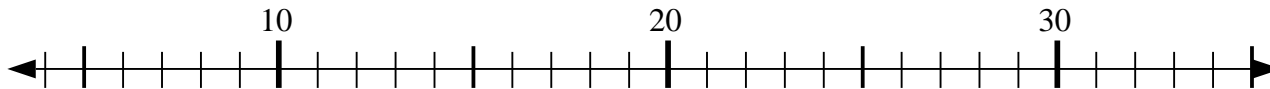
3. \_\_\_\_\_

4)  $34 + 12 = ?$



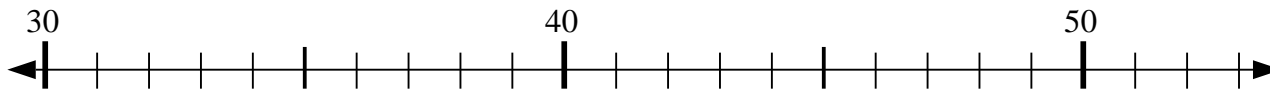
4. \_\_\_\_\_

5)  $20 - 4 = ?$



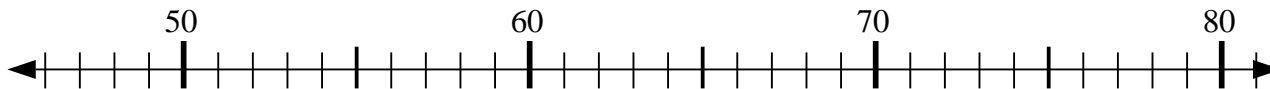
5. \_\_\_\_\_

6)  $36 + 5 = ?$



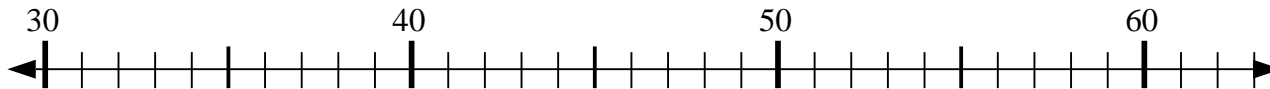
6. \_\_\_\_\_

7)  $55 + 26 = ?$



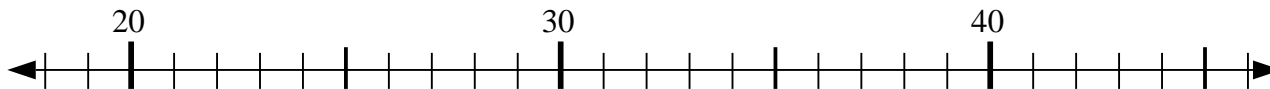
7. \_\_\_\_\_

8)  $61 - 24 = ?$



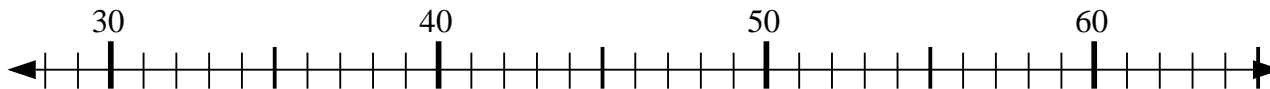
8. \_\_\_\_\_

9)  $27 - 5 = ?$



9. \_\_\_\_\_

10)  $42 - 8 = ?$

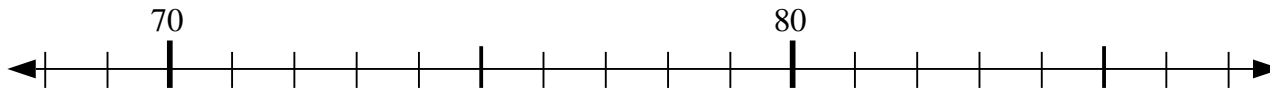


10. \_\_\_\_\_

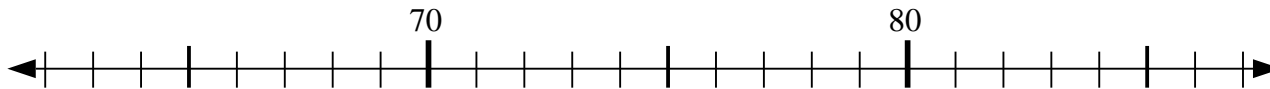


Use the numberlines to solve each problem.

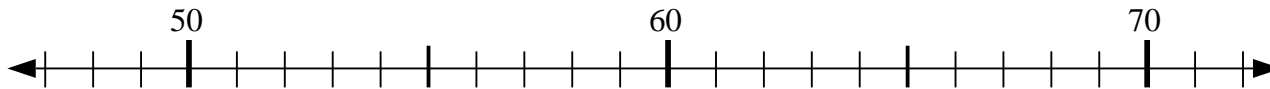
1)  $74 + 1 = ?$



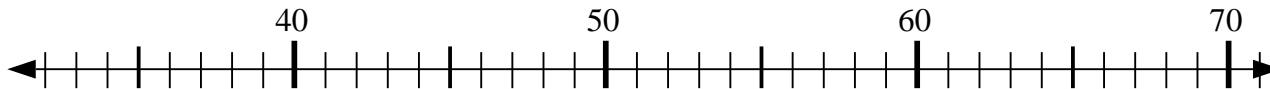
2)  $62 + 19 = ?$



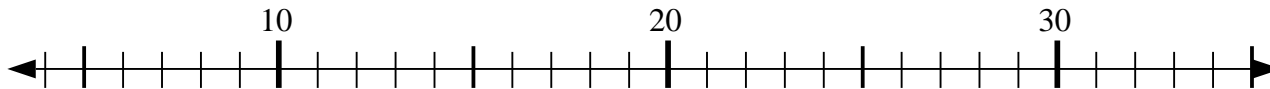
3)  $66 - 6 = ?$



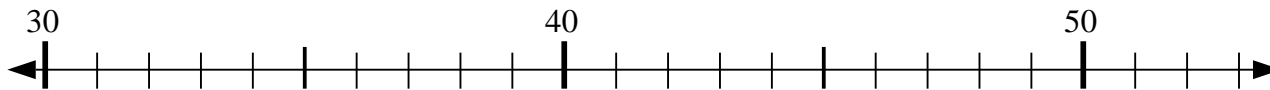
4)  $34 + 12 = ?$



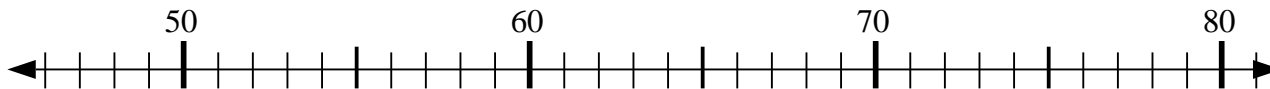
5)  $20 - 4 = ?$



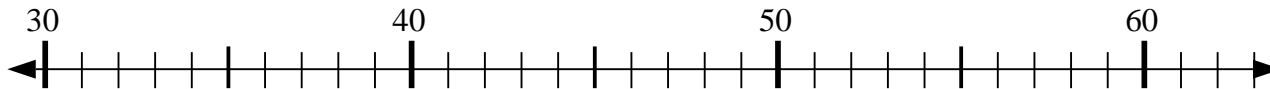
6)  $36 + 5 = ?$



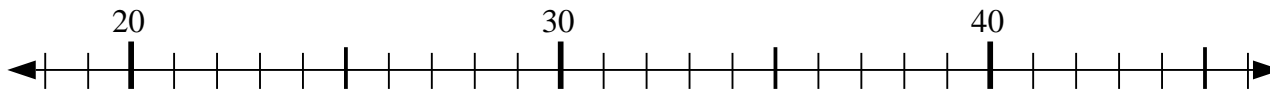
7)  $55 + 26 = ?$



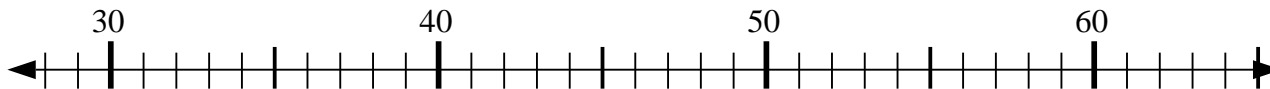
8)  $61 - 24 = ?$



9)  $27 - 5 = ?$



10)  $42 - 8 = ?$



**Answers**

1. 75
2. 81
3. 60
4. 46
5. 16
6. 41
7. 81
8. 37
9. 22
10. 34