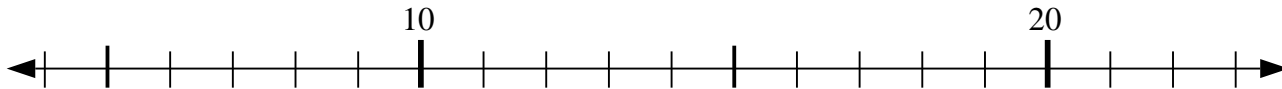




Use the numberlines to solve each problem.

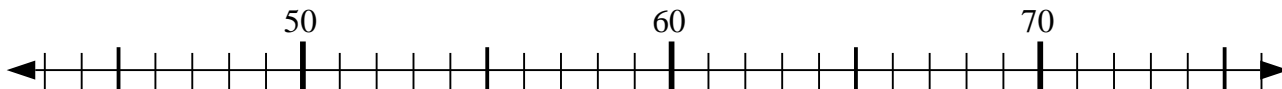
1) $10 - 1 = ?$



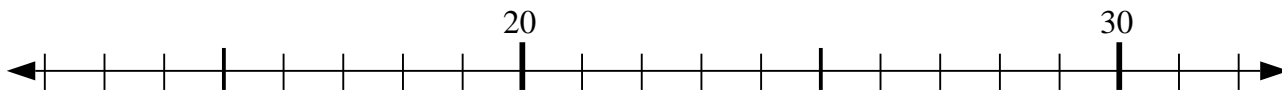
2) $23 - 6 = ?$



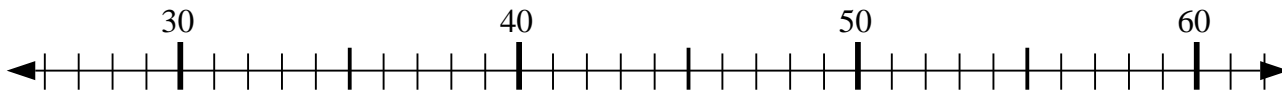
3) $57 - 4 = ?$



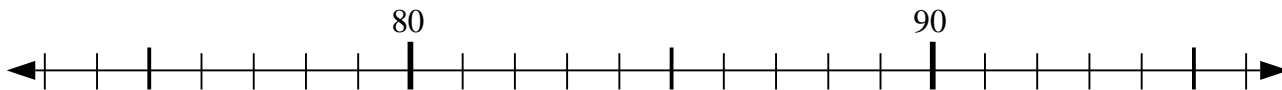
4) $17 - 5 = ?$



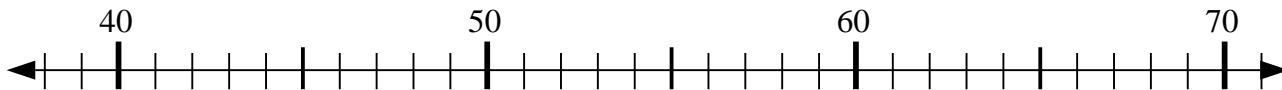
5) $31 + 13 = ?$



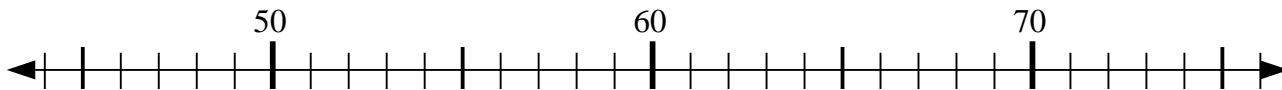
6) $73 + 20 = ?$



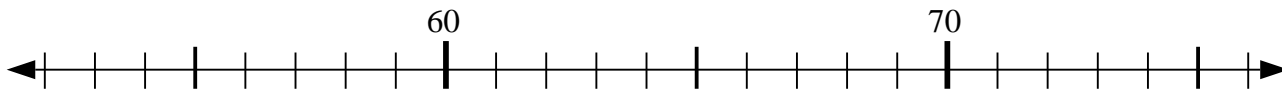
7) $54 + 3 = ?$



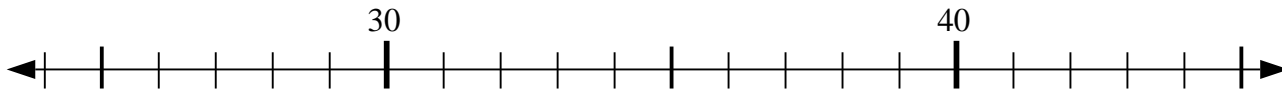
8) $45 + 28 = ?$



9) $60 - 3 = ?$



10) $24 + 7 = ?$



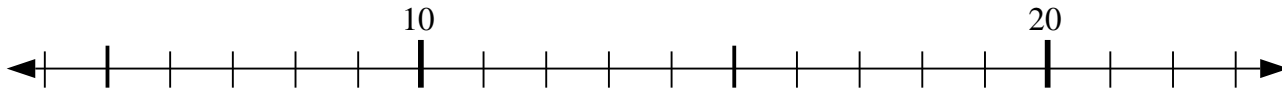
Answers

1. _____
2. _____
3. _____
4. _____
5. _____
6. _____
7. _____
8. _____
9. _____
10. _____



Use the numberlines to solve each problem.

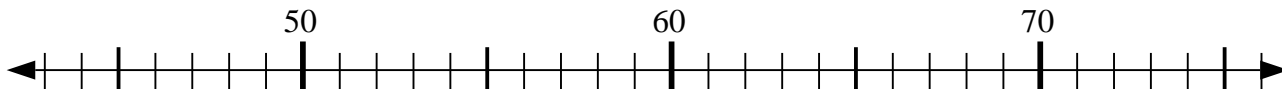
1) $10 - 1 = ?$



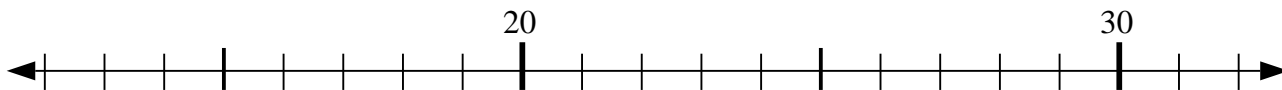
2) $23 - 6 = ?$



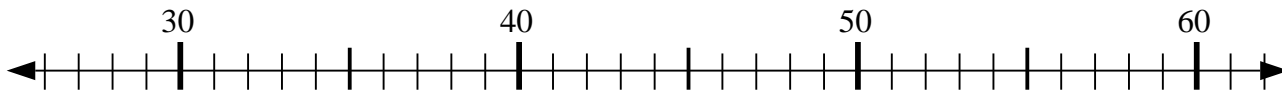
3) $57 - 4 = ?$



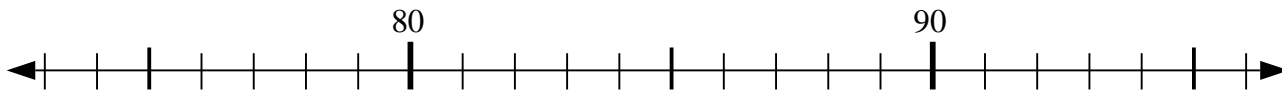
4) $17 - 5 = ?$



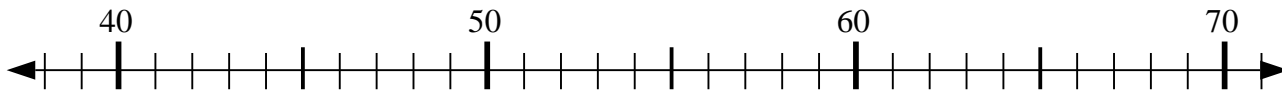
5) $31 + 13 = ?$



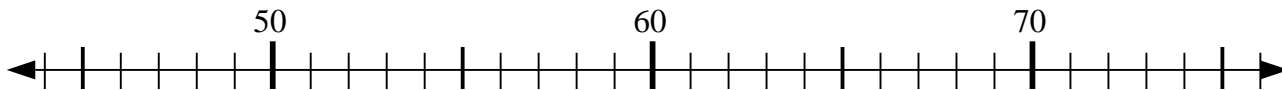
6) $73 + 20 = ?$



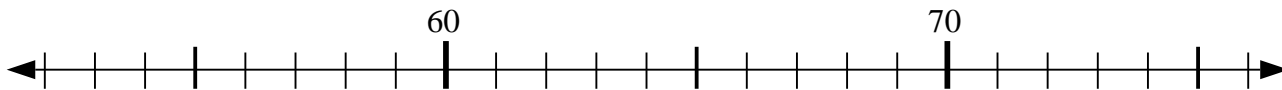
7) $54 + 3 = ?$



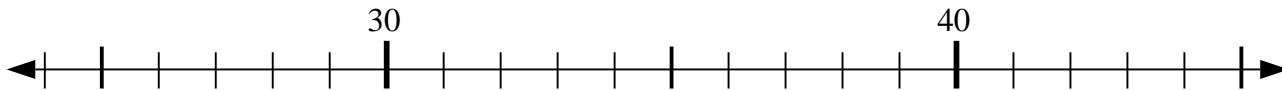
8) $45 + 28 = ?$



9) $60 - 3 = ?$



10) $24 + 7 = ?$



Answers

1. 9

2. 17

3. 53

4. 12

5. 44

6. 93

7. 57

8. 73

9. 57

10. 31