





Use the blocks to determine the total quantities.



5 hundreds = 50 tens = 500 ones

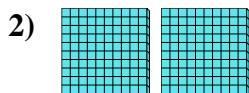
Answers

Ex. 5 50 500




\_\_\_\_\_ hundreds = \_\_\_\_\_ tens = \_\_\_\_\_ ones

1. \_\_\_\_\_



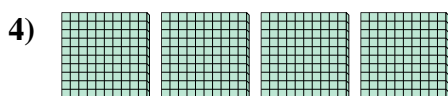
\_\_\_\_\_ hundreds = \_\_\_\_\_ tens = \_\_\_\_\_ ones

2. \_\_\_\_\_



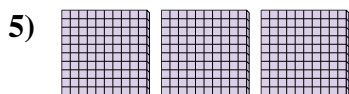
\_\_\_\_\_ hundreds = \_\_\_\_\_ tens = \_\_\_\_\_ ones

3. \_\_\_\_\_



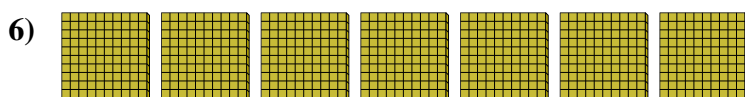
\_\_\_\_\_ hundreds = \_\_\_\_\_ tens = \_\_\_\_\_ ones

4. \_\_\_\_\_



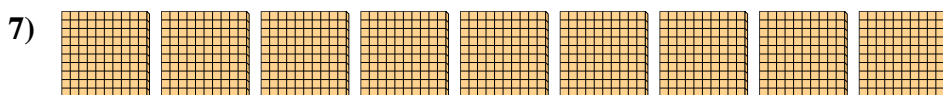
\_\_\_\_\_ hundreds = \_\_\_\_\_ tens = \_\_\_\_\_ ones

5. \_\_\_\_\_




\_\_\_\_\_ hundreds = \_\_\_\_\_ tens = \_\_\_\_\_ ones

6. \_\_\_\_\_



\_\_\_\_\_ hundreds = \_\_\_\_\_ tens = \_\_\_\_\_ ones

7. \_\_\_\_\_




\_\_\_\_\_ hundreds = \_\_\_\_\_ tens = \_\_\_\_\_ ones


8. \_\_\_\_\_



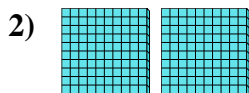
Use the blocks to determine the total quantities.




5 hundreds = 50 tens = 500 ones



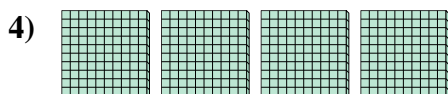
1 hundreds = 10 tens = 100 ones



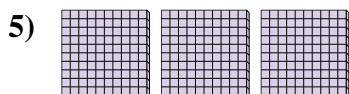
2 hundreds = 20 tens = 200 ones




8 hundreds = 80 tens = 800 ones



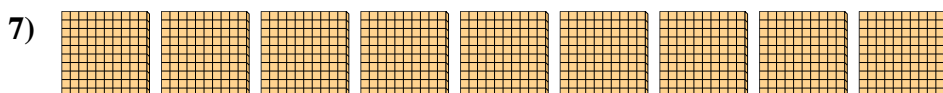
4 hundreds = 40 tens = 400 ones



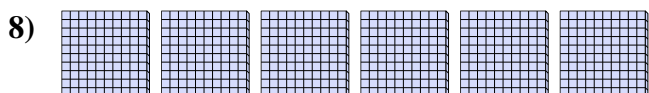
3 hundreds = 30 tens = 300 ones



7 hundreds = 70 tens = 700 ones



9 hundreds = 90 tens = 900 ones



6 hundreds = 60 tens = 600 ones

Answers

Ex. 5      50      500

1. 1      10      100

2. 2      20      200

3. 8      80      800

4. 4      40      400

5. 3      30      300

6. 7      70      700

7. 9      90      900

8. 6      60      600