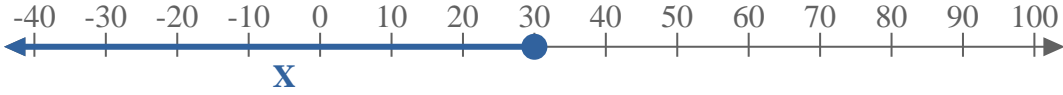
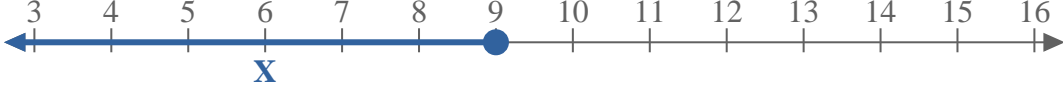
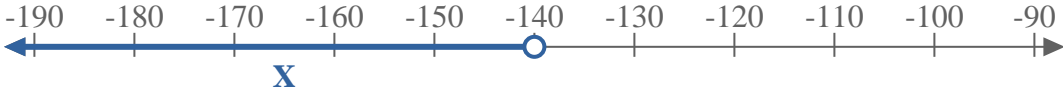


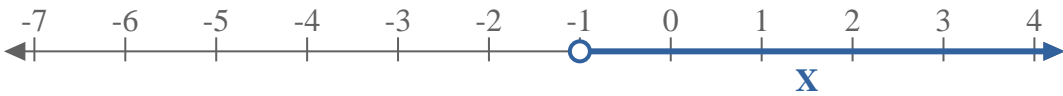



Write an inequality to express the number line.


Ex) 

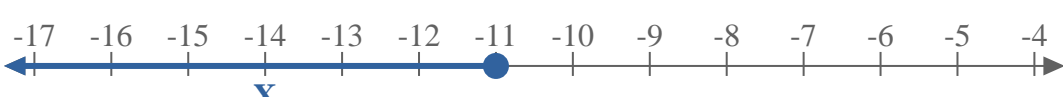
1) 

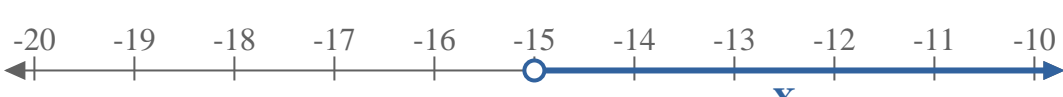
2) 


3) 


4) 


5) 


6) 


7) 


8) 

9) 

10) 

11) 

12) 

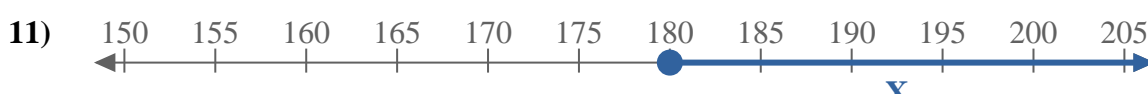
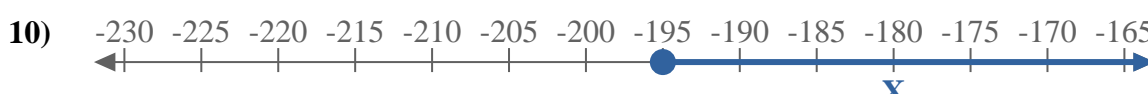
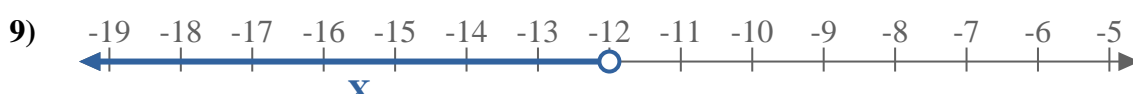
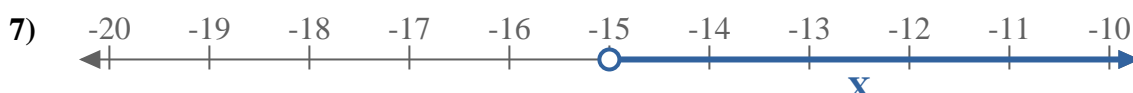
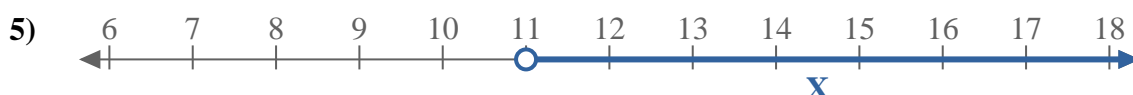
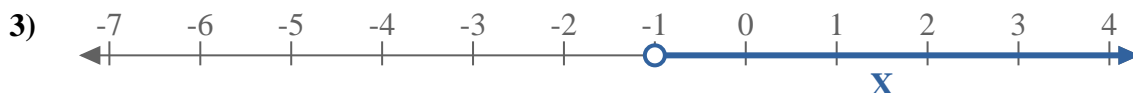
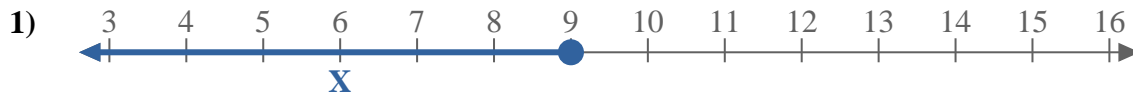
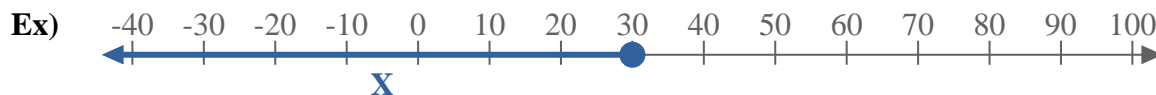
13) 

Answers

- Ex. $X \leq 30$
1. _____
2. _____
3. _____
4. _____
5. _____
6. _____
7. _____
8. _____
9. _____
10. _____
11. _____
12. _____
13. _____



Write an inequality to express the number line.



Answers

Ex. $X \leq 30$

1. $X \leq 9$

2. $X < -140$

3. $X > -1$

4. $X > 3$

5. $X > 11$

6. $X \leq -11$

7. $X > -15$

8. $X > 5$

9. $X < -12$

10. $X \geq -195$

11. $X \geq 180$

12. $X \leq 150$

13. $X \geq -20$