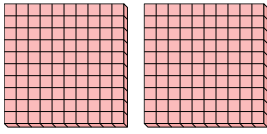




Use the groups to answer each question.

Answers


- 1) a. How many groups of 100 are there?
- b. How many small blocks are there total?



1. _____

2. _____


- 2) a. How many groups of 100 are there?
- b. How many small blocks are there total?



3. _____

4. _____

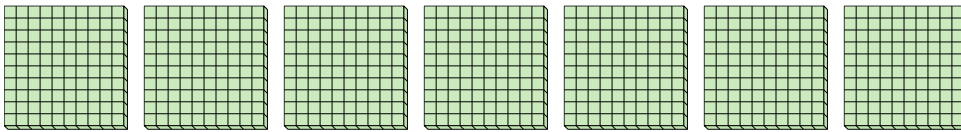
- 3) a. How many groups of 100 are there?
- b. How many small blocks are there total?



5. _____


6. _____

- 4) a. How many groups of 100 are there?
- b. How many small blocks are there total?

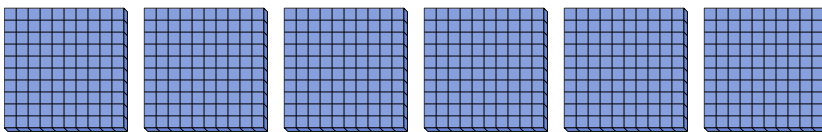


7. _____

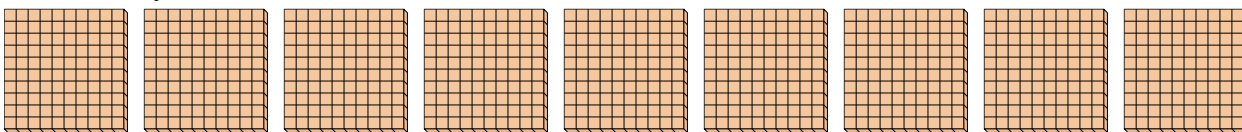
- 5) a. How many groups of 100 are there?
- b. How many small blocks are there total?



- 6) a. How many groups of 100 are there?
- b. How many small blocks are there total?



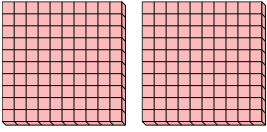
- 7) a. How many groups of 100 are there?
- b. How many small blocks are there total?



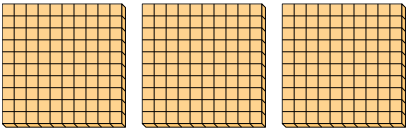


Use the groups to answer each question.


- 1) a. How many groups of 100 are there?
b. How many small blocks are there total?



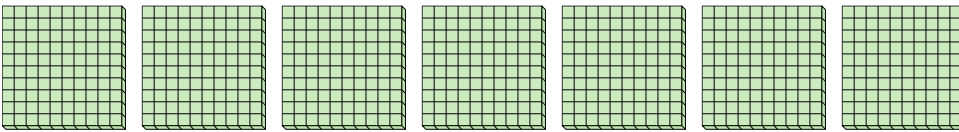
- 2) a. How many groups of 100 are there?
b. How many small blocks are there total?




- 3) a. How many groups of 100 are there?
b. How many small blocks are there total?



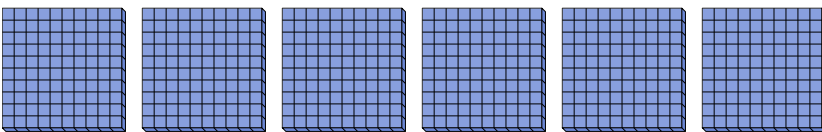
- 4) a. How many groups of 100 are there?
b. How many small blocks are there total?



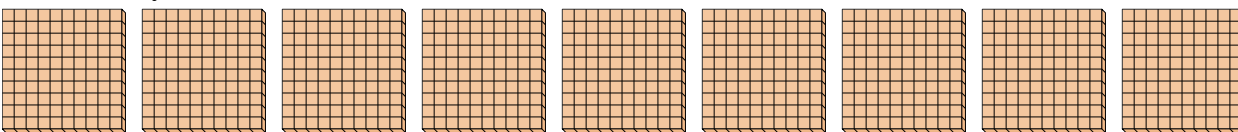
- 5) a. How many groups of 100 are there?
b. How many small blocks are there total?



- 6) a. How many groups of 100 are there?
b. How many small blocks are there total?



- 7) a. How many groups of 100 are there?
b. How many small blocks are there total?



Answers

1. 2 200
2. 3 300
3. 5 500
4. 7 700
5. 8 800
6. 6 600
7. 9 900