




Compare the number of shapes.




Are there less or less ?

- A.
- B.




Are there less or less ?

- A.
- B.



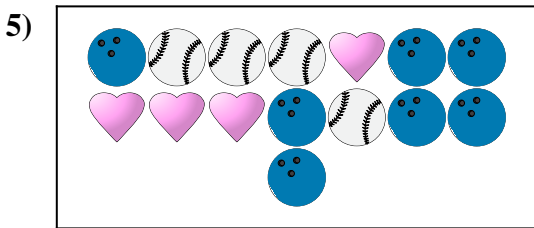
Are there more or more ?

- A.
- B.



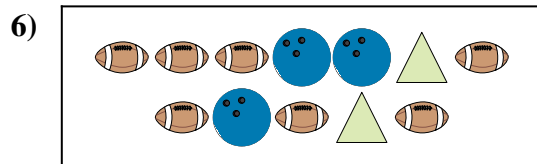
Are there less or less ?

- A.
- B.



Are there less or less ?

- A.
- B.



Are there more or more ?


- A.
- B.

Answers

- 1. \_\_\_\_\_
- 2. \_\_\_\_\_
- 3. \_\_\_\_\_
- 4. \_\_\_\_\_
- 5. \_\_\_\_\_
- 6. \_\_\_\_\_

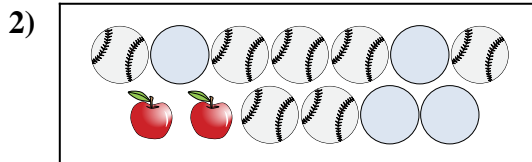


Compare the number of shapes.



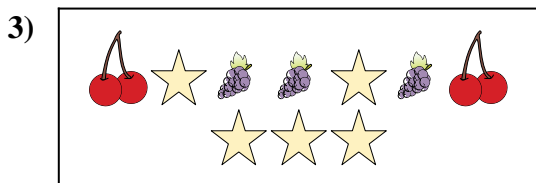
Are there less or less ?

- A.
- B.




Are there less or less ?

- A.
- B.



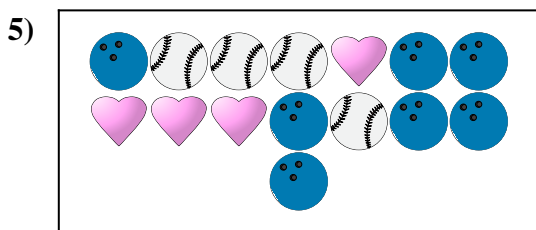
Are there more or more ?

- A.
- B.



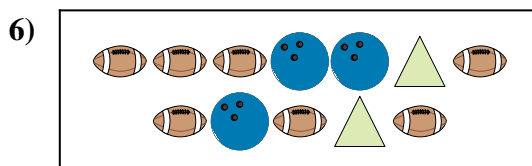
Are there less or less ?

- A.
- B.



Are there less or less ?

- A.
- B.



Are there more or more ?

- A.
- B.

**Answers**

1. **A**

2. **A**

3. **B**

4. **B**

5. **B**

6. **B**