





Compare the number of shapes.



Are there more or more ?

A.


B.



Are there more or more ?

A.


B.



Are there less or less ?

A.


B.



Are there more or more ?

A.

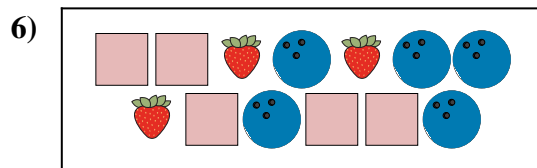
B.



Are there less or less ?

A.

B.



Are there more or more ?

A.

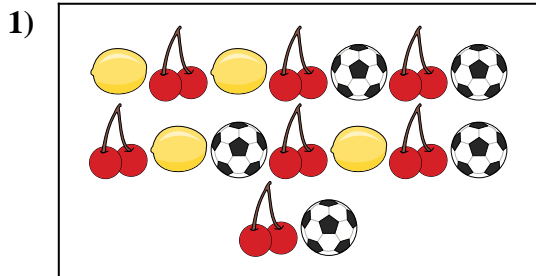
B.

Answers

1. _____
2. _____
3. _____
4. _____
5. _____
6. _____




Compare the number of shapes.



Are there more or more ?

A.

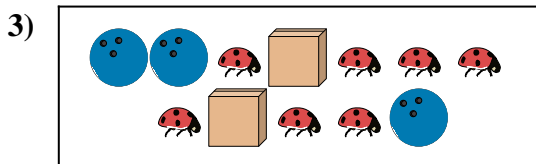
B.



Are there more or more ?

A.


B.



Are there less or less ?

A.


B.



Are there more or more ?

A.

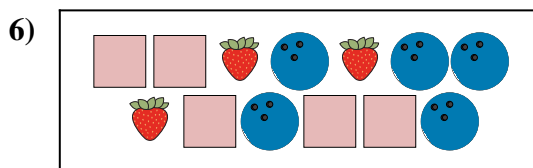
B.



Are there less or less ?

A.

B.



Are there more or more ?

A.

B.

Answers

1. **A**

2. **B**

3. **B**

4. **B**

5. **A**

6. **B**