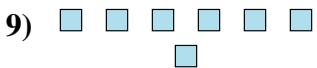
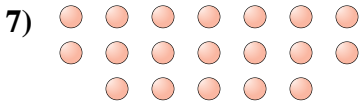
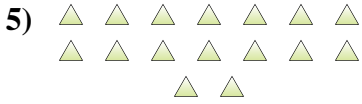
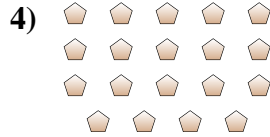
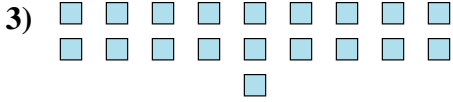
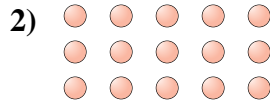




Determine if the number of shapes is even or odd.



Answers

1. _____

2. _____

3. _____

4. _____

5. _____

6. _____

7. _____

8. _____

9. _____

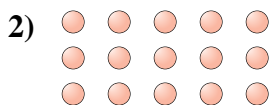
10. _____



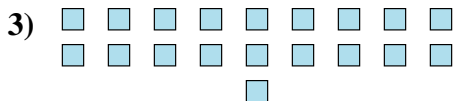
Determine if the number of shapes is even or odd.



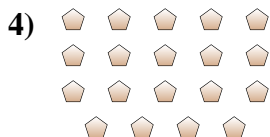
12



15



19



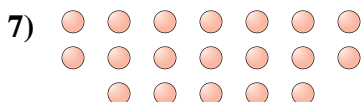
19



16



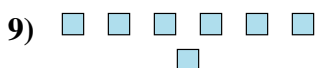
15



19



7



7



9

Answers

1. even

2. odd

3. odd

4. odd

5. even

6. odd

7. odd

8. odd

9. odd

10. odd