



Determine if the number of shapes is even or odd.

Answers



1. \_\_\_\_\_

2. \_\_\_\_\_

3. \_\_\_\_\_

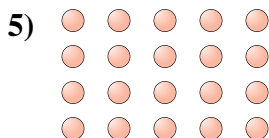


4. \_\_\_\_\_

5. \_\_\_\_\_

6. \_\_\_\_\_

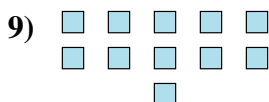
7. \_\_\_\_\_



8. \_\_\_\_\_

9. \_\_\_\_\_

10. \_\_\_\_\_





Determine if the number of shapes is even or odd.



7



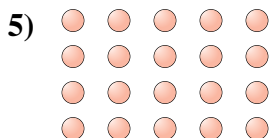
18



6



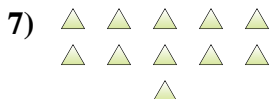
7



20



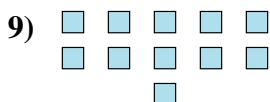
9



11



5



11



6

Answers

1. odd

2. even

3. even

4. odd

5. even

6. odd

7. odd

8. odd

9. odd

10. even