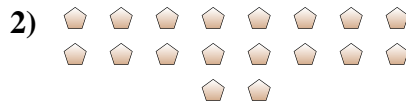




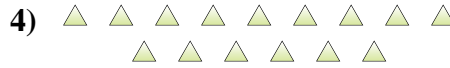
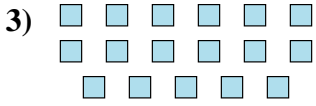
Determine if the number of shapes is even or odd.

Answers



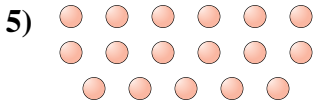
1. _____

2. _____



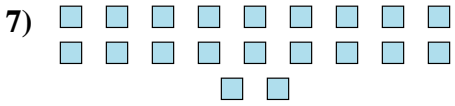
3. _____

4. _____



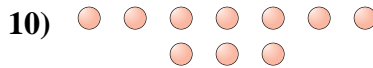
5. _____

6. _____



7. _____

8. _____



9. _____

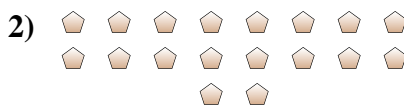
10. _____



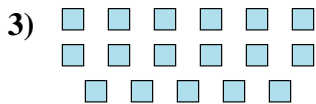
Determine if the number of shapes is even or odd.



19



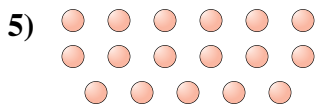
18



17



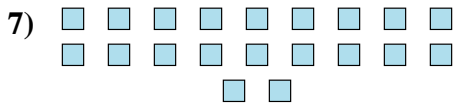
15



17



13



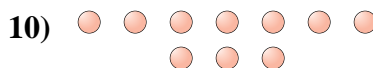
20



7



6



10

Answers

1. odd

2. even

3. odd

4. odd

5. odd

6. odd

7. even

8. odd

9. even

10. even