

Use  $<$ ,  $>$ , or  $=$  to compare the numbers.

1) 28 \_\_\_ 16

2) 37 \_\_\_ 62

3) 11 \_\_\_ 61

4) 55 \_\_\_ 37

5) 85 \_\_\_ 50

6) 91 \_\_\_ 84

7) 39 \_\_\_ 93

8) 17 \_\_\_ 71

9) 78 \_\_\_ 87

10) 37 \_\_\_ 73

11) 68 \_\_\_ 86

12) 16 \_\_\_ 61

13) 29 \_\_\_ 92

14) 48 \_\_\_ 84

15) 49 \_\_\_ 48

16) 43 \_\_\_ 45

17) 67 \_\_\_ 69

18) 20 \_\_\_ 17

19) 21 \_\_\_ 19

20) 13 \_\_\_ 11

**Answers**

1. \_\_\_\_\_

2. \_\_\_\_\_

3. \_\_\_\_\_

4. \_\_\_\_\_

5. \_\_\_\_\_

6. \_\_\_\_\_

7. \_\_\_\_\_

8. \_\_\_\_\_

9. \_\_\_\_\_

10. \_\_\_\_\_

11. \_\_\_\_\_

12. \_\_\_\_\_

13. \_\_\_\_\_

14. \_\_\_\_\_

15. \_\_\_\_\_

16. \_\_\_\_\_

17. \_\_\_\_\_

18. \_\_\_\_\_

19. \_\_\_\_\_

20. \_\_\_\_\_

Use  $<$ ,  $>$ , or  $=$  to compare the numbers.

1)  $28 > 16$

2)  $37 < 62$

3)  $11 < 61$

4)  $55 > 37$

5)  $85 > 50$

6)  $91 > 84$

7)  $39 < 93$

8)  $17 < 71$

9)  $78 < 87$

10)  $37 < 73$

11)  $68 < 86$

12)  $16 < 61$

13)  $29 < 92$

14)  $48 < 84$

15)  $49 > 48$

16)  $43 < 45$

17)  $67 < 69$

18)  $20 > 17$

19)  $21 > 19$

20)  $13 > 11$

Answers

1.  $>$

2.  $<$

3.  $<$

4.  $>$

5.  $>$

6.  $>$

7.  $<$

8.  $<$

9.  $<$

10.  $<$

11.  $<$

12.  $<$

13.  $<$

14.  $<$

15.  $>$

16.  $<$

17.  $<$

18.  $>$

19.  $>$



20.  $>$



Use < , > , or = to compare the numbers.



1)                    28     16

$\underline{\hspace{1cm}}$

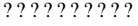

2)                    37     62

$\underline{\hspace{1cm}}$



3)                    11     61

$\underline{\hspace{1cm}}$



4)                    55     37

$\underline{\hspace{1cm}}$



5)                    85     50

$\underline{\hspace{1cm}}$



6)                    91     84

$\underline{\hspace{1cm}}$

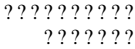

7)                    39     93

$\underline{\hspace{1cm}}$



8)                    17     71

$\underline{\hspace{1cm}}$



9)                    78     87

$\underline{\hspace{1cm}}$

10)                    37     73

$\underline{\hspace{1cm}}$

Answers

1. \_\_\_\_\_
2. \_\_\_\_\_
3. \_\_\_\_\_
4. \_\_\_\_\_
5. \_\_\_\_\_
6. \_\_\_\_\_
7. \_\_\_\_\_
8. \_\_\_\_\_
9. \_\_\_\_\_
10. \_\_\_\_\_