



Use < , > , or = to compare the numbers.

Answers

- 1) 78 ___ 33
- 2) 97 ___ 30
- 3) 51 ___ 42
- 4) 25 ___ 36
- 5) 82 ___ 11
- 6) 42 ___ 20
- 7) 65 ___ 56
- 8) 39 ___ 93
- 9) 45 ___ 54
- 10) 12 ___ 21
- 11) 56 ___ 65
- 12) 98 ___ 89
- 13) 71 ___ 17
- 14) 42 ___ 24
- 15) 74 ___ 75
- 16) 49 ___ 48
- 17) 77 ___ 75
- 18) 17 ___ 18
- 19) 18 ___ 19
- 20) 12 ___ 13

- 1. _____
- 2. _____
- 3. _____
- 4. _____
- 5. _____
- 6. _____
- 7. _____
- 8. _____
- 9. _____
- 10. _____
- 11. _____
- 12. _____
- 13. _____
- 14. _____
- 15. _____
- 16. _____
- 17. _____
- 18. _____
- 19. _____
- 20. _____

Use $<$, $>$, or $=$ to compare the numbers.

1) $78 > 33$

2) $97 > 30$

3) $51 > 42$

4) $25 < 36$

5) $82 > 11$

6) $42 > 20$

7) $65 > 56$

8) $39 < 93$

9) $45 < 54$

10) $12 < 21$

11) $56 < 65$

12) $98 > 89$

13) $71 > 17$

14) $42 > 24$

15) $74 < 75$

16) $49 > 48$

17) $77 > 75$

18) $17 < 18$

19) $18 < 19$

20) $12 < 13$


Answers1. $>$ 2. $>$ 3. $>$ 4. $<$ 5. $>$ 6. $>$ 7. $>$ 8. $<$ 9. $<$ 10. $<$ 11. $<$ 12. $>$ 13. $>$ 14. $>$ 15. $<$ 16. $>$ 17. $>$ 18. $<$ 19. $<$ 20. $<$



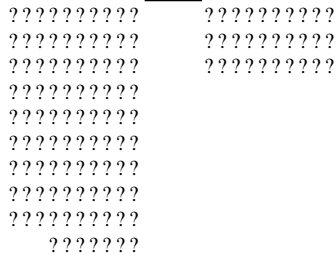
Use < , > , or = to compare the numbers.

Answers


1) 78 33



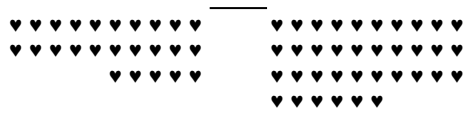
2) 97 30




3) 51 42



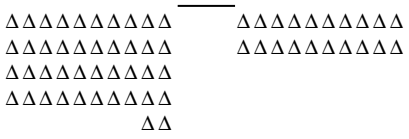
4) 25 36



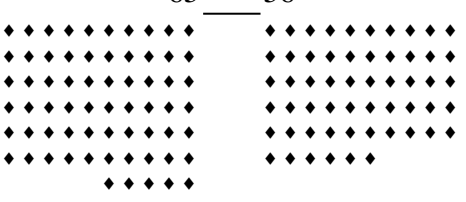
5) 82 11



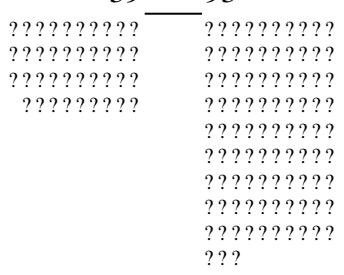
6) 42 20




7) 65 56




8) 39 93



9) 45 54



10) 12 21



1. _____
2. _____
3. _____
4. _____
5. _____
6. _____
7. _____
8. _____
9. _____
10. _____