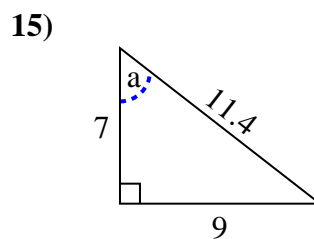
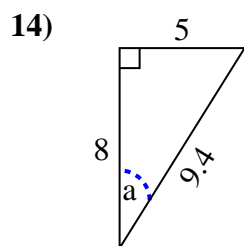
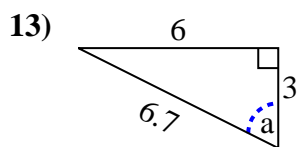
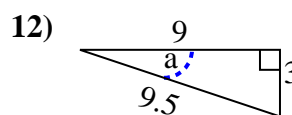
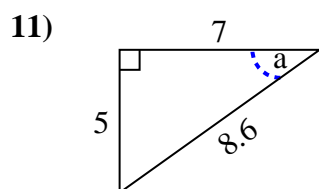
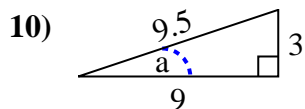
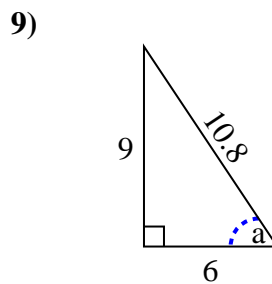
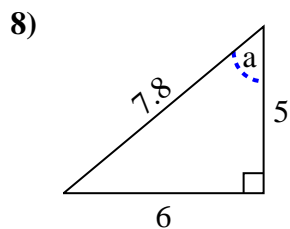
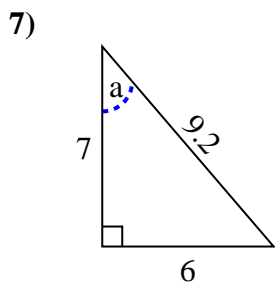
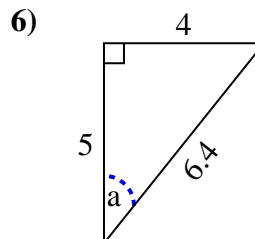
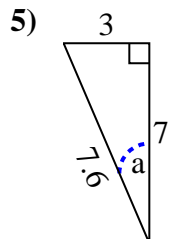
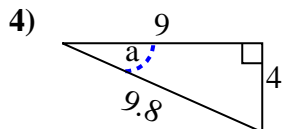
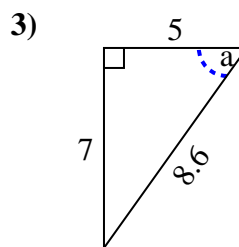
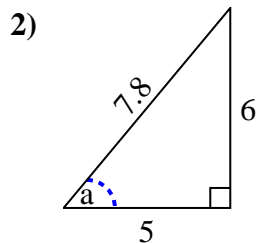
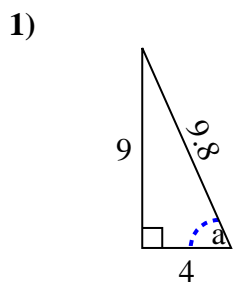


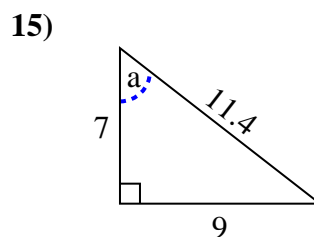
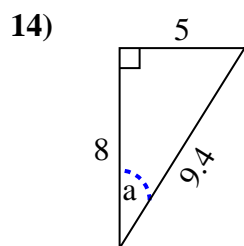
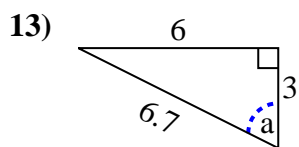
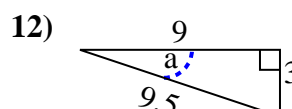
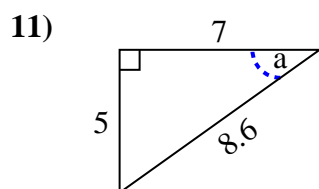
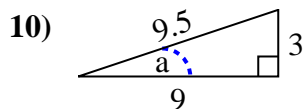
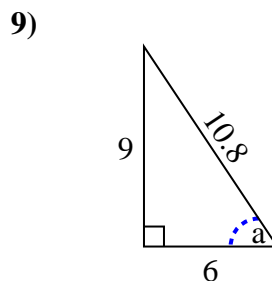
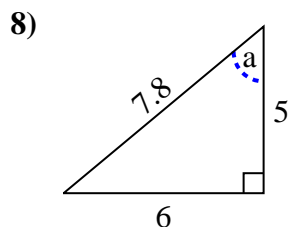
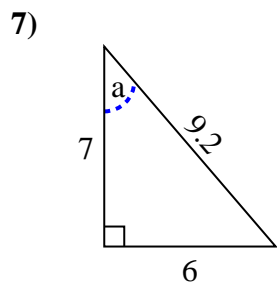
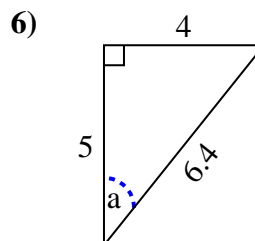
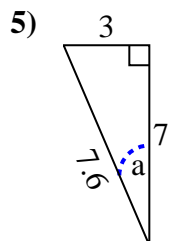
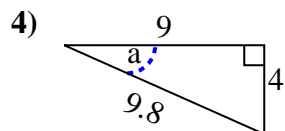
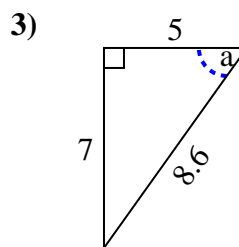
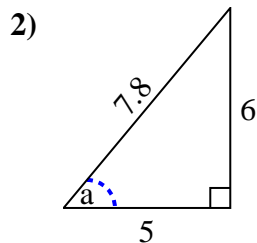
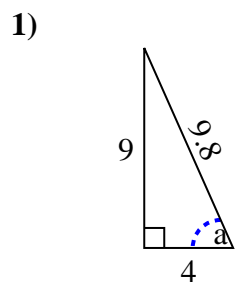


Identify the Opposite, Adjacent and Hypotenuse of Angle a.

Answers



1. \_\_\_\_\_
2. \_\_\_\_\_
3. \_\_\_\_\_
4. \_\_\_\_\_
5. \_\_\_\_\_
6. \_\_\_\_\_
7. \_\_\_\_\_
8. \_\_\_\_\_
9. \_\_\_\_\_
10. \_\_\_\_\_
11. \_\_\_\_\_
12. \_\_\_\_\_
13. \_\_\_\_\_
14. \_\_\_\_\_
15. \_\_\_\_\_

Identify the Opposite, Adjacent and Hypotenuse of Angle  $a$ .**Answers**1. 9, 4, 9.62. 6, 5, 7.83. 7, 5, 8.64. 4, 9, 9.85. 3, 7, 7.66. 4, 5, 6.47. 6, 7, 9.28. 6, 5, 7.89. 9, 6, 10.810. 3, 9, 9.511. 5, 7, 8.612. 3, 9, 9.513. 6, 3, 6.714. 5, 8, 9.415. 9, 7, 11.4