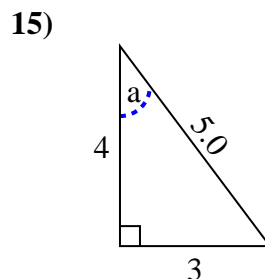
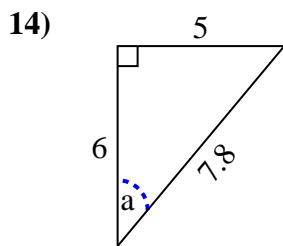
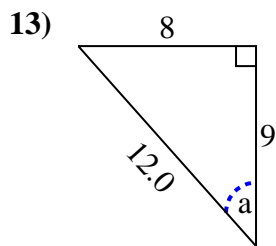
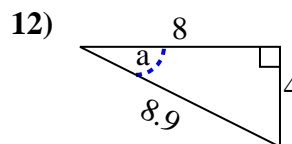
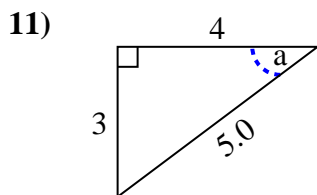
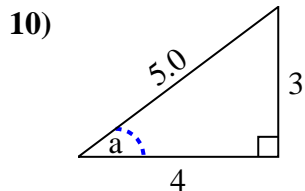
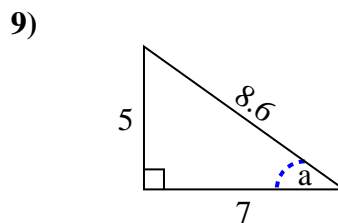
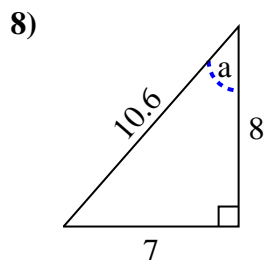
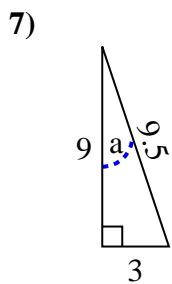
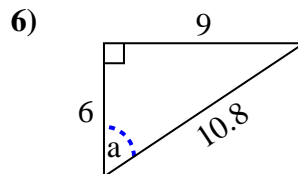
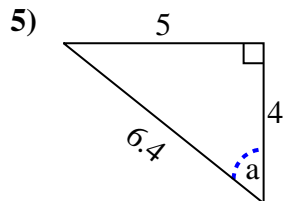
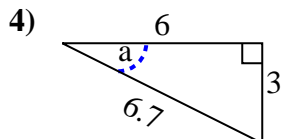
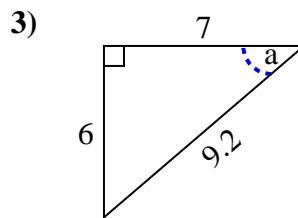
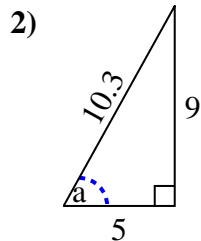
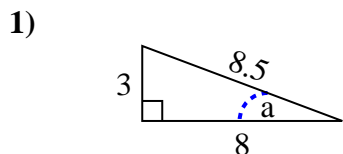


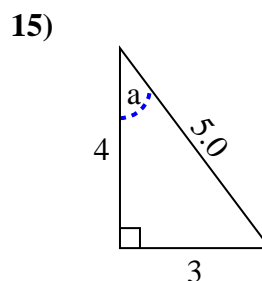
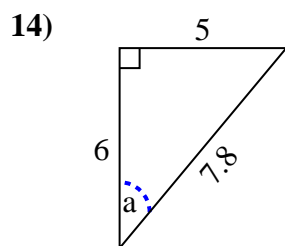
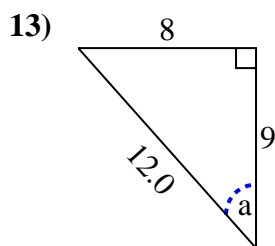
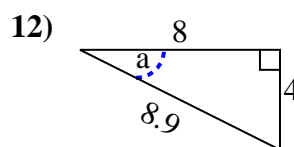
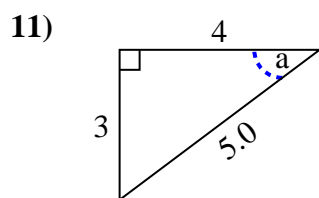
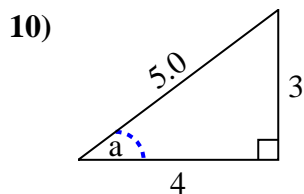
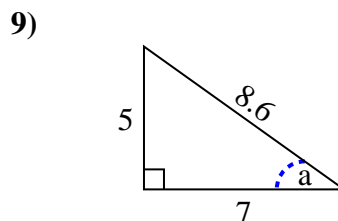
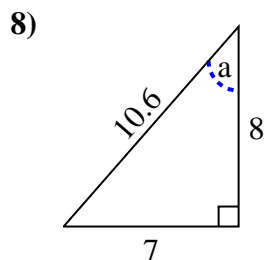
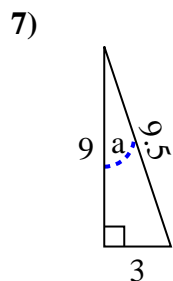
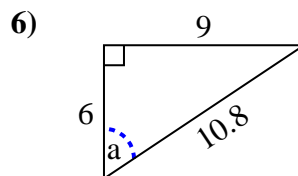
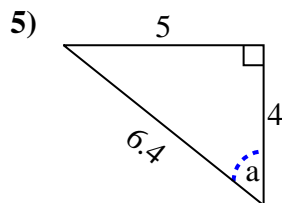
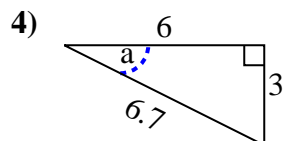
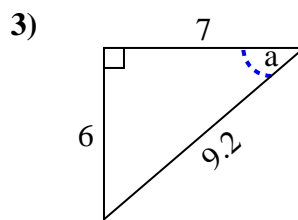
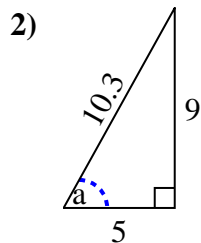
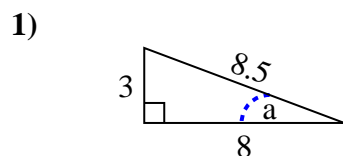


Identify the Opposite, Adjacent and Hypotenuse of Angle a.

Answers



1. _____
2. _____
3. _____
4. _____
5. _____
6. _____
7. _____
8. _____
9. _____
10. _____
11. _____
12. _____
13. _____
14. _____
15. _____

Identify the Opposite, Adjacent and Hypotenuse of Angle a .**Answers**

1. 3, 8, 8.5
2. 9, 5, 10.3
3. 6, 7, 9.2
4. 3, 6, 6.7
5. 5, 4, 6.4
6. 9, 6, 10.8
7. 3, 9, 9.5
8. 7, 8, 10.6
9. 5, 7, 8.6
10. 3, 4, 5.0
11. 3, 4, 5.0
12. 4, 8, 8.9
13. 8, 9, 12.0
14. 5, 6, 7.8
15. 3, 4, 5.0