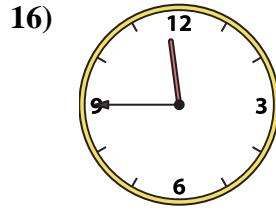
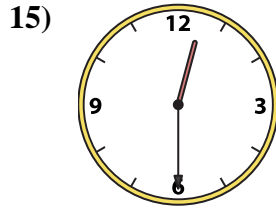
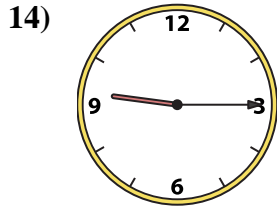
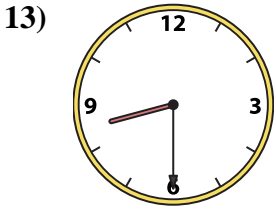
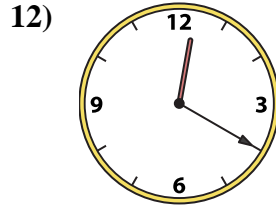
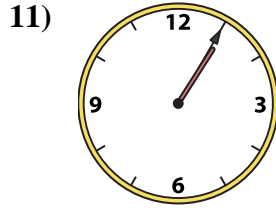
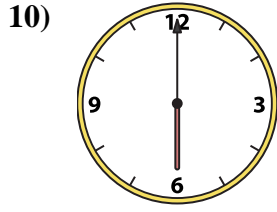

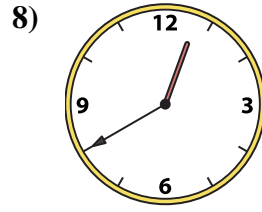
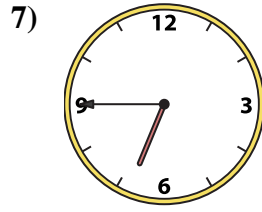
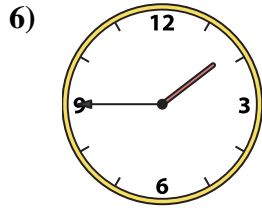
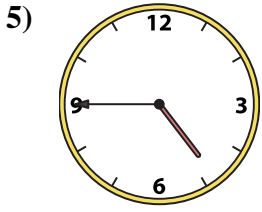
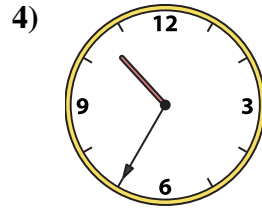
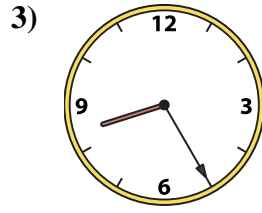
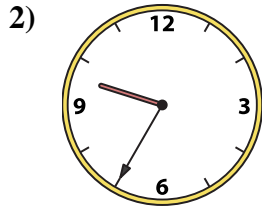
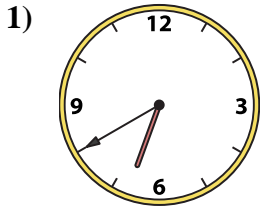




Match the analog clock to the digital clock.

**Answers**



A.

B.

C.

D.

E.

F.

G.

H.

I.

J.

K.

L.

M.

N.

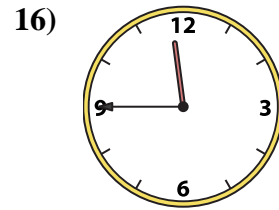
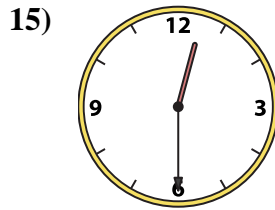
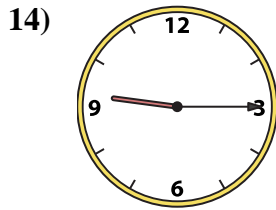
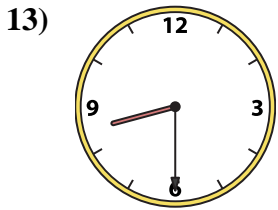

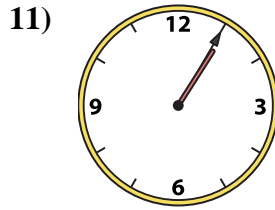
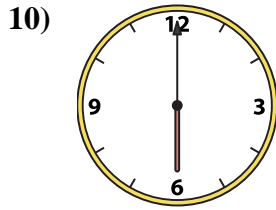
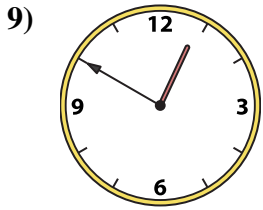
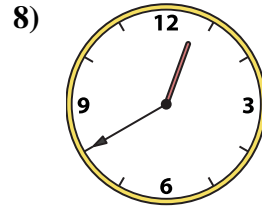
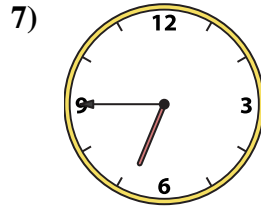
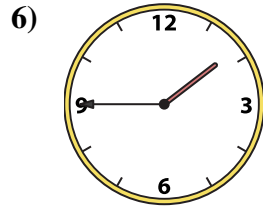
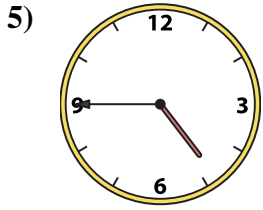
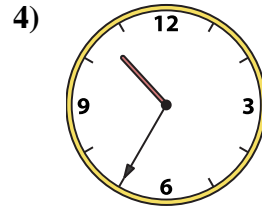
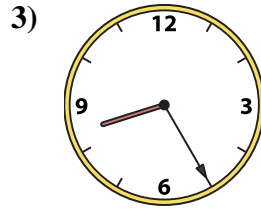
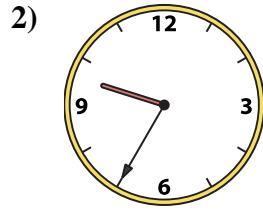
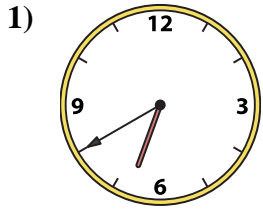
O.

P.

1. \_\_\_\_\_
2. \_\_\_\_\_
3. \_\_\_\_\_
4. \_\_\_\_\_
5. \_\_\_\_\_
6. \_\_\_\_\_
7. \_\_\_\_\_
8. \_\_\_\_\_
9. \_\_\_\_\_
10. \_\_\_\_\_
11. \_\_\_\_\_
12. \_\_\_\_\_
13. \_\_\_\_\_
14. \_\_\_\_\_
15. \_\_\_\_\_
16. \_\_\_\_\_



Match the analog clock to the digital clock.



A. **12:30**

B. **6:00**

C. **8:25**

D. **9:15**

E. **12:50**

F. **6:40**

G. **10:35**

H. **4:45**

I. **8:30**

J. **6:45**

K. **12:20**

L. **9:35**

M. **11:45**

N. **1:45**

O. **1:05**

P. **12:40**

**Answers**

1. **F**

2. **L**

3. **C**

4. **G**

5. **H**

6. **N**

7. **J**

8. **P**

9. **E**

10. **B**

11. **O**

12. **K**

13. **I**

14. **D**

15. **A**

16. **M**