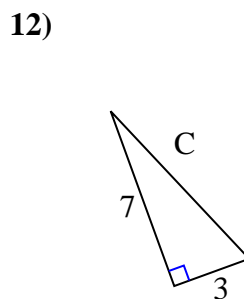
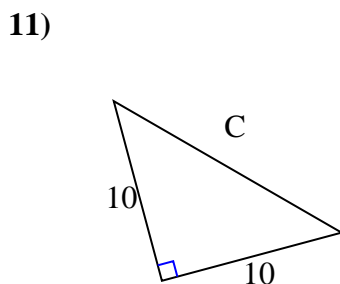
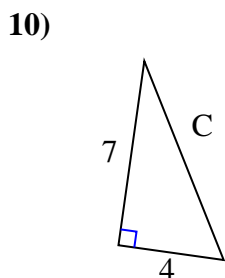
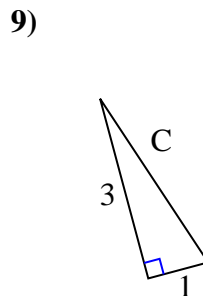
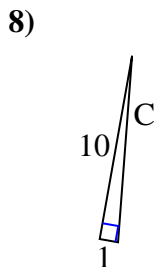
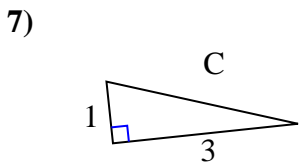
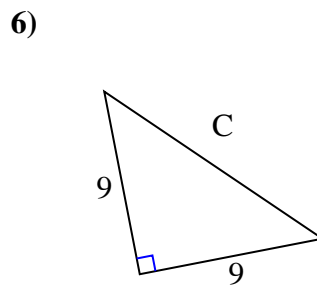
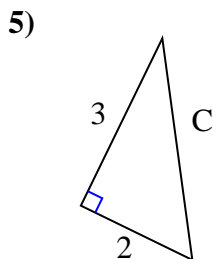
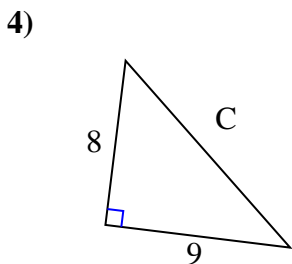
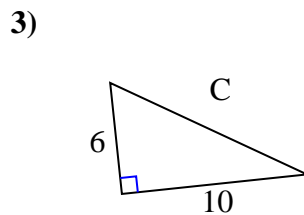
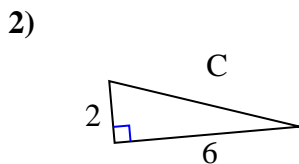
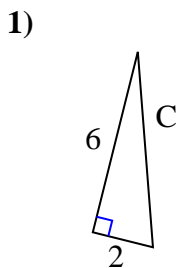




Find the value of 'C' round your answer to the nearest hundredth.

Answers

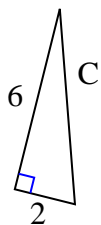


1. _____
2. _____
3. _____
4. _____
5. _____
6. _____
7. _____
8. _____
9. _____
10. _____
11. _____
12. _____



Find the value of 'C' round your answer to the nearest hundredth.

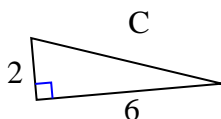
1)



$$36 + 4 = 40$$

$$\sqrt{40} = 6.32$$

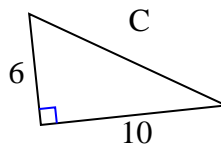
2)



$$4 + 36 = 40$$

$$\sqrt{40} = 6.32$$

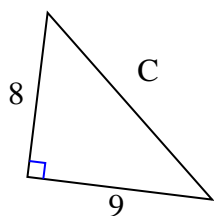
3)



$$36 + 100 = 136$$

$$\sqrt{136} = 11.66$$

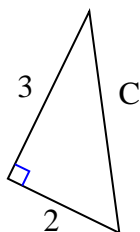
4)



$$64 + 81 = 145$$

$$\sqrt{145} = 12.04$$

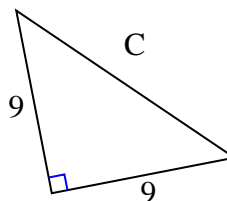
5)



$$9 + 4 = 13$$

$$\sqrt{13} = 3.61$$

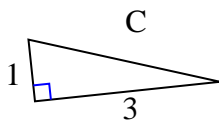
6)



$$81 + 81 = 162$$

$$\sqrt{162} = 12.73$$

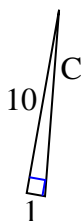
7)



$$1 + 9 = 10$$

$$\sqrt{10} = 3.16$$

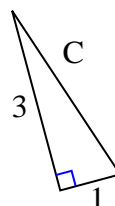
8)



$$100 + 1 = 101$$

$$\sqrt{101} = 10.05$$

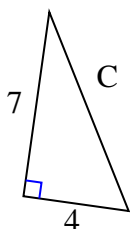
9)



$$9 + 1 = 10$$

$$\sqrt{10} = 3.16$$

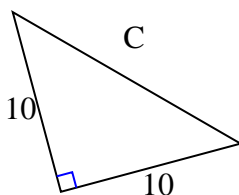
10)



$$49 + 16 = 65$$

$$\sqrt{65} = 8.06$$

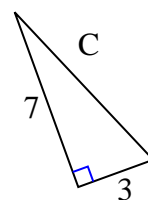
11)



$$100 + 100 = 200$$

$$\sqrt{200} = 14.14$$

12)



$$49 + 9 = 58$$

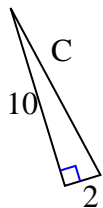
$$\sqrt{58} = 7.62$$

Answers1. 6.322. 6.323. 11.664. 12.045. 3.616. 12.737. 3.168. 10.059. 3.1610. 8.0611. 14.1412. 7.62

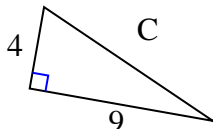


Find the value of 'C' round your answer to the nearest hundredth.

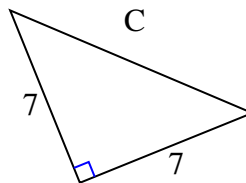
1)



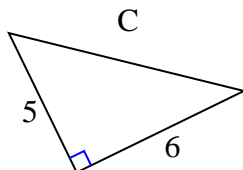
2)



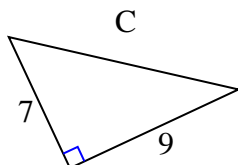
3)



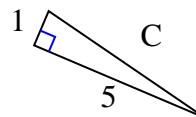
4)



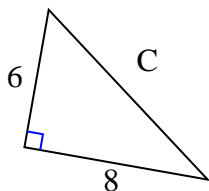
5)



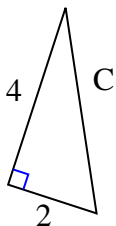
6)



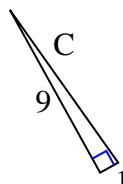
7)



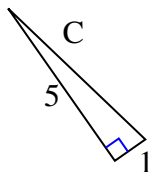
8)



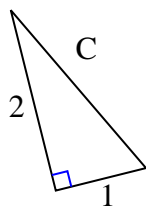
9)



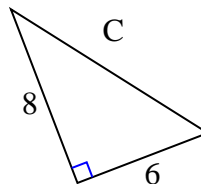
10)



11)



12)



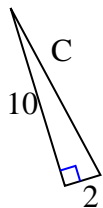
Answers

1. _____
2. _____
3. _____
4. _____
5. _____
6. _____
7. _____
8. _____
9. _____
10. _____
11. _____
12. _____



Find the value of 'C' round your answer to the nearest hundredth.

1)

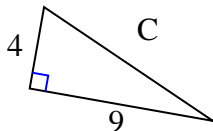


$$10^2 + 2^2 = C^2$$

$$100 + 4 = 104$$

$$\sqrt{104} = 10.2$$

2)

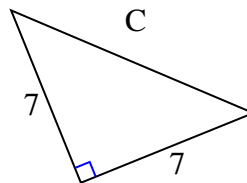


$$4^2 + 9^2 = C^2$$

$$16 + 81 = 97$$

$$\sqrt{97} = 9.85$$

3)

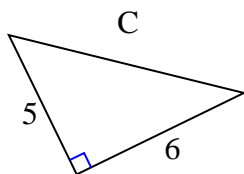


$$7^2 + 7^2 = C^2$$

$$49 + 49 = 98$$

$$\sqrt{98} = 9.9$$

4)

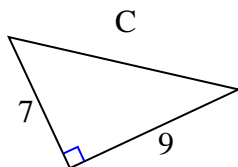


$$5^2 + 6^2 = C^2$$

$$25 + 36 = 61$$

$$\sqrt{61} = 7.81$$

5)

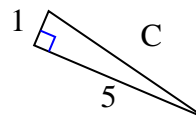


$$7^2 + 9^2 = C^2$$

$$49 + 81 = 130$$

$$\sqrt{130} = 11.4$$

6)

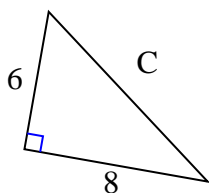


$$1^2 + 5^2 = C^2$$

$$1 + 25 = 26$$

$$\sqrt{26} = 5.1$$

7)

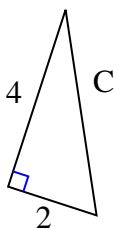


$$6^2 + 8^2 = C^2$$

$$36 + 64 = 100$$

$$\sqrt{100} = 10$$

8)

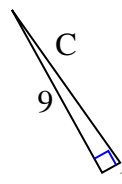


$$4^2 + 2^2 = C^2$$

$$16 + 4 = 20$$

$$\sqrt{20} = 4.47$$

9)

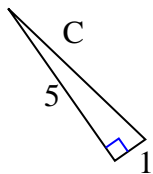


$$9^2 + 1^2 = C^2$$

$$81 + 1 = 82$$

$$\sqrt{82} = 9.06$$

10)

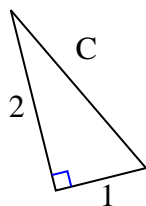


$$5^2 + 1^2 = C^2$$

$$25 + 1 = 26$$

$$\sqrt{26} = 5.1$$

11)

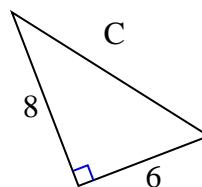


$$2^2 + 1^2 = C^2$$

$$4 + 1 = 5$$

$$\sqrt{5} = 2.24$$

12)



$$8^2 + 6^2 = C^2$$

$$64 + 36 = 100$$

$$\sqrt{100} = 10$$

Answers

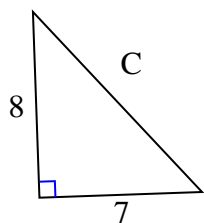
1. 10.2
2. 9.85
3. 9.9
4. 7.81
5. 11.4
6. 5.1
7. 10
8. 4.47
9. 9.06
10. 5.1
11. 2.24
12. 10



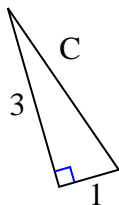
Find the value of 'C' round your answer to the nearest hundredth.

Answers

1)



2)



3)



1. _____

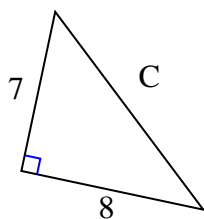
2. _____

3. _____

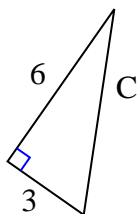
4. _____

5. _____

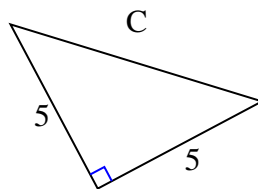
4)



5)



6)



6. _____

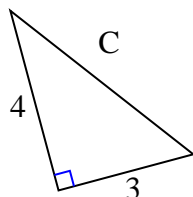
7. _____

8. _____

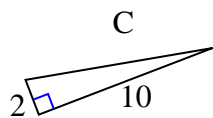
9. _____

10. _____

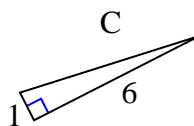
7)



8)



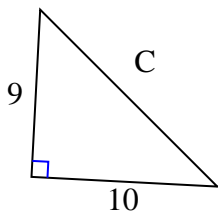
9)



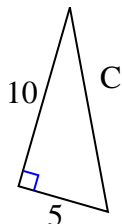
11. _____

12. _____

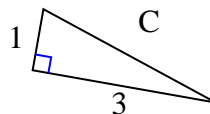
10)



11)



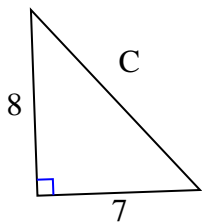
12)





Find the value of 'C' round your answer to the nearest hundredth.

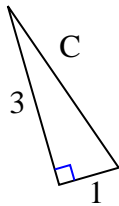
1)



$$64 + 49 = 113$$

$$\sqrt{113} = 10.63$$

2)



$$9 + 1 = 10$$

$$\sqrt{10} = 3.16$$

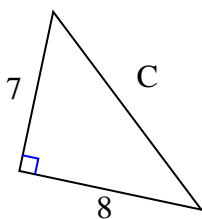
3)



$$49 + 4 = 53$$

$$\sqrt{53} = 7.28$$

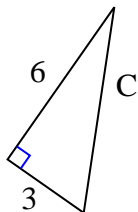
4)



$$49 + 64 = 113$$

$$\sqrt{113} = 10.63$$

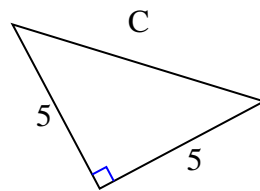
5)



$$36 + 9 = 45$$

$$\sqrt{45} = 6.71$$

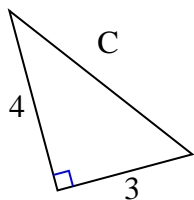
6)



$$25 + 25 = 50$$

$$\sqrt{50} = 7.07$$

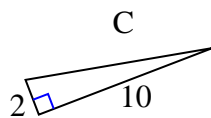
7)



$$16 + 9 = 25$$

$$\sqrt{25} = 5$$

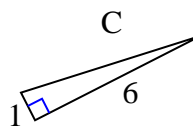
8)



$$4 + 100 = 104$$

$$\sqrt{104} = 10.2$$

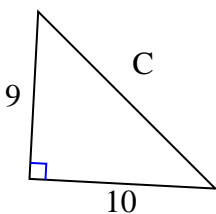
9)



$$1 + 36 = 37$$

$$\sqrt{37} = 6.08$$

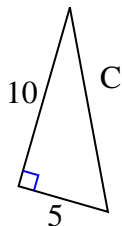
10)



$$81 + 100 = 181$$

$$\sqrt{181} = 13.45$$

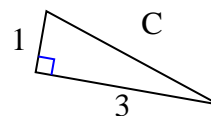
11)



$$100 + 25 = 125$$

$$\sqrt{125} = 11.18$$

12)



$$1 + 9 = 10$$

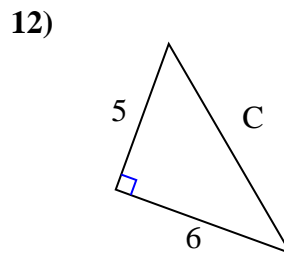
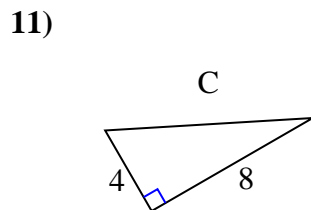
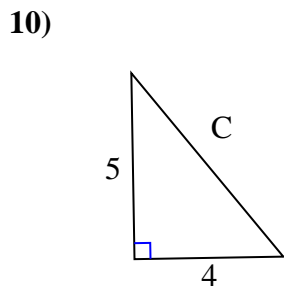
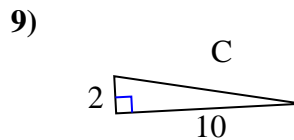
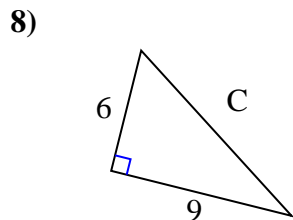
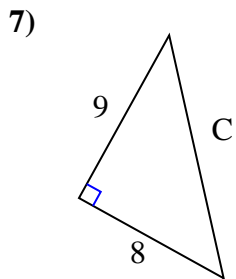
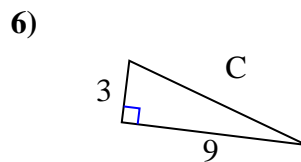
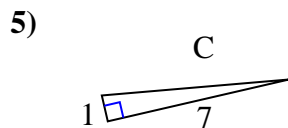
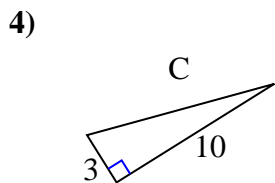
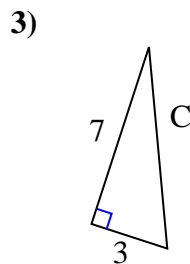
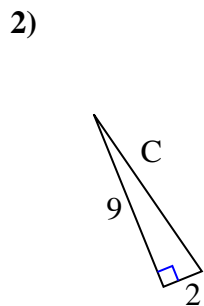
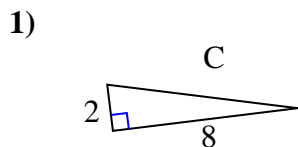
$$\sqrt{10} = 3.16$$

Answers

1. 10.63
2. 3.16
3. 7.28
4. 10.63
5. 6.71
6. 7.07
7. 5
8. 10.2
9. 6.08
10. 13.45
11. 11.18
12. 3.16



Find the value of 'C' round your answer to the nearest hundredth.

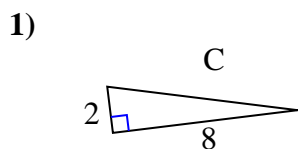


Answers

1. _____
2. _____
3. _____
4. _____
5. _____
6. _____
7. _____
8. _____
9. _____
10. _____
11. _____
12. _____

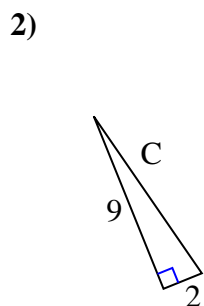


Find the value of 'C' round your answer to the nearest hundredth.



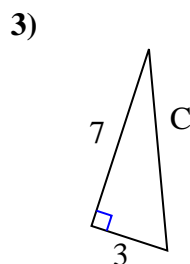
$$4 + 64 = 68$$

$$\sqrt{68} = 8.25$$



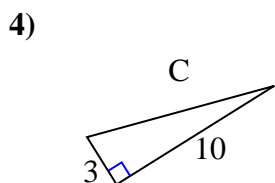
$$81 + 4 = 85$$

$$\sqrt{85} = 9.22$$



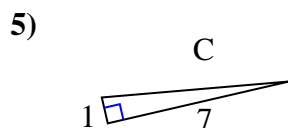
$$49 + 9 = 58$$

$$\sqrt{58} = 7.62$$



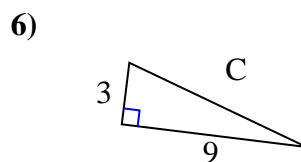
$$9 + 100 = 109$$

$$\sqrt{109} = 10.44$$



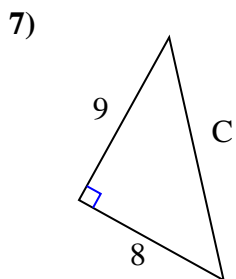
$$1 + 49 = 50$$

$$\sqrt{50} = 7.07$$



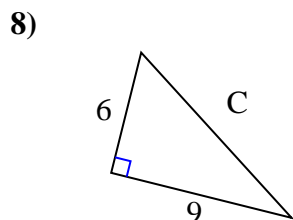
$$9 + 81 = 90$$

$$\sqrt{90} = 9.49$$



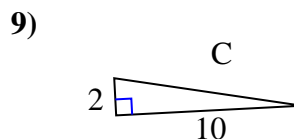
$$81 + 64 = 145$$

$$\sqrt{145} = 12.04$$



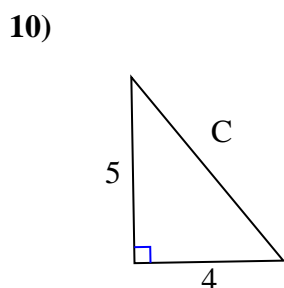
$$36 + 81 = 117$$

$$\sqrt{117} = 10.82$$



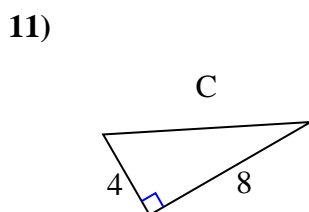
$$4 + 100 = 104$$

$$\sqrt{104} = 10.2$$



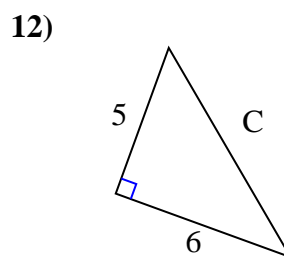
$$25 + 16 = 41$$

$$\sqrt{41} = 6.4$$



$$16 + 64 = 80$$

$$\sqrt{80} = 8.94$$



$$25 + 36 = 61$$

$$\sqrt{61} = 7.81$$

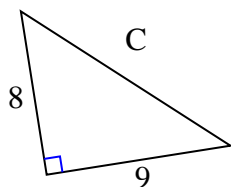
Answers1. 8.252. 9.223. 7.624. 10.445. 7.076. 9.497. 12.048. 10.829. 10.210. 6.411. 8.9412. 7.81



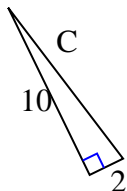
Find the value of 'C' round your answer to the nearest hundredth.

Answers

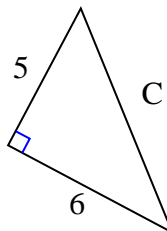
1)



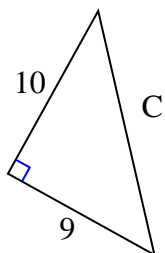
2)



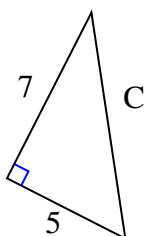
3)



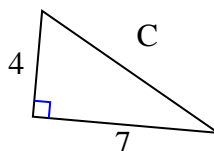
4)



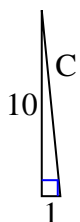
5)



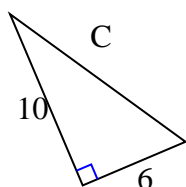
6)



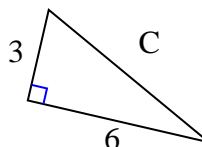
7)



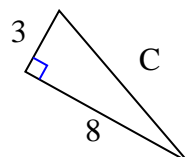
8)



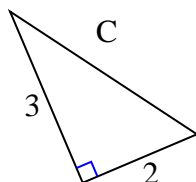
9)



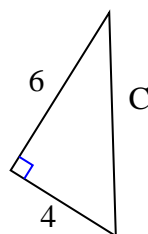
10)



11)



12)

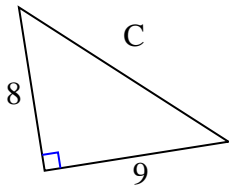


1. _____
2. _____
3. _____
4. _____
5. _____
6. _____
7. _____
8. _____
9. _____
10. _____
11. _____
12. _____



Find the value of 'C' round your answer to the nearest hundredth.

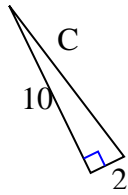
1)



$$64 + 81 = 145$$

$$\sqrt{145} = 12.04$$

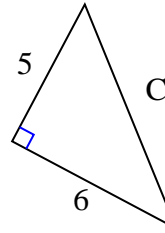
2)



$$100 + 4 = 104$$

$$\sqrt{104} = 10.2$$

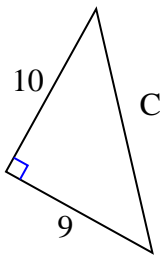
3)



$$25 + 36 = 61$$

$$\sqrt{61} = 7.81$$

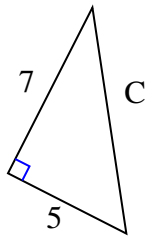
4)



$$100 + 81 = 181$$

$$\sqrt{181} = 13.45$$

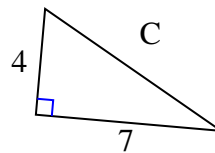
5)



$$49 + 25 = 74$$

$$\sqrt{74} = 8.6$$

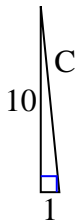
6)



$$16 + 49 = 65$$

$$\sqrt{65} = 8.06$$

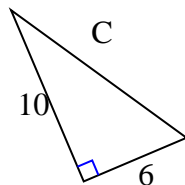
7)



$$100 + 1 = 101$$

$$\sqrt{101} = 10.05$$

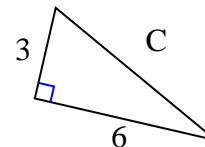
8)



$$100 + 36 = 136$$

$$\sqrt{136} = 11.66$$

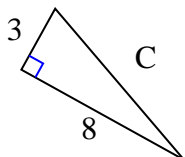
9)



$$9 + 36 = 45$$

$$\sqrt{45} = 6.71$$

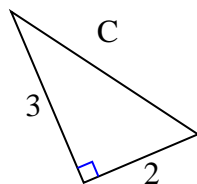
10)



$$9 + 64 = 73$$

$$\sqrt{73} = 8.54$$

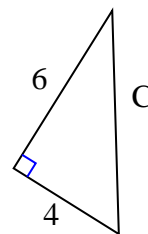
11)



$$9 + 4 = 13$$

$$\sqrt{13} = 3.61$$

12)



$$36 + 16 = 52$$

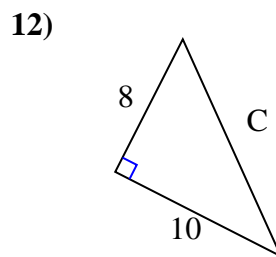
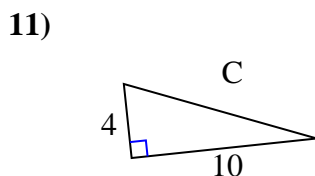
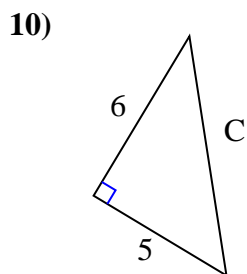
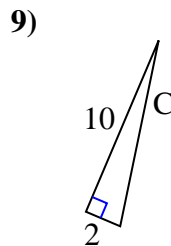
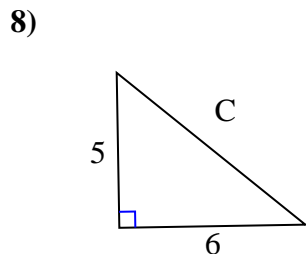
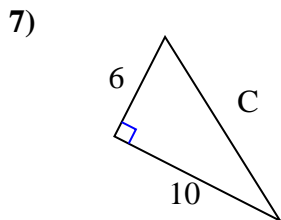
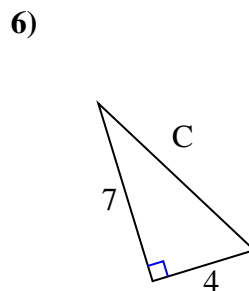
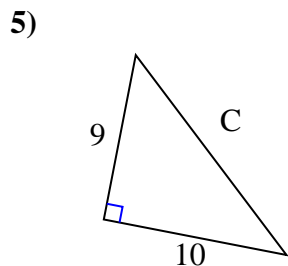
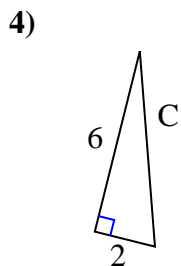
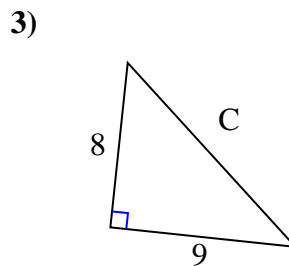
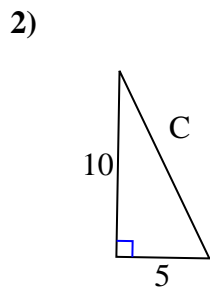
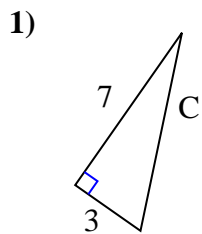
$$\sqrt{52} = 7.21$$

Answers1. 12.042. 10.23. 7.814. 13.455. 8.66. 8.067. 10.058. 11.669. 6.7110. 8.5411. 3.6112. 7.21



Find the value of 'C' round your answer to the nearest hundredth.

Answers

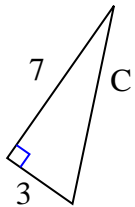


- 1. _____
- 2. _____
- 3. _____
- 4. _____
- 5. _____
- 6. _____
- 7. _____
- 8. _____
- 9. _____
- 10. _____
- 11. _____
- 12. _____



Find the value of 'C' round your answer to the nearest hundredth.

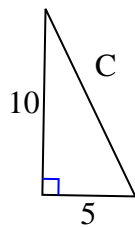
1)



$$49 + 9 = 58$$

$$\sqrt{58} = 7.62$$

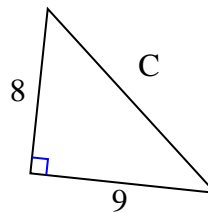
2)



$$100 + 25 = 125$$

$$\sqrt{125} = 11.18$$

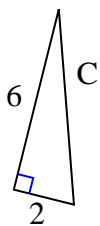
3)



$$64 + 81 = 145$$

$$\sqrt{145} = 12.04$$

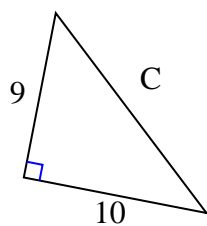
4)



$$36 + 4 = 40$$

$$\sqrt{40} = 6.32$$

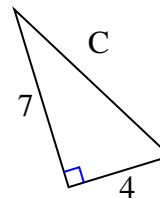
5)



$$81 + 100 = 181$$

$$\sqrt{181} = 13.45$$

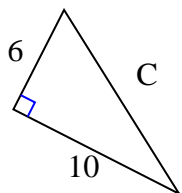
6)



$$49 + 16 = 65$$

$$\sqrt{65} = 8.06$$

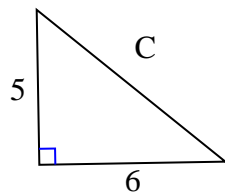
7)



$$36 + 100 = 136$$

$$\sqrt{136} = 11.66$$

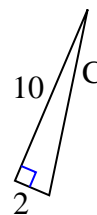
8)



$$25 + 36 = 61$$

$$\sqrt{61} = 7.81$$

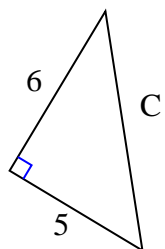
9)



$$100 + 4 = 104$$

$$\sqrt{104} = 10.2$$

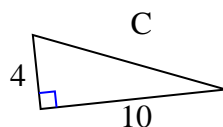
10)



$$36 + 25 = 61$$

$$\sqrt{61} = 7.81$$

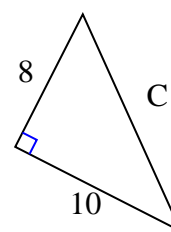
11)



$$16 + 100 = 116$$

$$\sqrt{116} = 10.77$$

12)



$$64 + 100 = 164$$

$$\sqrt{164} = 12.81$$

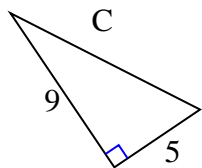
Answers1. 7.622. 11.183. 12.044. 6.325. 13.456. 8.067. 11.668. 7.819. 10.210. 7.8111. 10.7712. 12.81



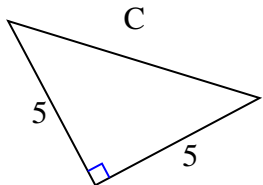
Find the value of 'C' round your answer to the nearest hundredth.

Answers

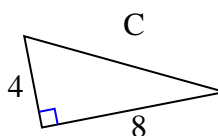
1)



2)



3)



1. _____

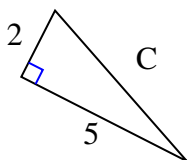
2. _____

3. _____

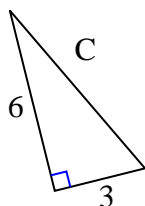
4. _____

5. _____

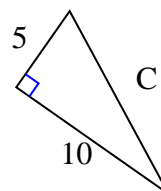
4)



5)



6)



6. _____

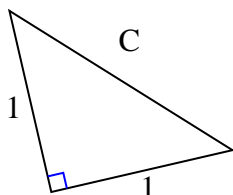
7. _____

8. _____

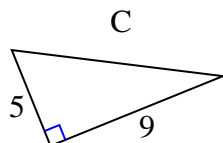
9. _____

10. _____

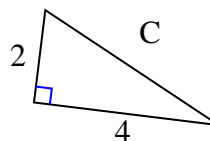
7)



8)



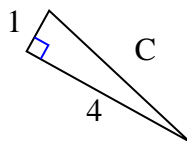
9)



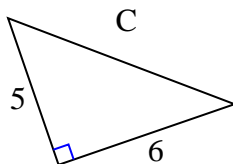
11. _____

12. _____

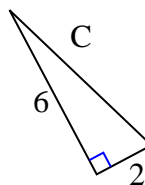
10)



11)



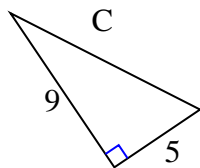
12)





Find the value of 'C' round your answer to the nearest hundredth.

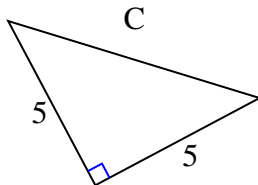
1)



$$81 + 25 = 106$$

$$\sqrt{106} = 10.3$$

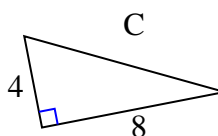
2)



$$25 + 25 = 50$$

$$\sqrt{50} = 7.07$$

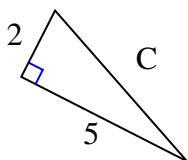
3)



$$16 + 64 = 80$$

$$\sqrt{80} = 8.94$$

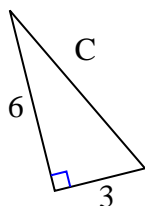
4)



$$4 + 25 = 29$$

$$\sqrt{29} = 5.39$$

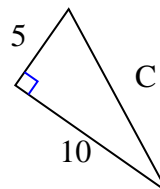
5)



$$36 + 9 = 45$$

$$\sqrt{45} = 6.71$$

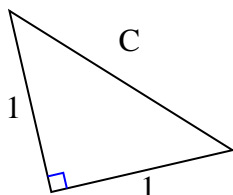
6)



$$25 + 100 = 125$$

$$\sqrt{125} = 11.18$$

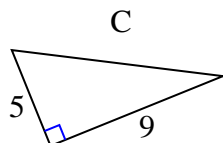
7)



$$1 + 1 = 2$$

$$\sqrt{2} = 1.41$$

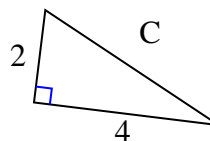
8)



$$25 + 81 = 106$$

$$\sqrt{106} = 10.3$$

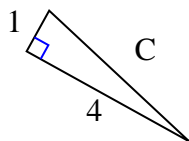
9)



$$4 + 16 = 20$$

$$\sqrt{20} = 4.47$$

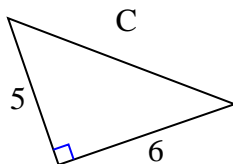
10)



$$1 + 16 = 17$$

$$\sqrt{17} = 4.12$$

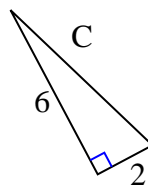
11)



$$25 + 36 = 61$$

$$\sqrt{61} = 7.81$$

12)



$$36 + 4 = 40$$

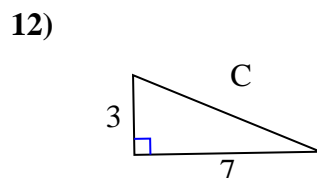
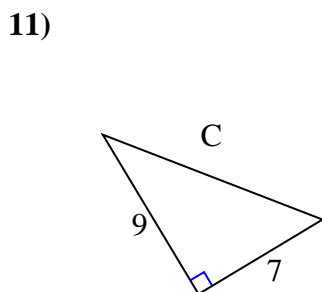
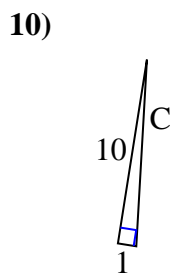
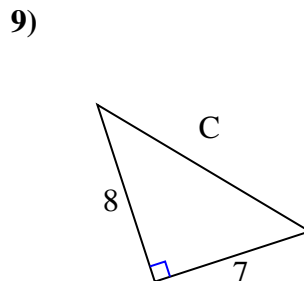
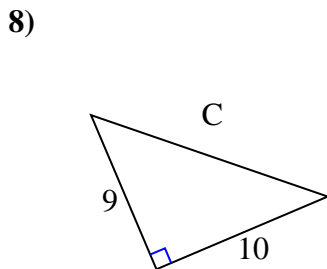
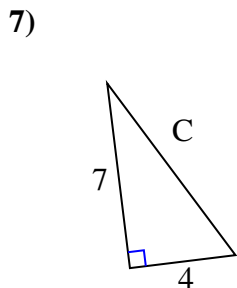
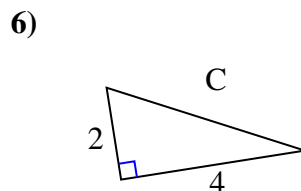
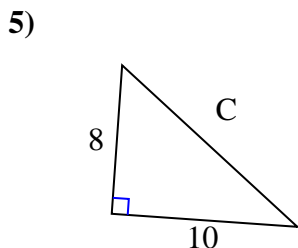
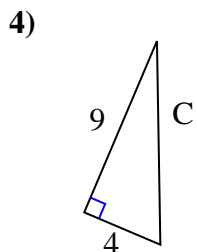
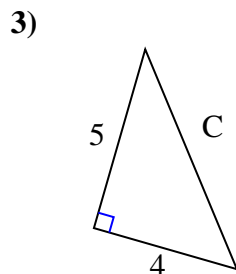
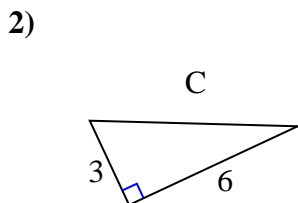
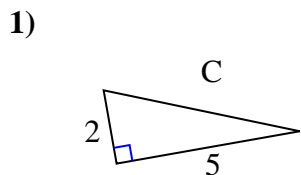
$$\sqrt{40} = 6.32$$

Answers1. 10.32. 7.073. 8.944. 5.395. 6.716. 11.187. 1.418. 10.39. 4.4710. 4.1211. 7.8112. 6.32



Find the value of 'C' round your answer to the nearest hundredth.

Answers

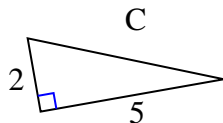


1. _____
2. _____
3. _____
4. _____
5. _____
6. _____
7. _____
8. _____
9. _____
10. _____
11. _____
12. _____



Find the value of 'C' round your answer to the nearest hundredth.

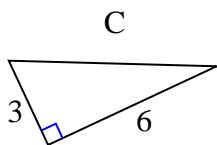
1)



$$4^2 + 5^2 = 29$$

$$\sqrt{29} = 5.39$$

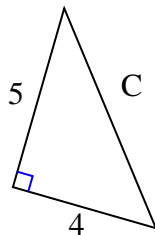
2)



$$3^2 + 6^2 = 45$$

$$\sqrt{45} = 6.71$$

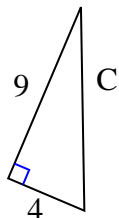
3)



$$5^2 + 4^2 = 41$$

$$\sqrt{41} = 6.4$$

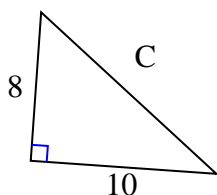
4)



$$9^2 + 4^2 = 97$$

$$\sqrt{97} = 9.85$$

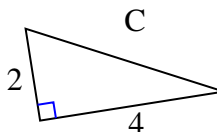
5)



$$8^2 + 10^2 = 164$$

$$\sqrt{164} = 12.81$$

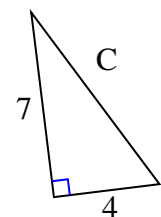
6)



$$2^2 + 4^2 = 20$$

$$\sqrt{20} = 4.47$$

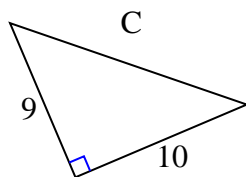
7)



$$7^2 + 4^2 = 65$$

$$\sqrt{65} = 8.06$$

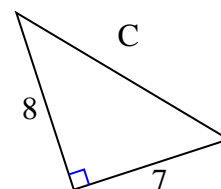
8)



$$9^2 + 10^2 = 181$$

$$\sqrt{181} = 13.45$$

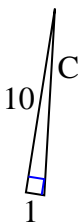
9)



$$8^2 + 7^2 = 113$$

$$\sqrt{113} = 10.63$$

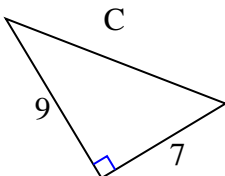
10)



$$10^2 + 1^2 = 101$$

$$\sqrt{101} = 10.05$$

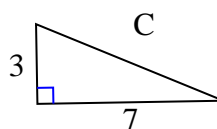
11)



$$9^2 + 7^2 = 130$$

$$\sqrt{130} = 11.4$$

12)



$$3^2 + 7^2 = 58$$

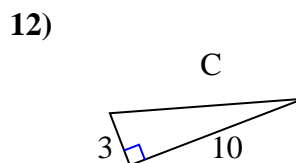
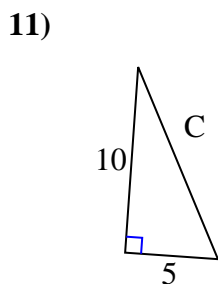
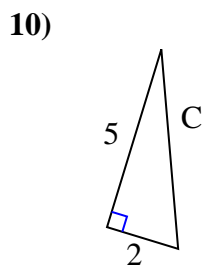
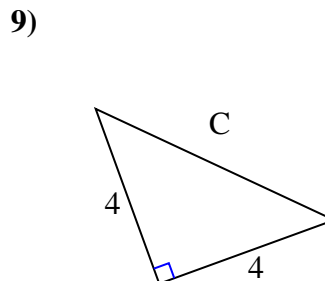
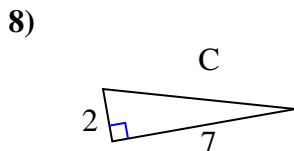
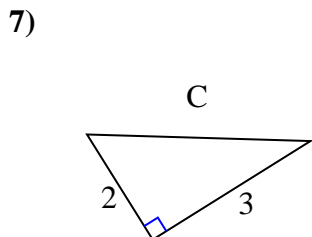
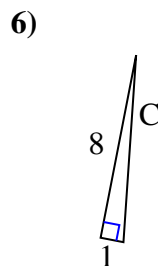
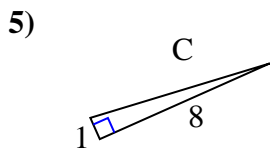
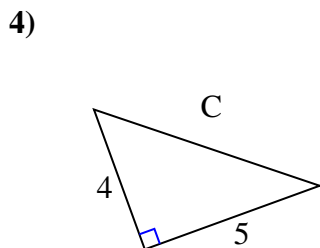
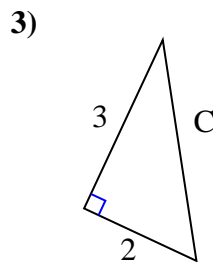
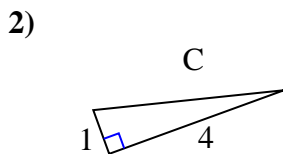
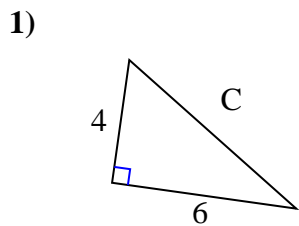
$$\sqrt{58} = 7.62$$

Answers1. 5.392. 6.713. 6.44. 9.855. 12.816. 4.477. 8.068. 13.459. 10.6310. 10.0511. 11.412. 7.62



Find the value of 'C' round your answer to the nearest hundredth.

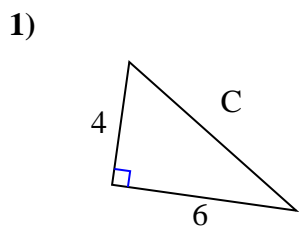
Answers



1. _____
2. _____
3. _____
4. _____
5. _____
6. _____
7. _____
8. _____
9. _____
10. _____
11. _____
12. _____

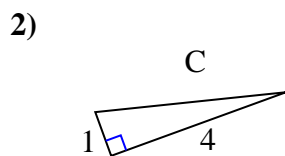


Find the value of 'C' round your answer to the nearest hundredth.

Answers

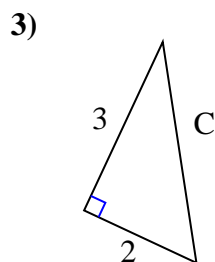
$$16 + 36 = 52$$

$$\sqrt{52} = 7.21$$



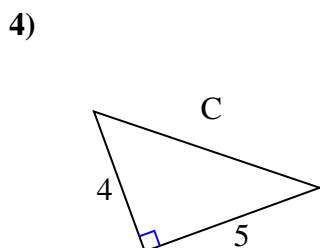
$$1 + 16 = 17$$

$$\sqrt{17} = 4.12$$



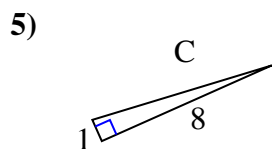
$$9 + 4 = 13$$

$$\sqrt{13} = 3.61$$



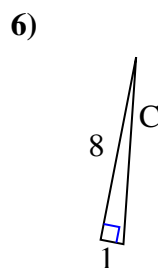
$$16 + 25 = 41$$

$$\sqrt{41} = 6.4$$



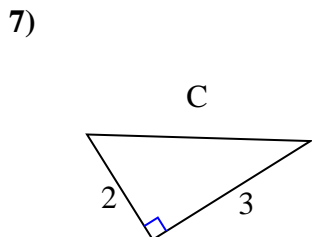
$$1 + 64 = 65$$

$$\sqrt{65} = 8.06$$



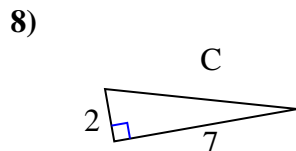
$$64 + 1 = 65$$

$$\sqrt{65} = 8.06$$



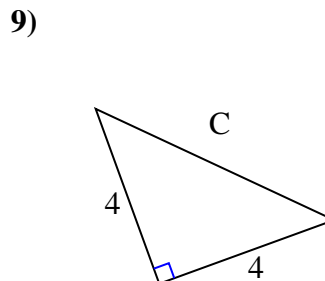
$$4 + 9 = 13$$

$$\sqrt{13} = 3.61$$



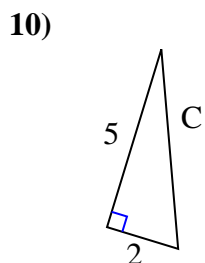
$$4 + 49 = 53$$

$$\sqrt{53} = 7.28$$



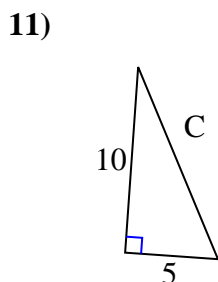
$$16 + 16 = 32$$

$$\sqrt{32} = 5.66$$



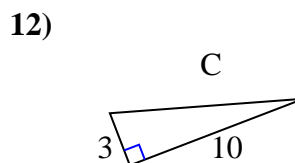
$$25 + 4 = 29$$

$$\sqrt{29} = 5.39$$



$$100 + 25 = 125$$

$$\sqrt{125} = 11.18$$



$$9 + 100 = 109$$

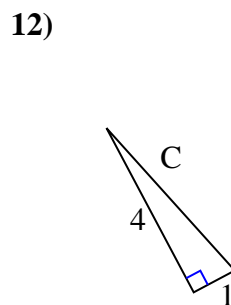
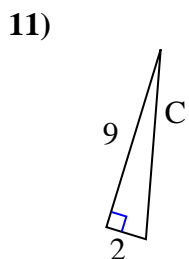
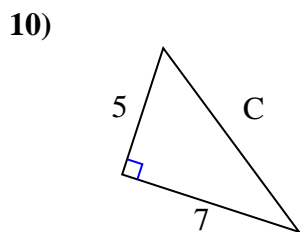
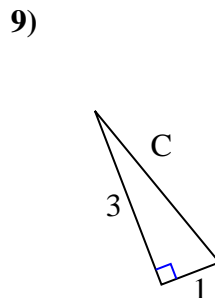
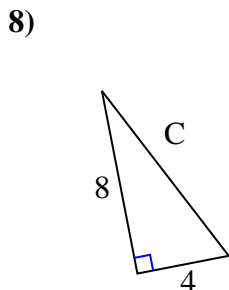
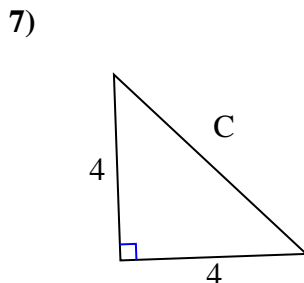
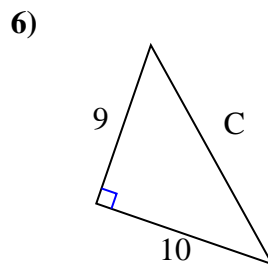
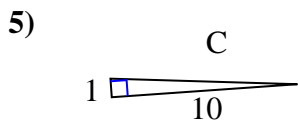
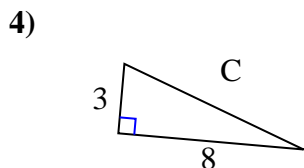
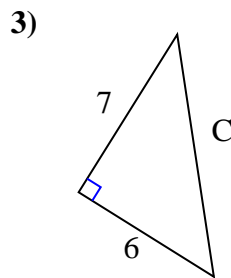
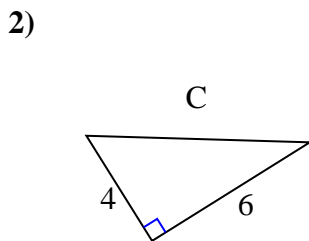
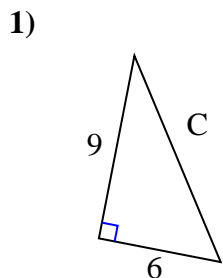
$$\sqrt{109} = 10.44$$

1. 7.21
2. 4.12
3. 3.61
4. 6.4
5. 8.06
6. 8.06
7. 3.61
8. 7.28
9. 5.66
10. 5.39
11. 11.18
12. 10.44



Find the value of 'C' round your answer to the nearest hundredth.

Answers



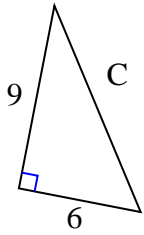
1. _____
2. _____
3. _____
4. _____
5. _____
6. _____
7. _____
8. _____
9. _____
10. _____
11. _____
12. _____



Find the value of 'C' round your answer to the nearest hundredth.

Answers

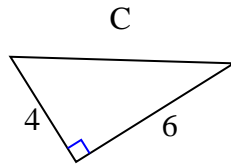
1)



$$81 + 36 = 117$$

$$\sqrt{117} = 10.82$$

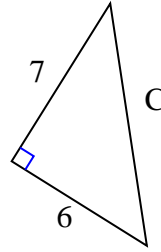
2)



$$16 + 36 = 52$$

$$\sqrt{52} = 7.21$$

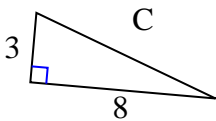
3)



$$49 + 36 = 85$$

$$\sqrt{85} = 9.22$$

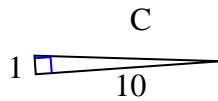
4)



$$9 + 64 = 73$$

$$\sqrt{73} = 8.54$$

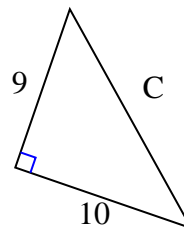
5)



$$1 + 100 = 101$$

$$\sqrt{101} = 10.05$$

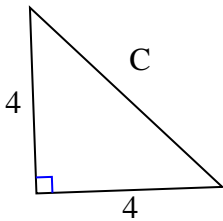
6)



$$81 + 100 = 181$$

$$\sqrt{181} = 13.45$$

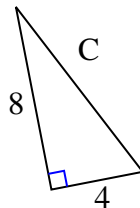
7)



$$16 + 16 = 32$$

$$\sqrt{32} = 5.66$$

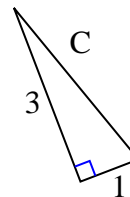
8)



$$64 + 16 = 80$$

$$\sqrt{80} = 8.94$$

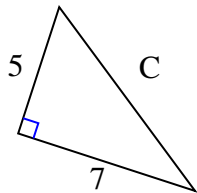
9)



$$9 + 1 = 10$$

$$\sqrt{10} = 3.16$$

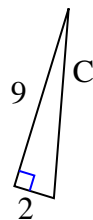
10)



$$25 + 49 = 74$$

$$\sqrt{74} = 8.6$$

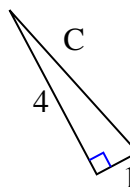
11)



$$81 + 4 = 85$$

$$\sqrt{85} = 9.22$$

12)



$$16 + 1 = 17$$

$$\sqrt{17} = 4.12$$

1. 10.82
2. 7.21
3. 9.22
4. 8.54
5. 10.05
6. 13.45
7. 5.66
8. 8.94
9. 3.16
10. 8.6
11. 9.22
12. 4.12