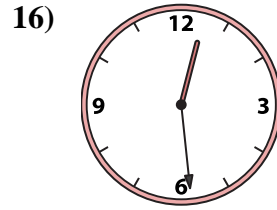
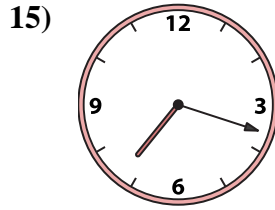
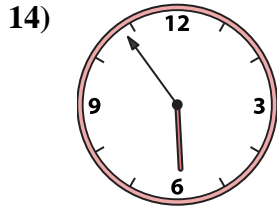
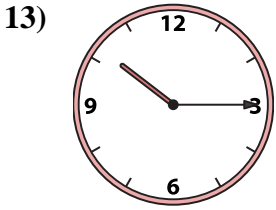
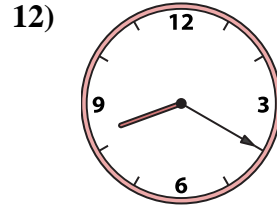
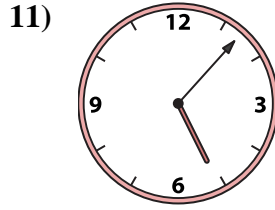
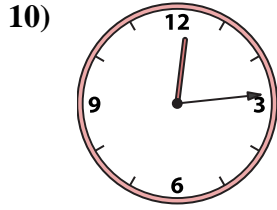
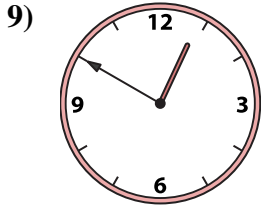
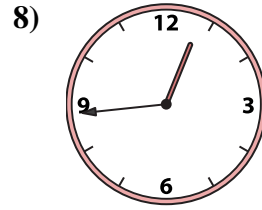
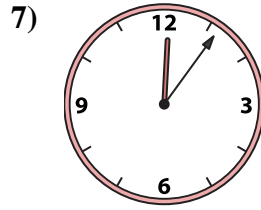
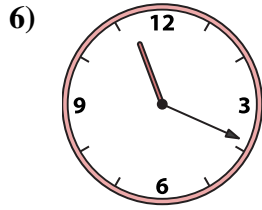
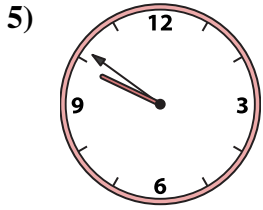
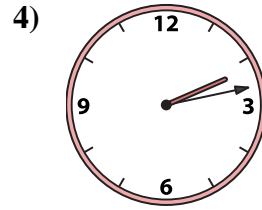
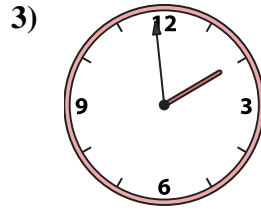
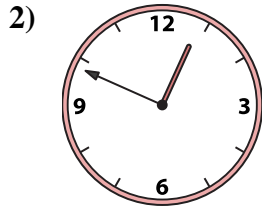
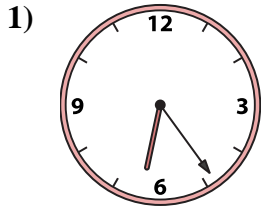




Match the analog clock to the digital clock.



A. 6:24

B. 12:06

C. 5:07

D. 5:54

E. 9:51

F. 11:19

G. 12:29

H. 8:20

I. 12:50

J. 10:15

K. 1:59

L. 12:49

M. 12:44

N. 7:18

O. 2:13

P. 12:14

**Answers**

1. \_\_\_\_\_

2. \_\_\_\_\_

3. \_\_\_\_\_

4. \_\_\_\_\_

5. \_\_\_\_\_

6. \_\_\_\_\_

7. \_\_\_\_\_

8. \_\_\_\_\_

9. \_\_\_\_\_

10. \_\_\_\_\_

11. \_\_\_\_\_

12. \_\_\_\_\_

13. \_\_\_\_\_

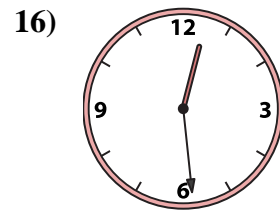
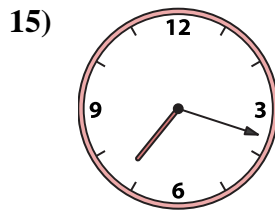
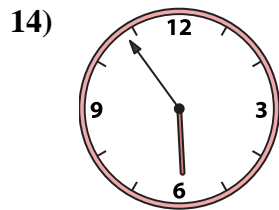
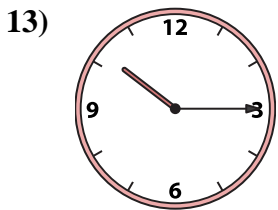
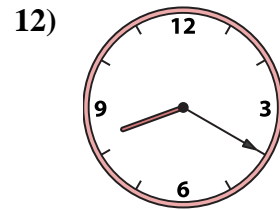
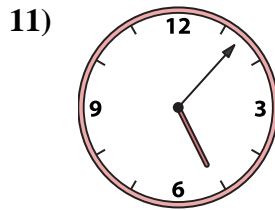
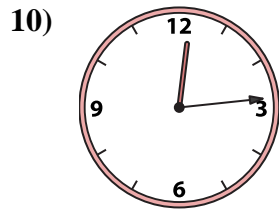
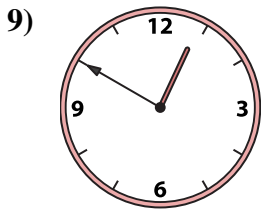
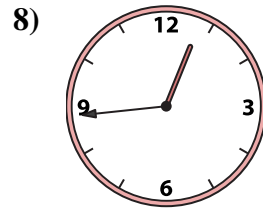
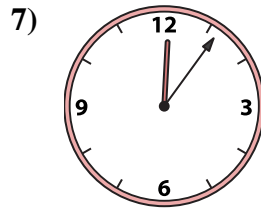
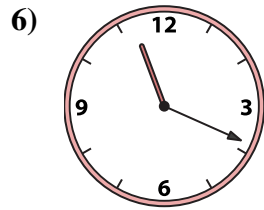
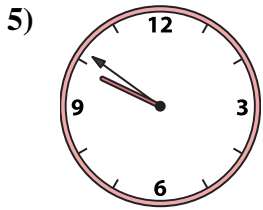
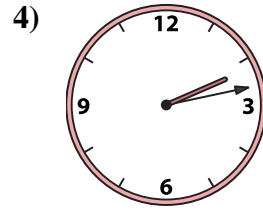
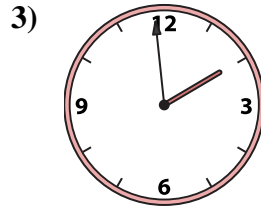
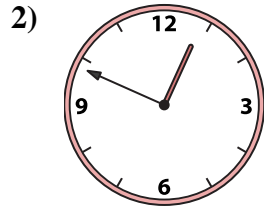
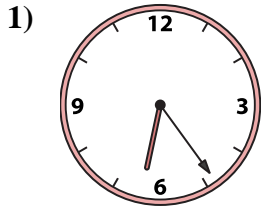
14. \_\_\_\_\_

15. \_\_\_\_\_

16. \_\_\_\_\_



Match the analog clock to the digital clock.



A. 6:24

B. 12:06

C. 5:07

D. 5:54

E. 9:51

F. 11:19

G. 12:29

H. 8:20

I. 12:50

J. 10:15

K. 1:59

L. 12:49

M. 12:44

N. 7:18

O. 2:13

P. 12:14

**Answers**

1. **A**

2. **L**

3. **K**

4. **O**

5. **E**

6. **F**

7. **B**

8. **M**

9. **I**

10. **P**

11. **C**

12. **H**

13. **J**

14. **D**

15. **N**

16. **G**