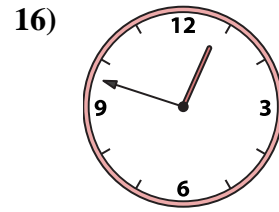
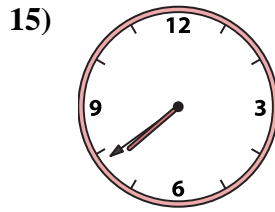
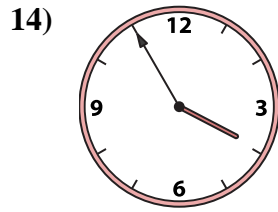
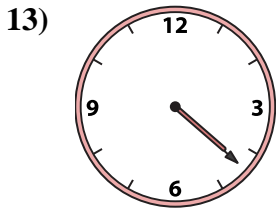
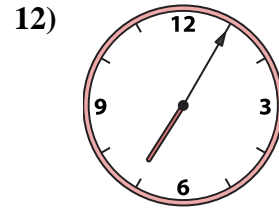
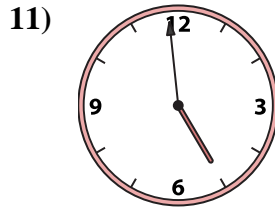
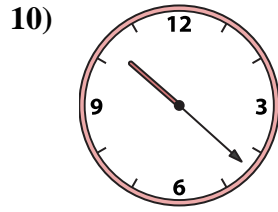
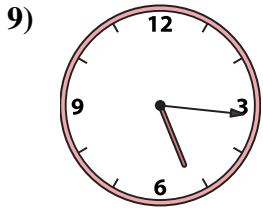
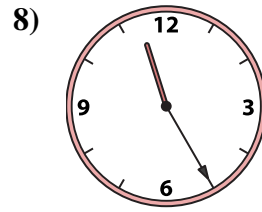

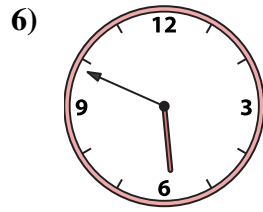
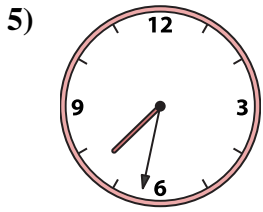
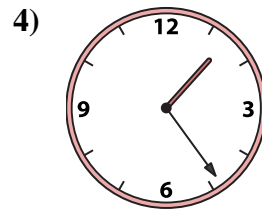
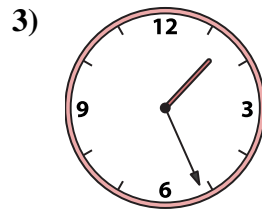
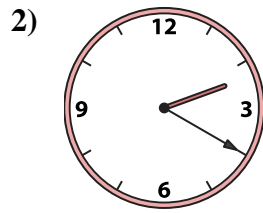





Match the analog clock to the digital clock.



**Answers**

1. \_\_\_\_\_
2. \_\_\_\_\_
3. \_\_\_\_\_
4. \_\_\_\_\_
5. \_\_\_\_\_
6. \_\_\_\_\_
7. \_\_\_\_\_
8. \_\_\_\_\_
9. \_\_\_\_\_
10. \_\_\_\_\_
11. \_\_\_\_\_
12. \_\_\_\_\_
13. \_\_\_\_\_
14. \_\_\_\_\_
15. \_\_\_\_\_
16. \_\_\_\_\_

A.  11:02

B.  1:24

C.  11:25

D.  5:16

E.  4:59

F.  4:22

G.  3:55

H.  5:49

I.  7:32

J.  1:01

K.  1:26

L.  12:48

M.  7:39

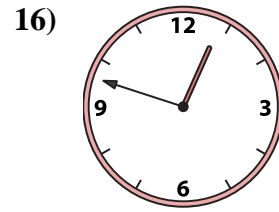
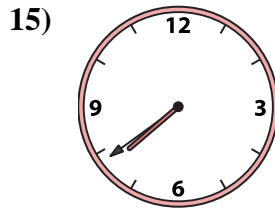
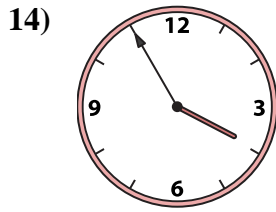
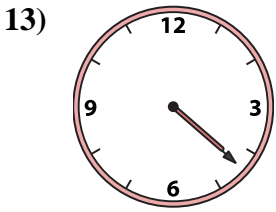
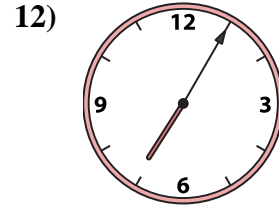
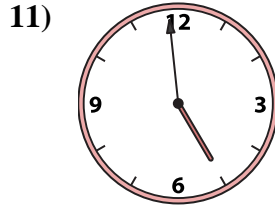
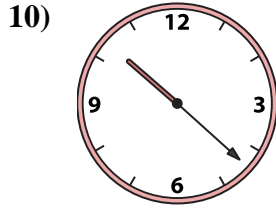
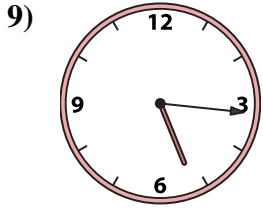
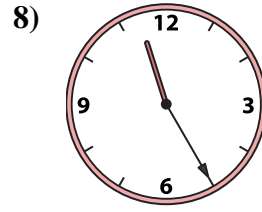
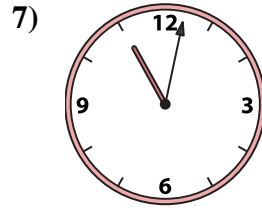
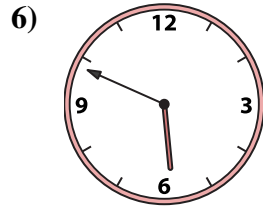
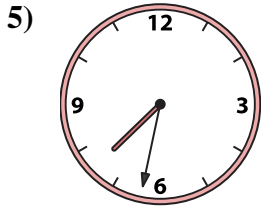
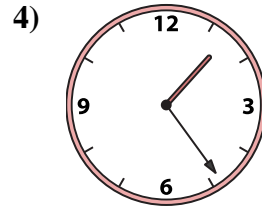
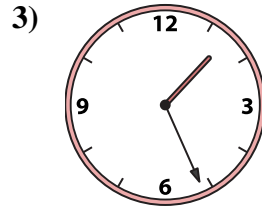
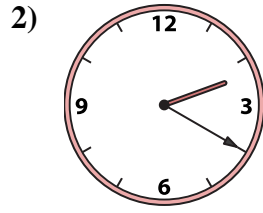

N.  2:20

O.  10:22

P.  7:05



Match the analog clock to the digital clock.



A. **11:02**

B. **1:24**

C. **11:25**

D. **5:16**

E. **4:59**

F. **4:22**

G. **3:55**

H. **5:49**

I. **7:32**

J. **1:01**

K. **1:26**

L. **12:48**

M. **7:39**

N. **2:20**

O. **10:22**

P. **7:05**

**Answers**

1. **J**

2. **N**

3. **K**

4. **B**

5. **I**

6. **H**

7. **A**

8. **C**

9. **D**

10. **O**

11. **E**

12. **P**

13. **F**

14. **G**

15. **M**

16. **L**