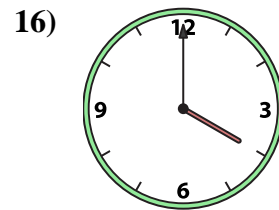
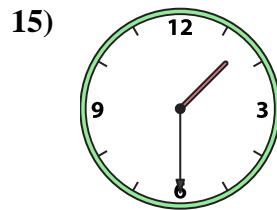
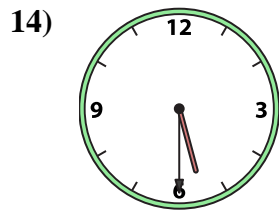
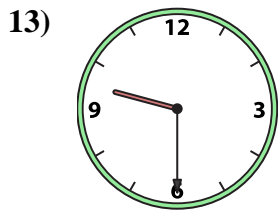
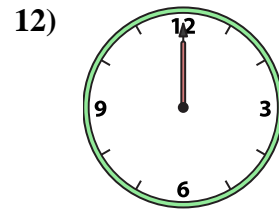
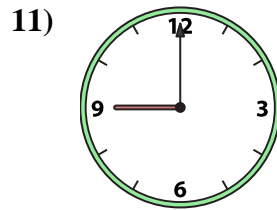
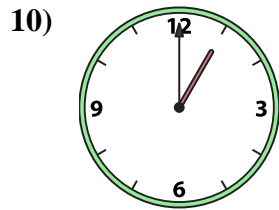
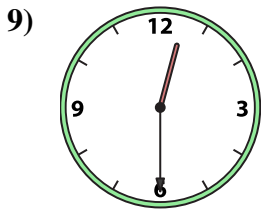
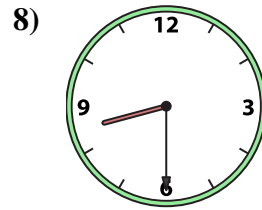
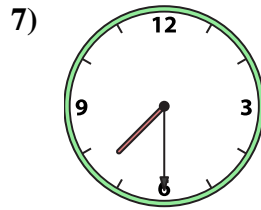
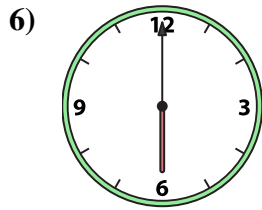
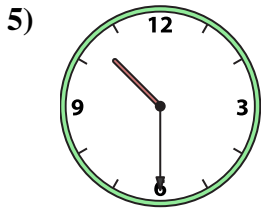
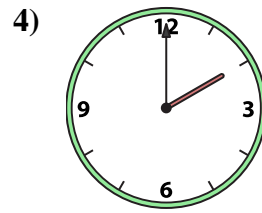
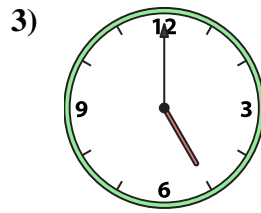
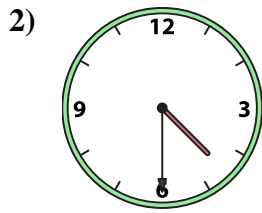





Match the analog clock to the digital clock.



A. 5:00

B. 6:00

C. 8:00

D. 1:30

E. 8:30

F. 4:00

G. 9:00

H. 2:00

I. 12:30

J. 10:30

K. 4:30

L. 1:00

M. 7:30

N. 12:00

O. 9:30

P. 5:30

Answers

1. _____

2. _____

3. _____

4. _____

5. _____

6. _____

7. _____

8. _____

9. _____

10. _____

11. _____

12. _____

13. _____

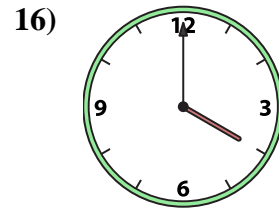
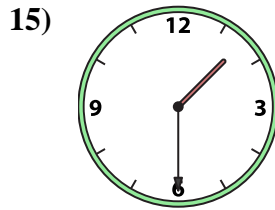
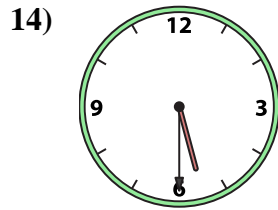
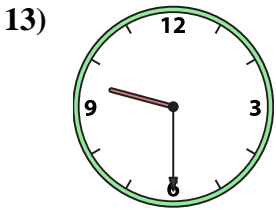
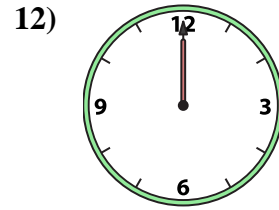
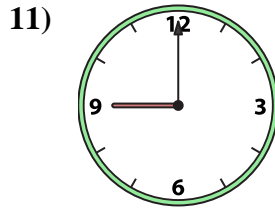
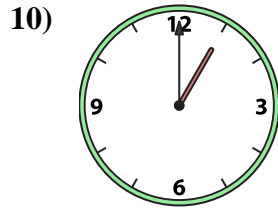
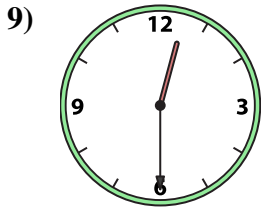
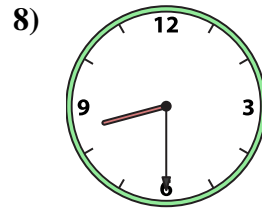
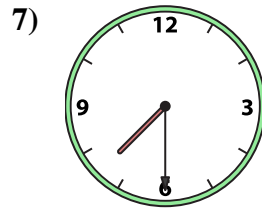
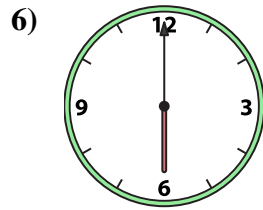
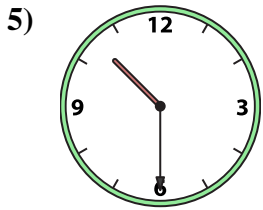
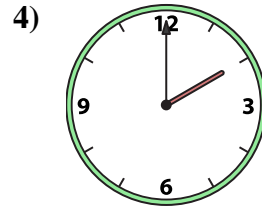
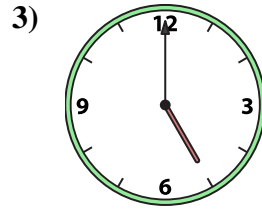
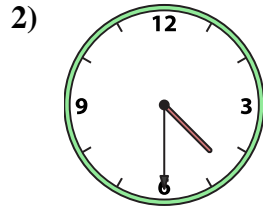
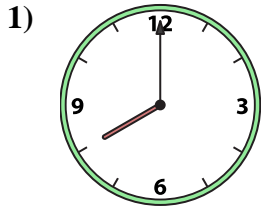
14. _____

15. _____

16. _____



Match the analog clock to the digital clock.



A. 5:00

B. 6:00

C. 8:00

D. 1:30

E. 8:30

F. 4:00

G. 9:00

H. 2:00

I. 12:30

J. 10:30

K. 4:30

L. 1:00

M. 7:30

N. 12:00

O. 9:30

P. 5:30

Answers

1. **C**

2. **K**

3. **A**

4. **H**

5. **J**

6. **B**

7. **M**

8. **E**

9. **I**

10. **L**

11. **G**

12. **N**

13. **O**

14. **P**

15. **D**

16. **F**