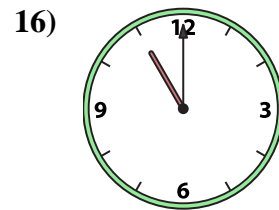
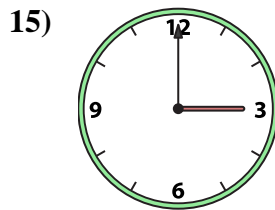
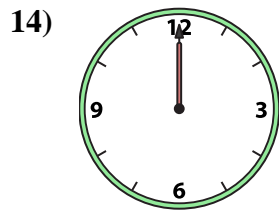
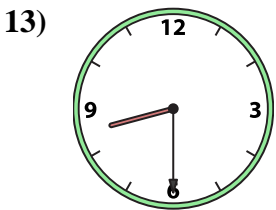
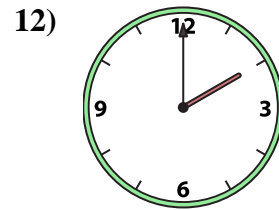
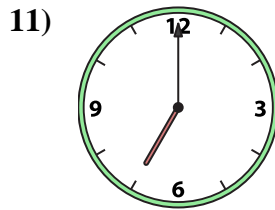
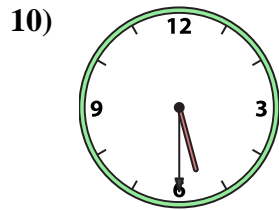
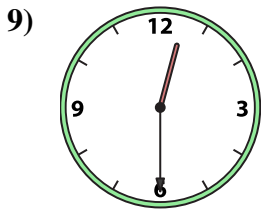
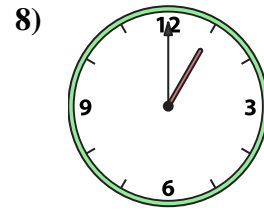
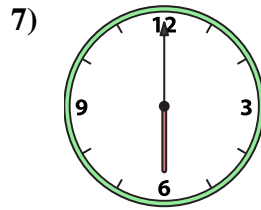
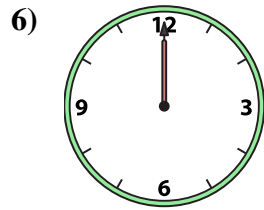
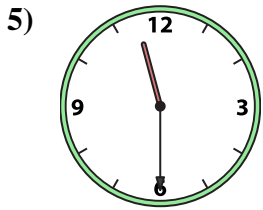
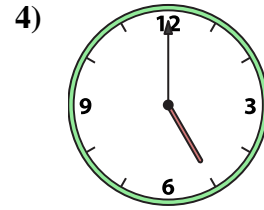
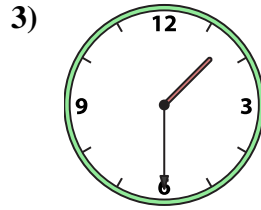
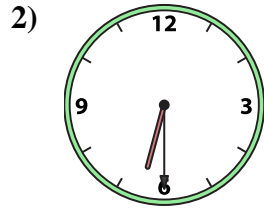
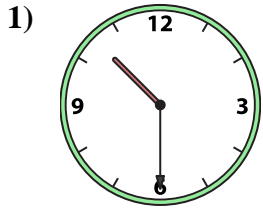




Match the analog clock to the digital clock.



A. 6:00

B. 1:30

C. 6:30

D. 12:00

E. 2:00

F. 12:30

G. 10:30

H. 1:00

I. 8:30

J. 5:30

K. 11:00

L. 5:00

M. 12:00

N. 7:00

O. 3:00

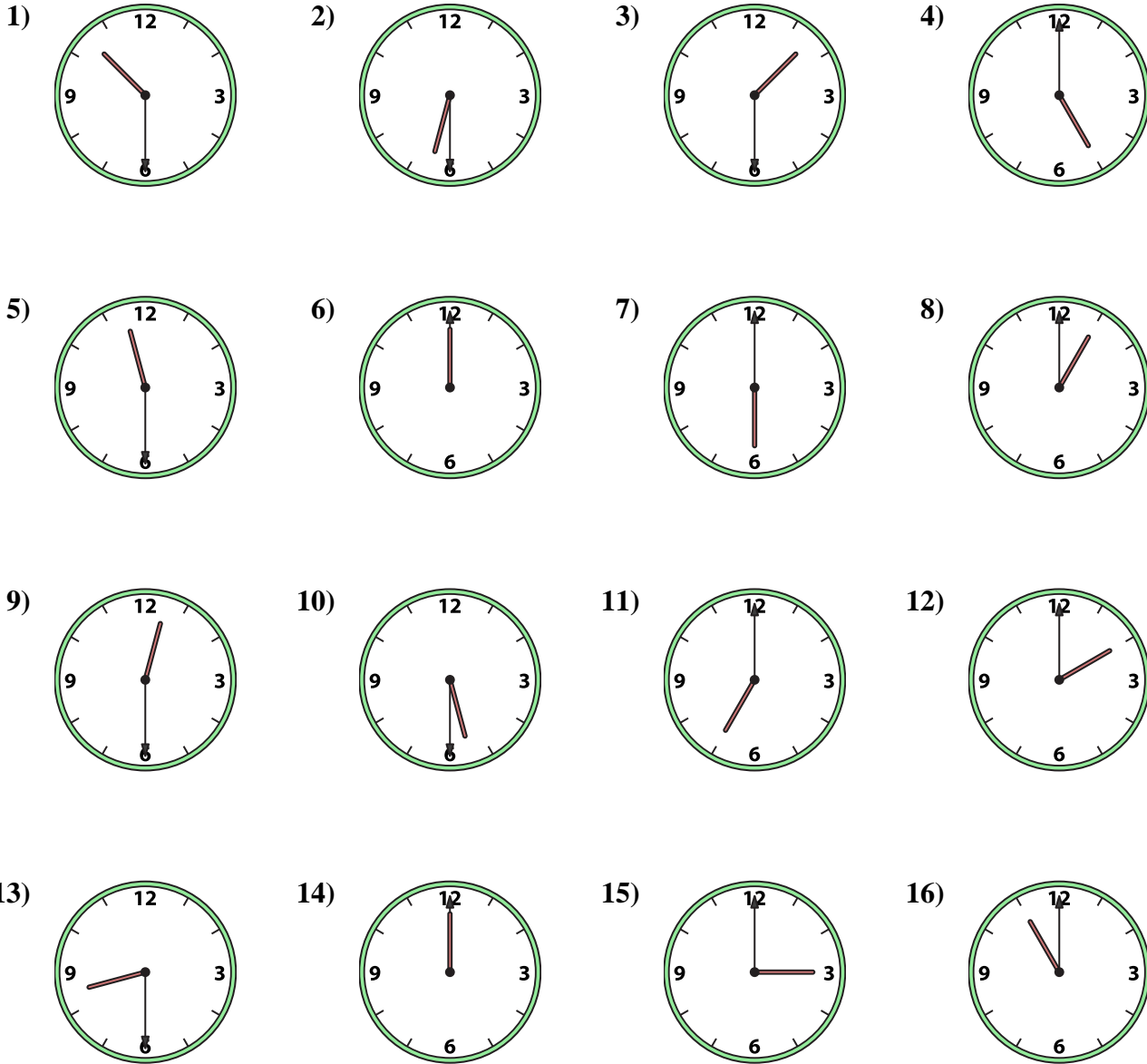
P. 11:30

Answers

1. _____
2. _____
3. _____
4. _____
5. _____
6. _____
7. _____
8. _____
9. _____
10. _____
11. _____
12. _____
13. _____
14. _____
15. _____
16. _____



Match the analog clock to the digital clock.



- A. 6:00
- B. 1:30
- C. 6:30
- D. 12:00
- E. 2:00
- F. 12:30
- G. 10:30
- H. 1:00
- I. 8:30
- J. 5:30
- K. 11:00
- L. 5:00
- M. 12:00
- N. 7:00
- O. 3:00
- P. 11:30

Answers

- 1. **G**
- 2. **C**
- 3. **B**
- 4. **L**
- 5. **P**
- 6. **D**
- 7. **A**
- 8. **H**
- 9. **F**
- 10. **J**
- 11. **N**
- 12. **E**
- 13. **I**
- 14. **M**
- 15. **O**
- 16. **K**