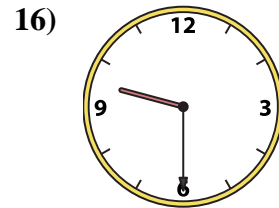
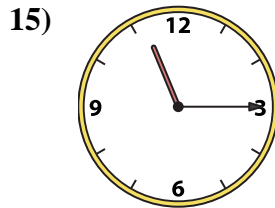
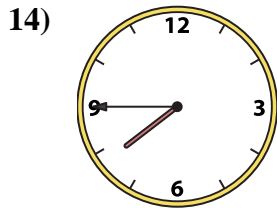
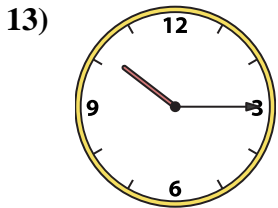
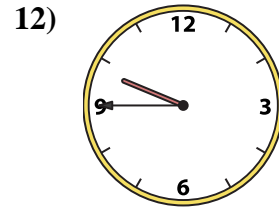
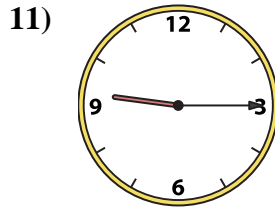
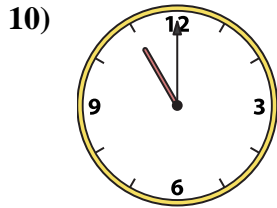
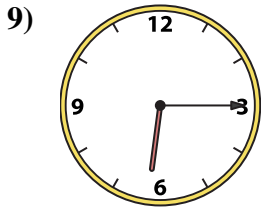
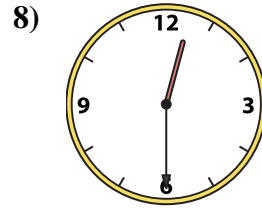
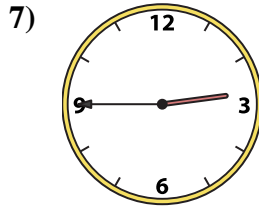
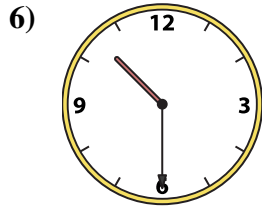
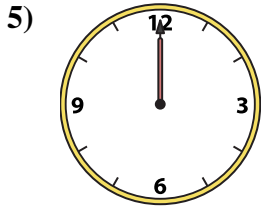
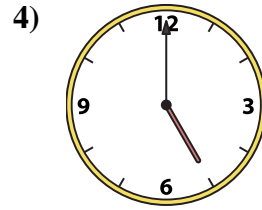
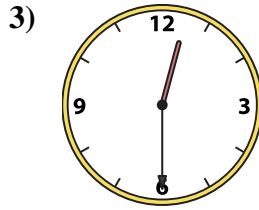
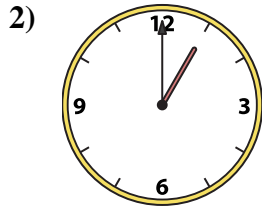
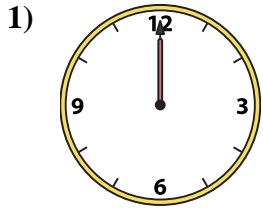




Match the analog clock to the digital clock.



A. 9:30

B. 6:15

C. 12:30

D. 10:30

E. 1:00

F. 7:45

G. 9:15

H. 2:45

I. 12:00

J. 10:15

K. 11:15

L. 5:00

M. 11:00

N. 9:45

O. 12:30

P. 12:00

Answers

1. _____

2. _____

3. _____

4. _____

5. _____

6. _____

7. _____

8. _____

9. _____

10. _____

11. _____

12. _____

13. _____

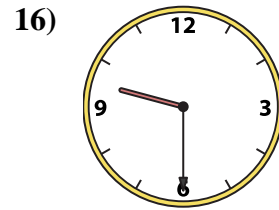
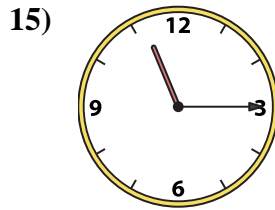
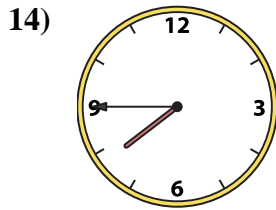
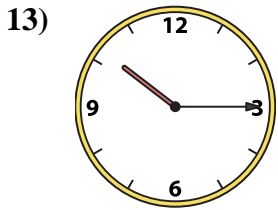
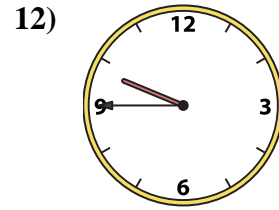
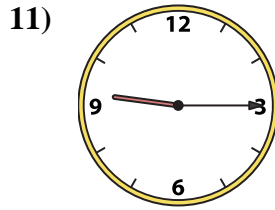
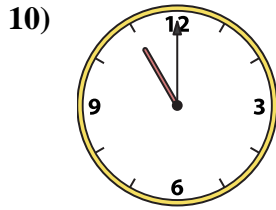
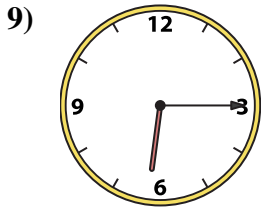
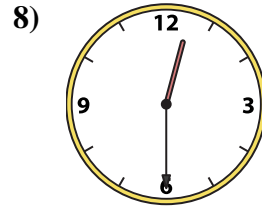
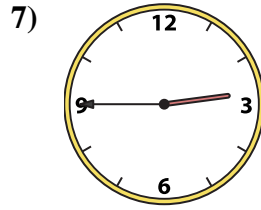
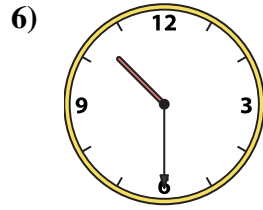
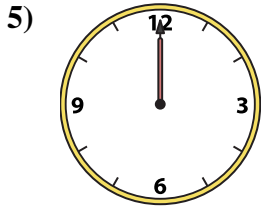
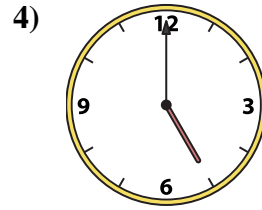
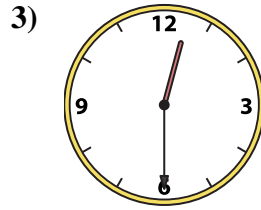
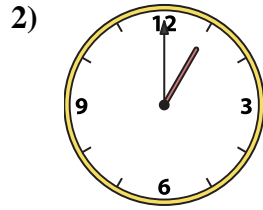
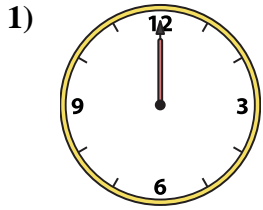
14. _____

15. _____

16. _____



Match the analog clock to the digital clock.



A. **9:30**

B. **6:15**

C. **12:30**

D. **10:30**

E. **1:00**

F. **7:45**

G. **9:15**

H. **2:45**

I. **12:00**

J. **10:15**

K. **11:15**

L. **5:00**

M. **11:00**

N. **9:45**

O. **12:30**

P. **12:00**

Answers

1. **I**

2. **E**

3. **C**

4. **L**

5. **P**

6. **D**

7. **H**

8. **O**

9. **B**

10. **M**

11. **G**

12. **N**

13. **J**

14. **F**

15. **K**

16. **A**