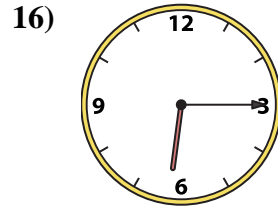
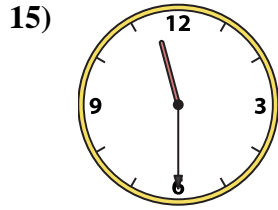
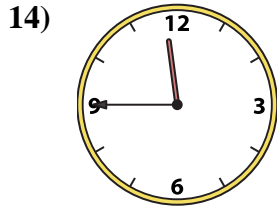
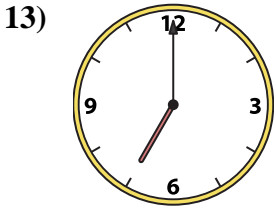
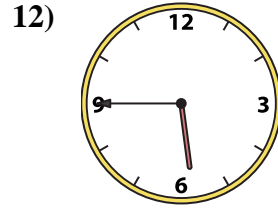
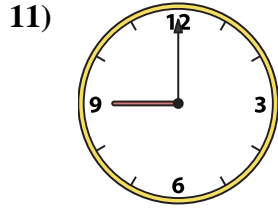
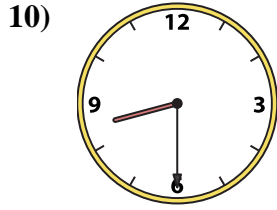
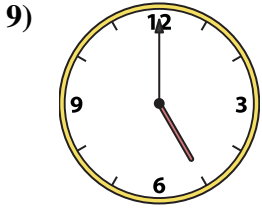
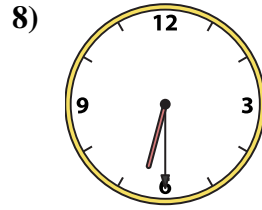
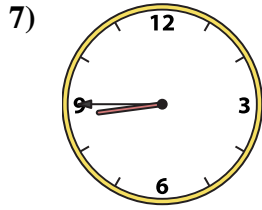


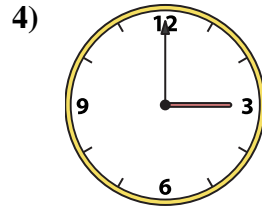
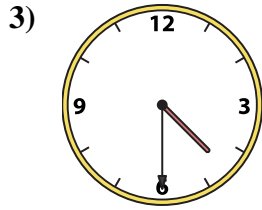
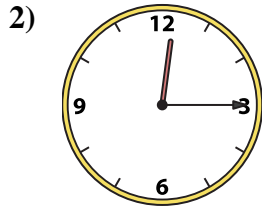
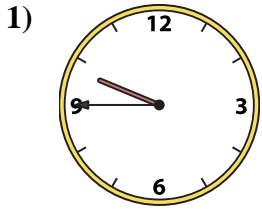




Match the analog clock to the digital clock.

Answers



A. 9:45

B. 11:30

C. 5:45

D. 5:00

E. 4:30

F. 7:00

G. 11:45

H. 3:00

I. 8:30

J. 1:15

K. 12:15

L. 8:45

M. 6:15

N. 6:30

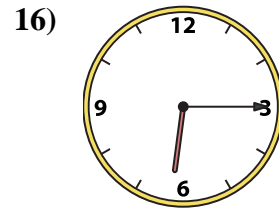
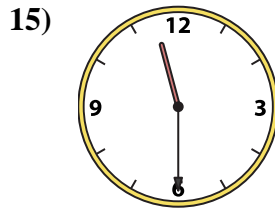
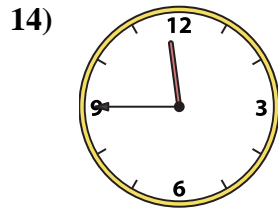
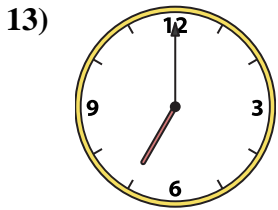
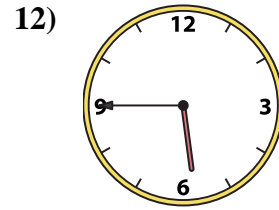
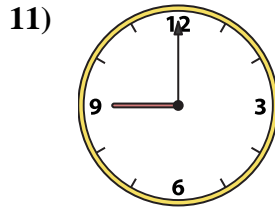
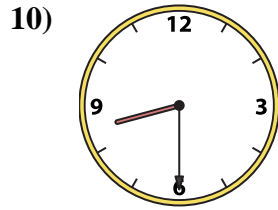
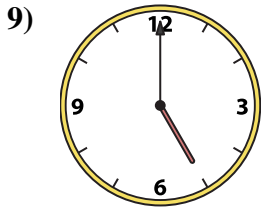
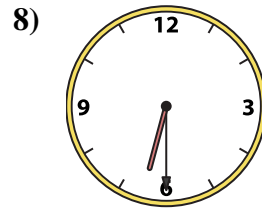
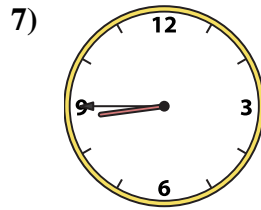
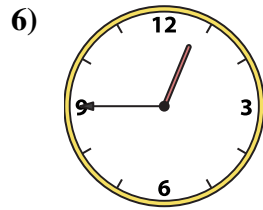
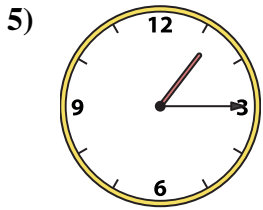
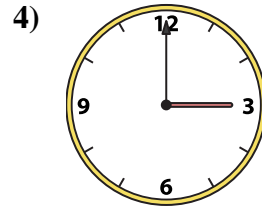
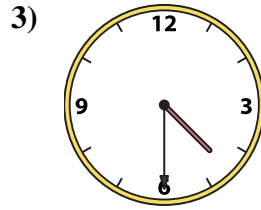
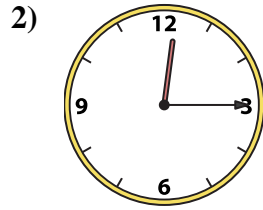
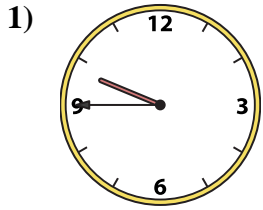
O. 12:45

P. 9:00

1. _____
2. _____
3. _____
4. _____
5. _____
6. _____
7. _____
8. _____
9. _____
10. _____
11. _____
12. _____
13. _____
14. _____
15. _____
16. _____



Match the analog clock to the digital clock.



A. **9:45**

B. **11:30**

C. **5:45**

D. **5:00**

E. **4:30**

F. **7:00**

G. **11:45**

H. **3:00**

I. **8:30**

J. **1:15**

K. **12:15**

L. **8:45**

M. **6:15**

N. **6:30**

O. **12:45**

P. **9:00**

Answers

1. **A**

2. **K**

3. **E**

4. **H**

5. **J**

6. **O**

7. **L**

8. **N**

9. **D**

10. **I**

11. **P**

12. **C**

13. **F**

14. **G**

15. **B**

16. **M**