



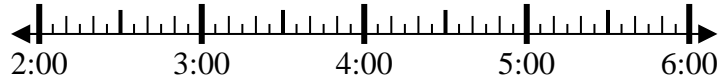
Solve each problem.

Answers

1) Start: _____

Elapsed: 2 hrs & 15 mins

End: 5:10



1. _____

2) Start: _____

Elapsed: 1 hr & 25 mins

End: 3:05

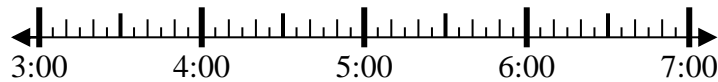


2. _____

3) Start: _____

Elapsed: 2 hrs & 10 mins

End: 5:20

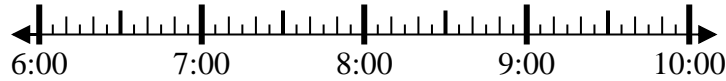


3. _____

4) Start: _____

Elapsed: 2 hrs & 25 mins

End: 8:35

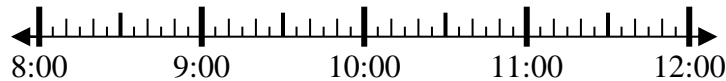


4. _____

5) Start: _____

Elapsed: 2 hrs & 20 mins

End: 11:10



5. _____

6) Start: _____

Elapsed: 1 hr & 15 mins

End: 1:35

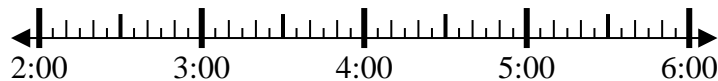


6. _____

7) Start: _____

Elapsed: 2 hrs & 45 mins

End: 5:30



7. _____

8) Start: _____

Elapsed: 1 hr & 50 mins

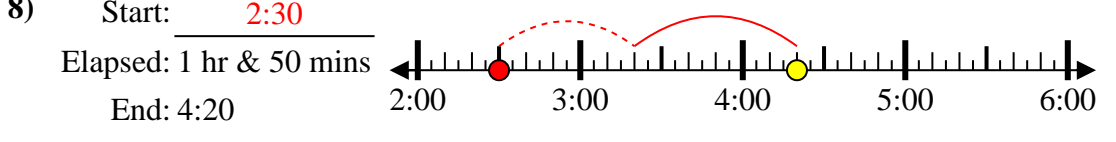
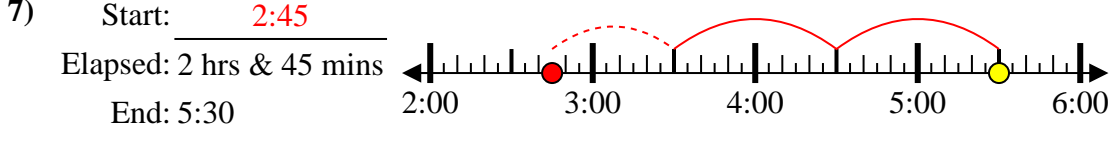
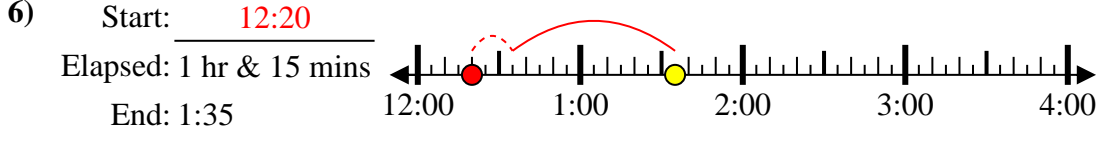
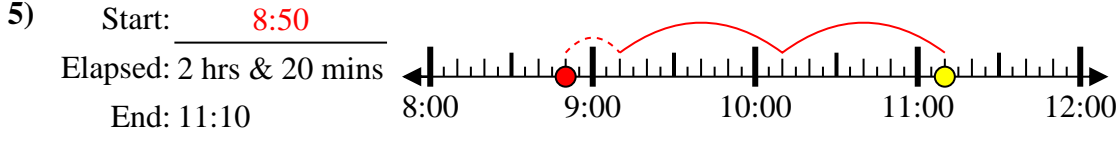
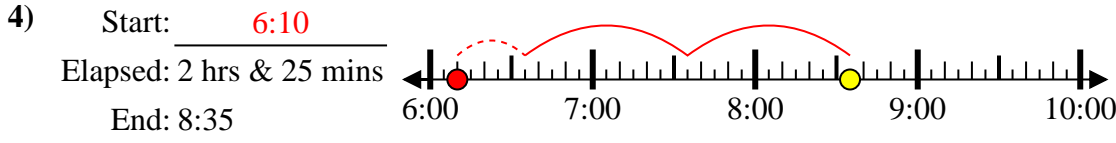
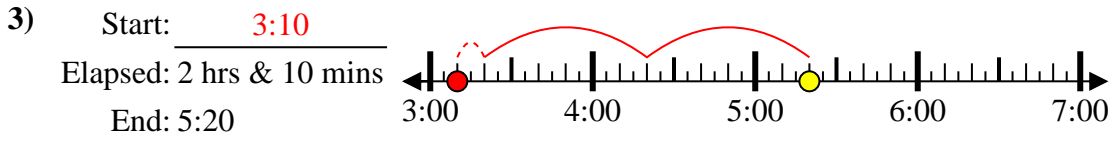
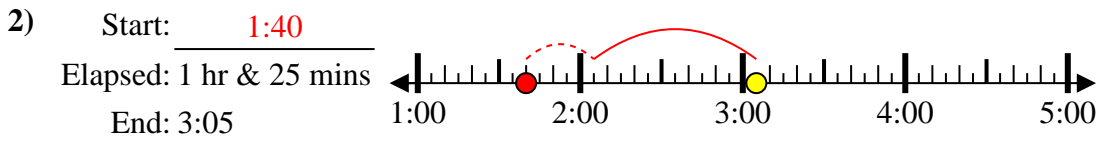
End: 4:20



8. _____



Solve each problem.



Answers

1. 2:55
2. 1:40
3. 3:10
4. 6:10
5. 8:50
6. 12:20
7. 2:45
8. 2:30