



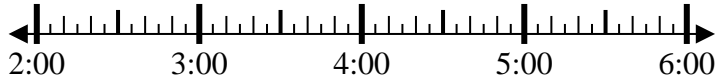
Solve each problem.

Answers

1) Start: _____

Elapsed: 1 hr & 40 mins

End: 3:55

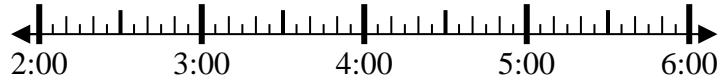


1. _____

2) Start: _____

Elapsed: 2 hrs & 45 mins

End: 4:55



2. _____

3) Start: _____

Elapsed: 2 hrs & 10 mins

End: 4:55



3. _____

4) Start: _____

Elapsed: 1 hr & 20 mins

End: 3:40

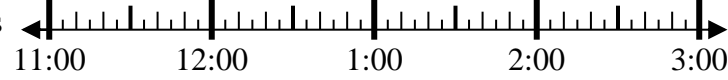


4. _____

5) Start: _____

Elapsed: 2 hrs & 25 mins

End: 1:30

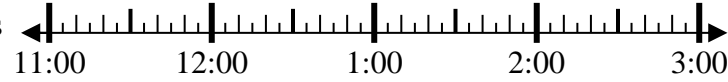


5. _____

6) Start: _____

Elapsed: 2 hrs & 20 mins

End: 1:25

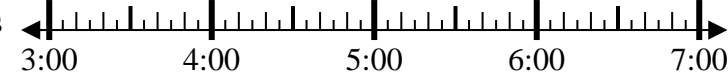


6. _____

7) Start: _____

Elapsed: 2 hrs & 20 mins

End: 6:05

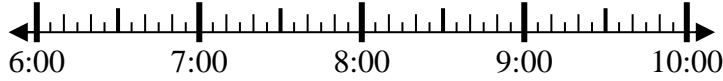


7. _____

8) Start: _____

Elapsed: 1 hr & 30 mins

End: 7:50

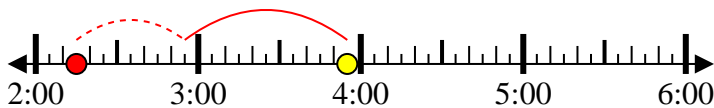


8. _____



Solve each problem.

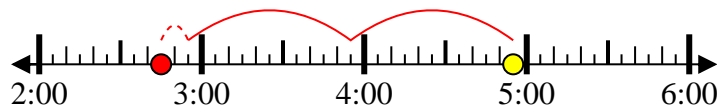
1) Start: 2:15
 Elapsed: 1 hr & 40 mins
 End: 3:55



2) Start: 2:10
 Elapsed: 2 hrs & 45 mins
 End: 4:55



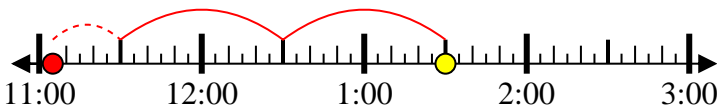
3) Start: 2:45
 Elapsed: 2 hrs & 10 mins
 End: 4:55



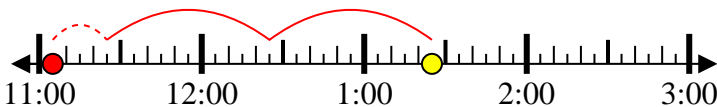
4) Start: 2:20
 Elapsed: 1 hr & 20 mins
 End: 3:40



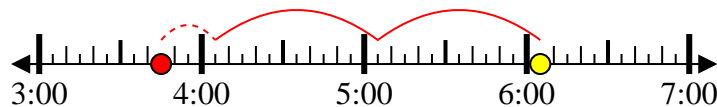
5) Start: 11:05
 Elapsed: 2 hrs & 25 mins
 End: 1:30



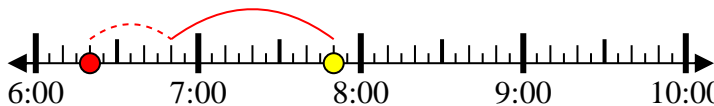
6) Start: 11:05
 Elapsed: 2 hrs & 20 mins
 End: 1:25



7) Start: 3:45
 Elapsed: 2 hrs & 20 mins
 End: 6:05



8) Start: 6:20
 Elapsed: 1 hr & 30 mins
 End: 7:50



Answers

1. 2:15

2. 2:10

3. 2:45

4. 2:20

5. 11:05

6. 11:05

7. 3:45

8. 6:20



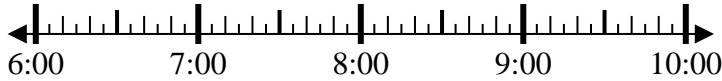
Solve each problem.

Answers

1) Start: _____

Elapsed: 1 hr & 10 mins

End: 7:55

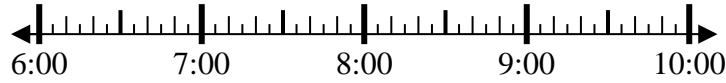


1. _____

2) Start: _____

Elapsed: 2 hrs & 40 mins

End: 9:05



2. _____

3) Start: _____

Elapsed: 1 hr & 50 mins

End: 3:00

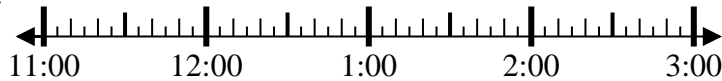


3. _____

4) Start: _____

Elapsed: 1 hr & 45 mins

End: 1:00

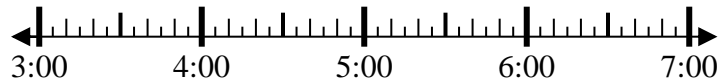


4. _____

5) Start: _____

Elapsed: 2 hrs & 10 mins

End: 5:35

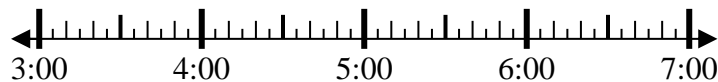


5. _____

6) Start: _____

Elapsed: 2 hrs & 35 mins

End: 5:55

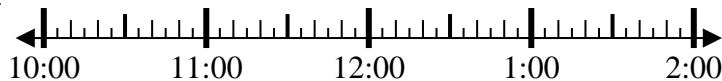


6. _____

7) Start: _____

Elapsed: 1 hr & 50 mins

End: 12:25

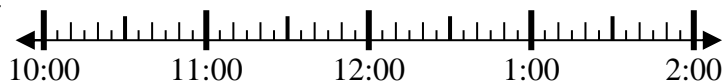


7. _____

8) Start: _____

Elapsed: 1 hr & 30 mins

End: 11:30

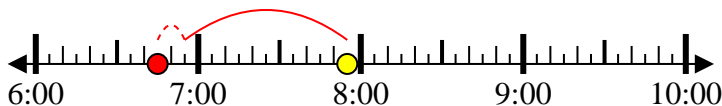


8. _____

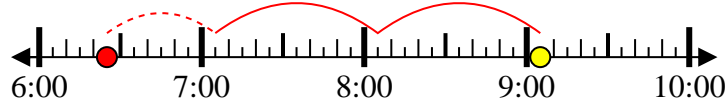


Solve each problem.

1) Start: 6:45
 Elapsed: 1 hr & 10 mins
 End: 7:55



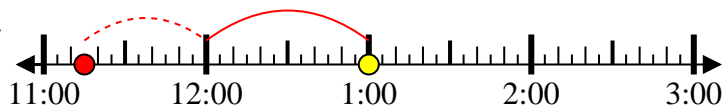
2) Start: 6:25
 Elapsed: 2 hrs & 40 mins
 End: 9:05



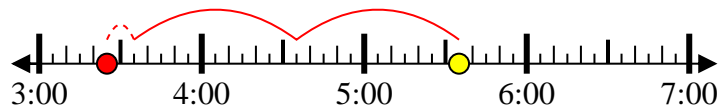
3) Start: 1:10
 Elapsed: 1 hr & 50 mins
 End: 3:00



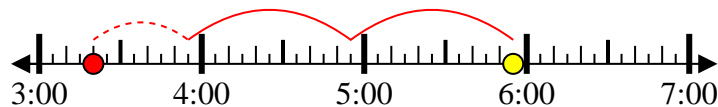
4) Start: 11:15
 Elapsed: 1 hr & 45 mins
 End: 1:00



5) Start: 3:25
 Elapsed: 2 hrs & 10 mins
 End: 5:35



6) Start: 3:20
 Elapsed: 2 hrs & 35 mins
 End: 5:55



7) Start: 10:35
 Elapsed: 1 hr & 50 mins
 End: 12:25



8) Start: 10:00
 Elapsed: 1 hr & 30 mins
 End: 11:30



Answers

1. 6:45

2. 6:25

3. 1:10

4. 11:15

5. 3:25

6. 3:20

7. 10:35

8. 10:00



Solve each problem.

Answers

1) Start: _____

Elapsed: 1 hr & 45 mins

End: 3:45

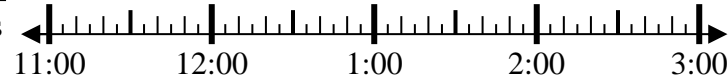


1. _____

2) Start: _____

Elapsed: 2 hrs & 45 mins

End: 2:20

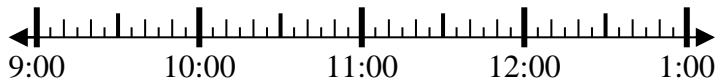


2. _____

3) Start: _____

Elapsed: 1 hr & 10 mins

End: 10:10



3. _____

4) Start: _____

Elapsed: 1 hr & 20 mins

End: 1:05



4. _____

5) Start: _____

Elapsed: 1 hr & 15 mins

End: 1:35



5. _____

6) Start: _____

Elapsed: 1 hr & 10 mins

End: 6:35

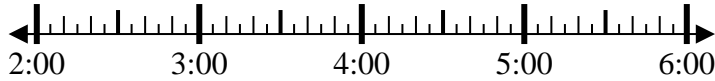


6. _____

7) Start: _____

Elapsed: 1 hr & 45 mins

End: 4:20

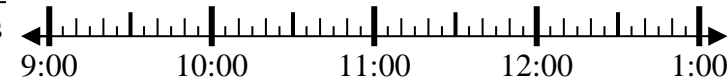


7. _____

8) Start: _____

Elapsed: 2 hrs & 45 mins

End: 12:20

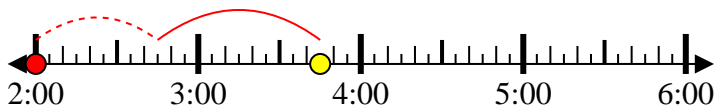


8. _____

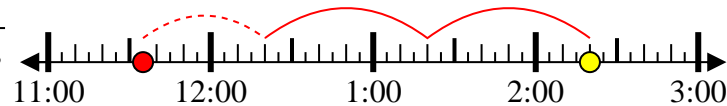


Solve each problem.

1) Start: 2:00
 Elapsed: 1 hr & 45 mins
 End: 3:45



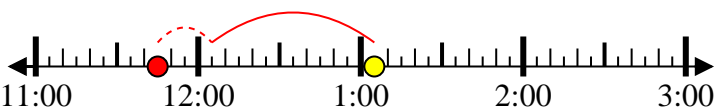
2) Start: 11:35
 Elapsed: 2 hrs & 45 mins
 End: 2:20



3) Start: 9:00
 Elapsed: 1 hr & 10 mins
 End: 10:10



4) Start: 11:45
 Elapsed: 1 hr & 20 mins
 End: 1:05



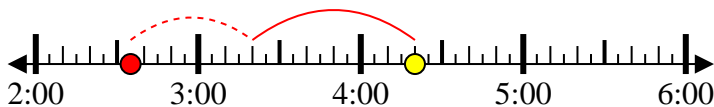
5) Start: 12:20
 Elapsed: 1 hr & 15 mins
 End: 1:35



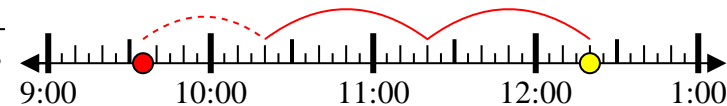
6) Start: 5:25
 Elapsed: 1 hr & 10 mins
 End: 6:35



7) Start: 2:35
 Elapsed: 1 hr & 45 mins
 End: 4:20



8) Start: 9:35
 Elapsed: 2 hrs & 45 mins
 End: 12:20



Answers

1. 2:00

2. 11:35

3. 9:00

4. 11:45

5. 12:20

6. 5:25

7. 2:35

8. 9:35



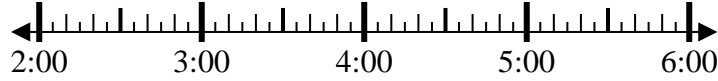
Solve each problem.

Answers

1) Start: _____

Elapsed: 2 hrs & 50 mins

End: 5:40

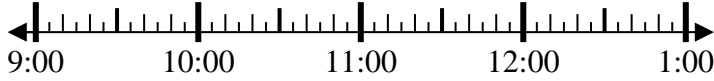


1. _____

2) Start: _____

Elapsed: 1 hr & 10 mins

End: 10:20

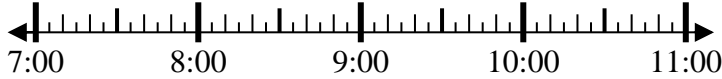


2. _____

3) Start: _____

Elapsed: 1 hr & 15 mins

End: 8:20

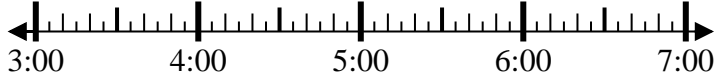


3. _____

4) Start: _____

Elapsed: 1 hr & 15 mins

End: 4:15



4. _____

5) Start: _____

Elapsed: 1 hr & 40 mins

End: 8:55

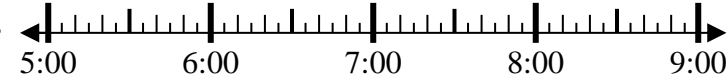


5. _____

6) Start: _____

Elapsed: 2 hrs & 15 mins

End: 7:15

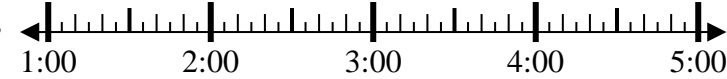


6. _____

7) Start: _____

Elapsed: 2 hrs & 45 mins

End: 3:45

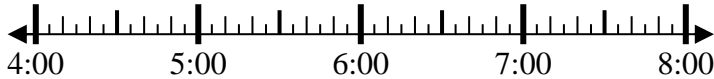


7. _____

8) Start: _____

Elapsed: 1 hr & 20 mins

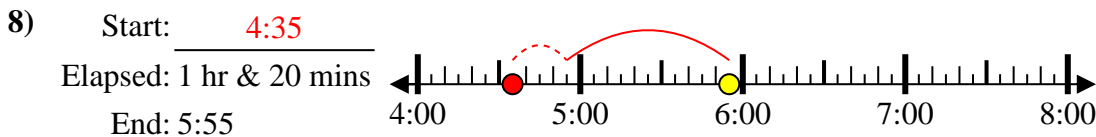
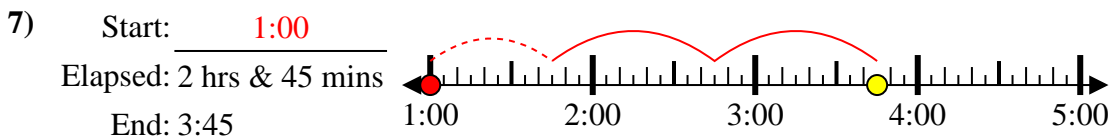
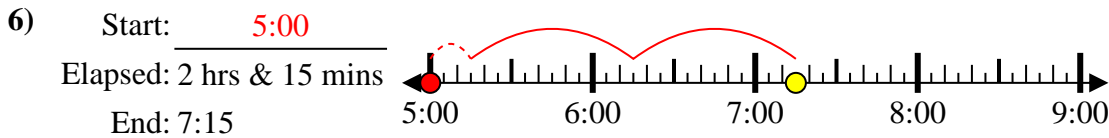
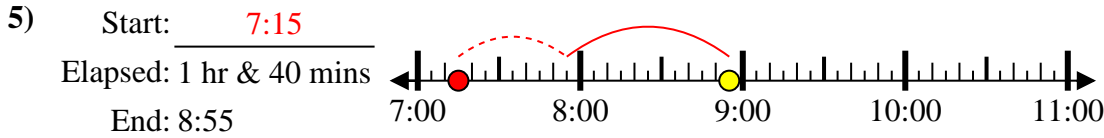
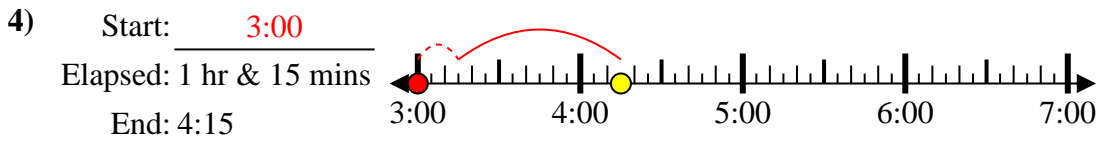
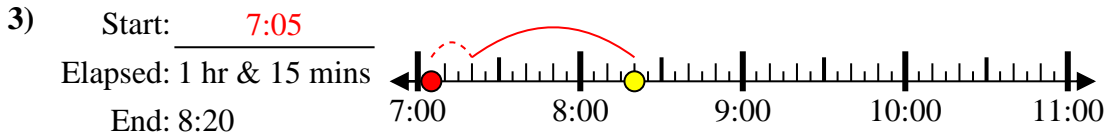
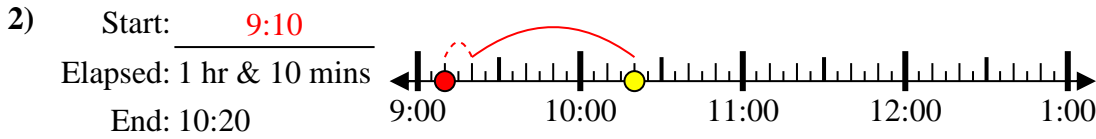
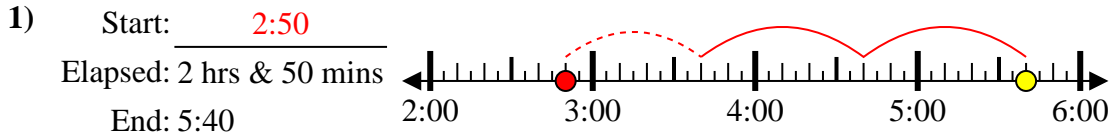
End: 5:55



8. _____



Solve each problem.



Answers

1. 2:50

2. 9:10

3. 7:05

4. 3:00

5. 7:15

6. 5:00

7. 1:00

8. 4:35



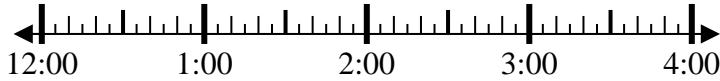
Solve each problem.

Answers

1) Start: _____

Elapsed: 1 hr & 25 mins

End: 1:35

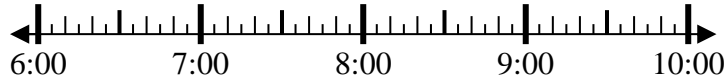


1. _____

2) Start: _____

Elapsed: 2 hrs & 10 mins

End: 8:50

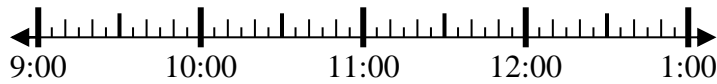


2. _____

3) Start: _____

Elapsed: 2 hrs & 50 mins

End: 11:55

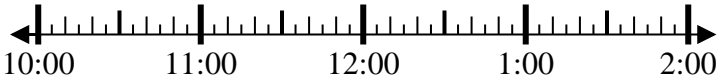


3. _____

4) Start: _____

Elapsed: 2 hrs & 40 mins

End: 1:25

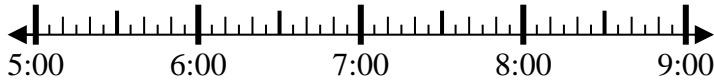


4. _____

5) Start: _____

Elapsed: 1 hr & 30 mins

End: 7:05

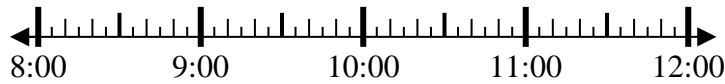


5. _____

6) Start: _____

Elapsed: 2 hrs & 25 mins

End: 10:40

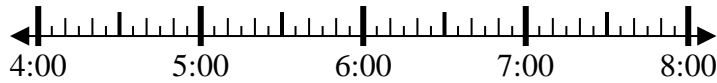


6. _____

7) Start: _____

Elapsed: 2 hrs & 55 mins

End: 7:05



7. _____

8) Start: _____

Elapsed: 2 hrs & 20 mins

End: 6:20



8. _____



Solve each problem.

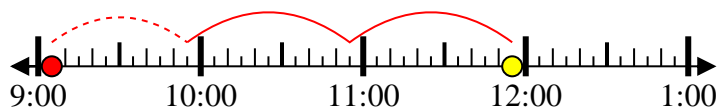
1) Start: 12:10
 Elapsed: 1 hr & 25 mins
 End: 1:35



2) Start: 6:40
 Elapsed: 2 hrs & 10 mins
 End: 8:50



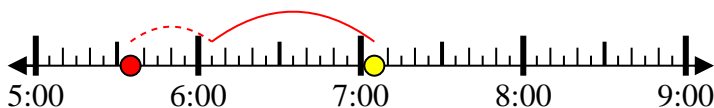
3) Start: 9:05
 Elapsed: 2 hrs & 50 mins
 End: 11:55



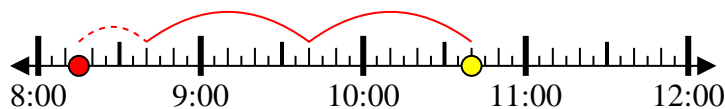
4) Start: 10:45
 Elapsed: 2 hrs & 40 mins
 End: 1:25



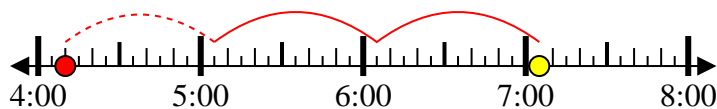
5) Start: 5:35
 Elapsed: 1 hr & 30 mins
 End: 7:05



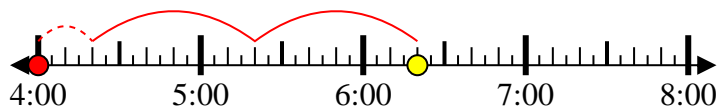
6) Start: 8:15
 Elapsed: 2 hrs & 25 mins
 End: 10:40



7) Start: 4:10
 Elapsed: 2 hrs & 55 mins
 End: 7:05



8) Start: 4:00
 Elapsed: 2 hrs & 20 mins
 End: 6:20



Answers

1. 12:10
2. 6:40
3. 9:05
4. 10:45
5. 5:35
6. 8:15
7. 4:10
8. 4:00



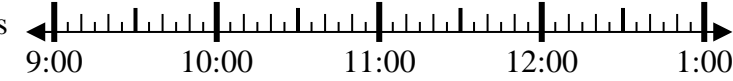
Solve each problem.

Answers

1) Start: _____

Elapsed: 2 hrs & 30 mins

End: 12:05

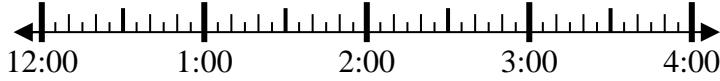


1. _____

2) Start: _____

Elapsed: 1 hr & 45 mins

End: 2:35

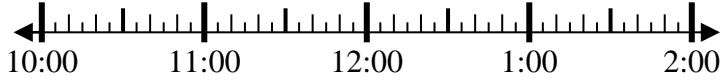


2. _____

3) Start: _____

Elapsed: 1 hr & 25 mins

End: 11:40

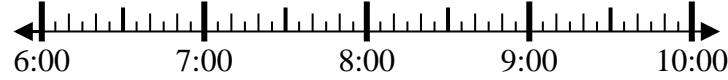


3. _____

4) Start: _____

Elapsed: 1 hr & 45 mins

End: 8:10

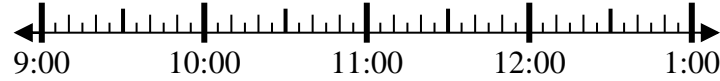


4. _____

5) Start: _____

Elapsed: 1 hr & 15 mins

End: 10:25

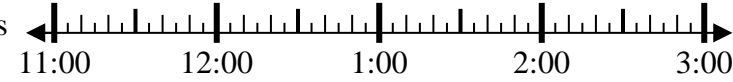


5. _____

6) Start: _____

Elapsed: 2 hrs & 15 mins

End: 2:00

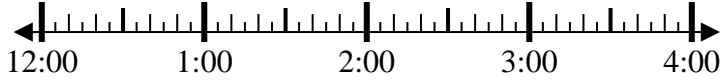


6. _____

7) Start: _____

Elapsed: 1 hr & 40 mins

End: 2:00

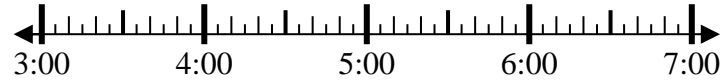


7. _____

8) Start: _____

Elapsed: 1 hr & 40 mins

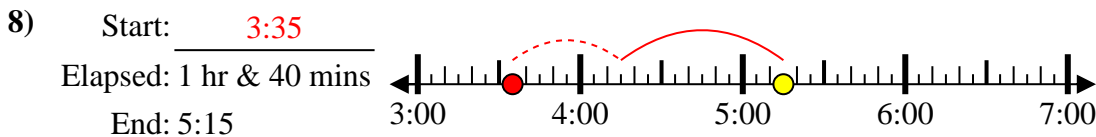
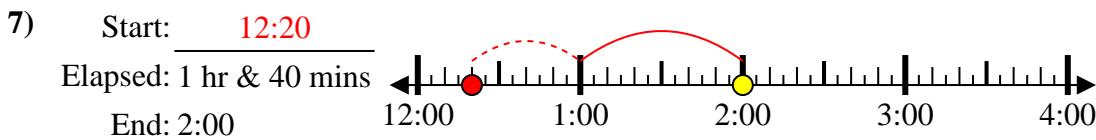
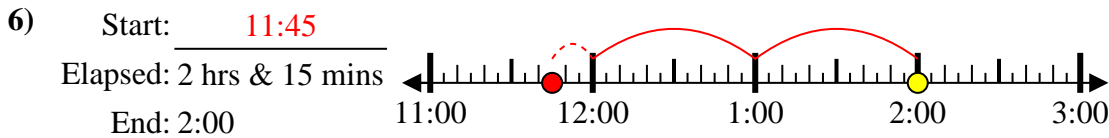
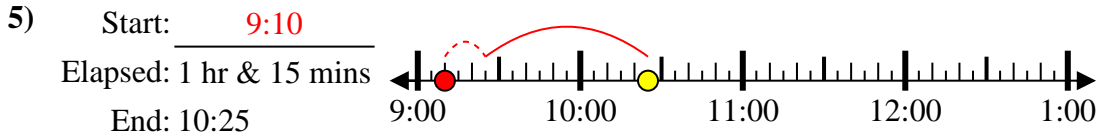
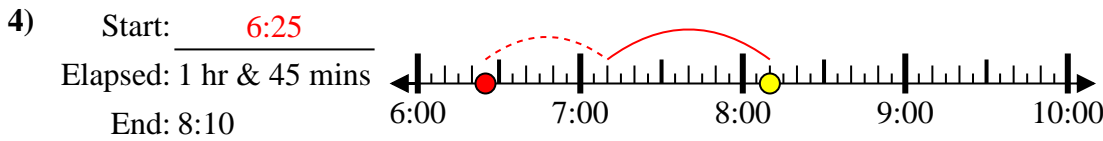
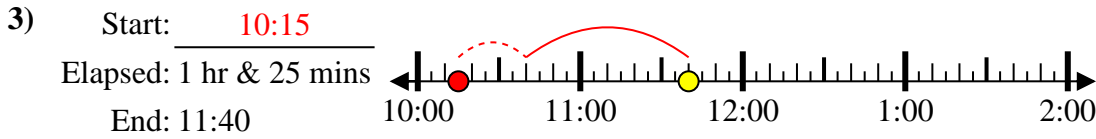
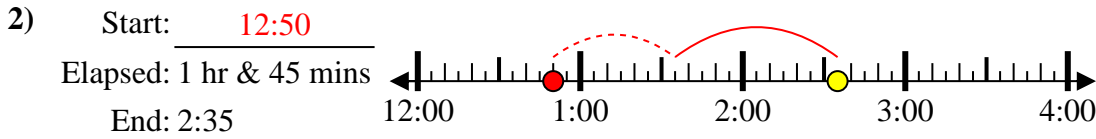
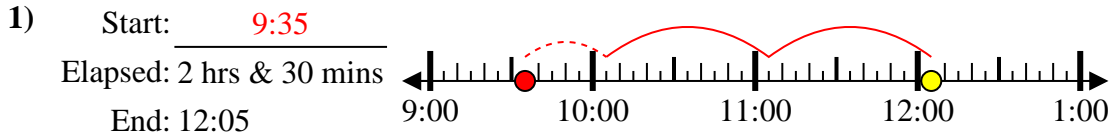
End: 5:15



8. _____



Solve each problem.



Answers

1. 9:35

2. 12:50

3. 10:15

4. 6:25

5. 9:10

6. 11:45

7. 12:20

8. 3:35



Solve each problem.

Answers

1) Start: _____

Elapsed: 2 hrs & 20 mins

End: 9:25

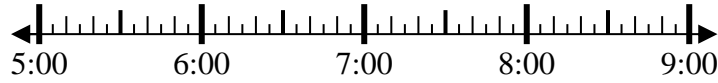


1. _____

2) Start: _____

Elapsed: 2 hrs & 20 mins

End: 7:45

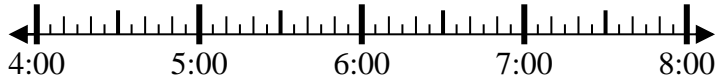


2. _____

3) Start: _____

Elapsed: 1 hr & 35 mins

End: 5:50

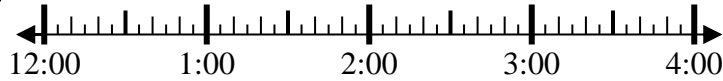


3. _____

4) Start: _____

Elapsed: 2 hrs & 40 mins

End: 2:45

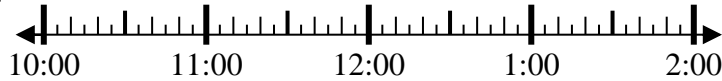


4. _____

5) Start: _____

Elapsed: 1 hr & 45 mins

End: 11:50

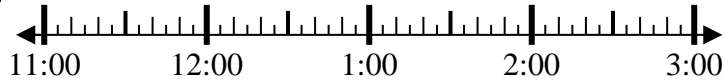


5. _____

6) Start: _____

Elapsed: 2 hrs & 15 mins

End: 2:00

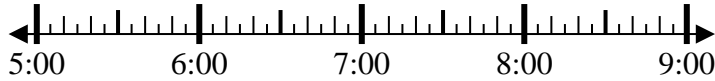


6. _____

7) Start: _____

Elapsed: 1 hr & 40 mins

End: 7:05



7. _____

8) Start: _____

Elapsed: 1 hr & 15 mins

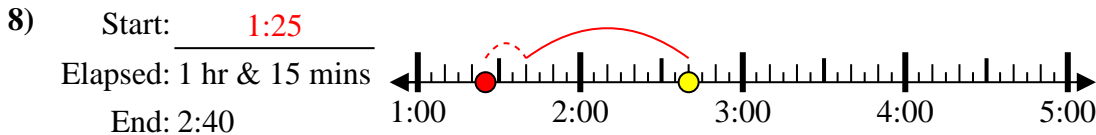
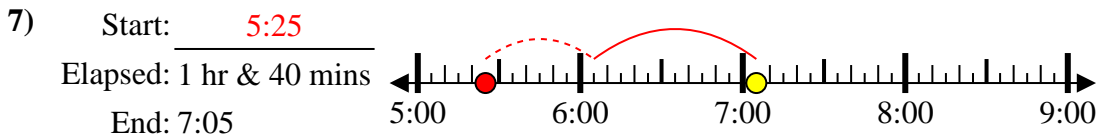
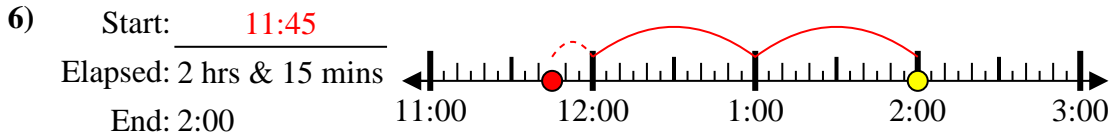
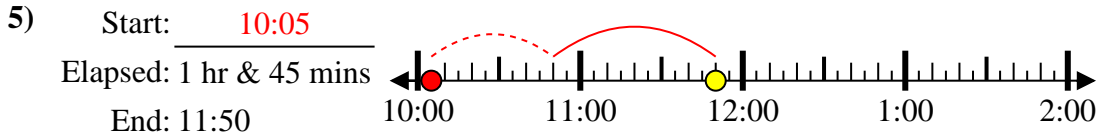
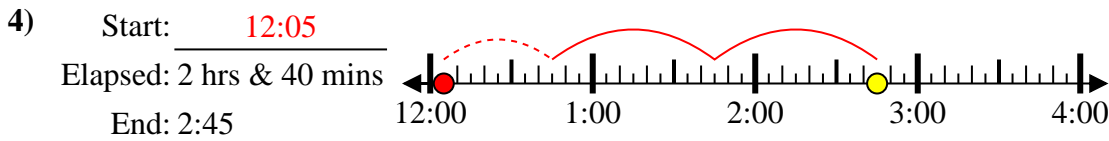
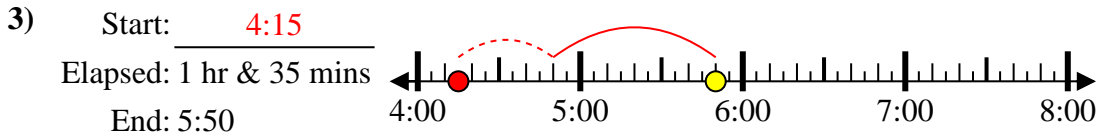
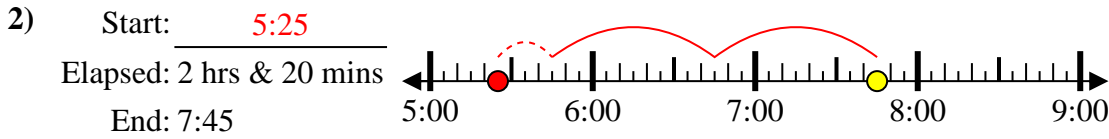
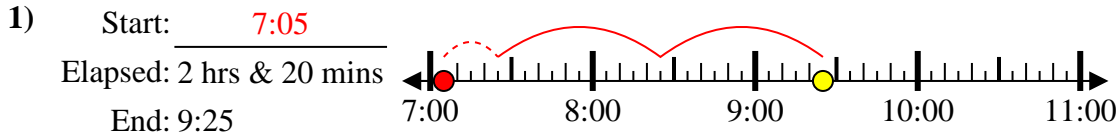
End: 2:40



8. _____



Solve each problem.



Answers

1. 7:05

2. 5:25

3. 4:15

4. 12:05

5. 10:05

6. 11:45

7. 5:25

8. 1:25



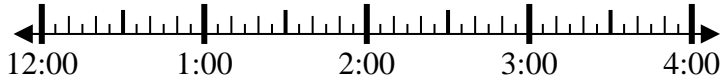
Solve each problem.

Answers

1) Start: _____

Elapsed: 1 hr & 35 mins

End: 1:50

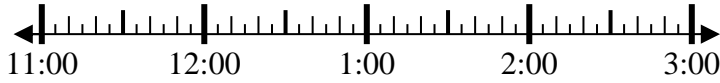


1. _____

2) Start: _____

Elapsed: 1 hr & 25 mins

End: 12:55

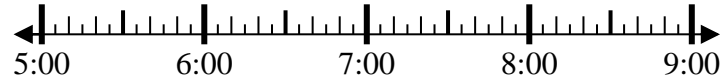


2. _____

3) Start: _____

Elapsed: 1 hr & 35 mins

End: 6:45

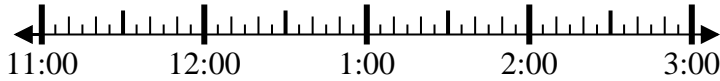


3. _____

4) Start: _____

Elapsed: 1 hr & 10 mins

End: 12:10

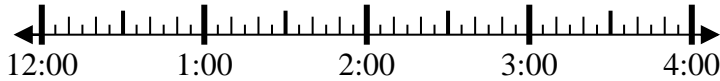


4. _____

5) Start: _____

Elapsed: 1 hr & 10 mins

End: 1:40

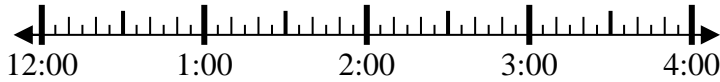


5. _____

6) Start: _____

Elapsed: 1 hr & 25 mins

End: 2:05

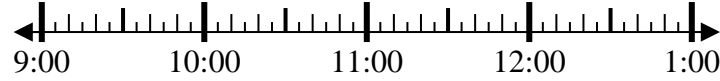


6. _____

7) Start: _____

Elapsed: 1 hr & 50 mins

End: 11:30

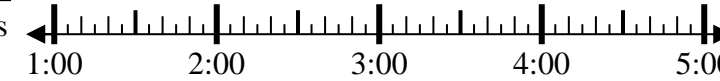


7. _____

8) Start: _____

Elapsed: 2 hrs & 45 mins

End: 4:20



8. _____

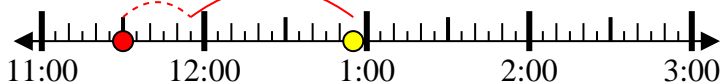


Solve each problem.

1) Start: 12:15
 Elapsed: 1 hr & 35 mins
 End: 1:50



2) Start: 11:30
 Elapsed: 1 hr & 25 mins
 End: 12:55



3) Start: 5:10
 Elapsed: 1 hr & 35 mins
 End: 6:45



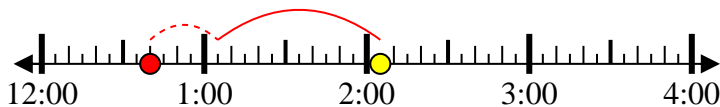
4) Start: 11:00
 Elapsed: 1 hr & 10 mins
 End: 12:10



5) Start: 12:30
 Elapsed: 1 hr & 10 mins
 End: 1:40



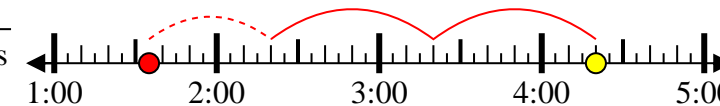
6) Start: 12:40
 Elapsed: 1 hr & 25 mins
 End: 2:05



7) Start: 9:40
 Elapsed: 1 hr & 50 mins
 End: 11:30



8) Start: 1:35
 Elapsed: 2 hrs & 45 mins
 End: 4:20



Answers

1. 12:15
2. 11:30
3. 5:10
4. 11:00
5. 12:30
6. 12:40
7. 9:40
8. 1:35



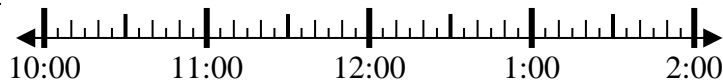
Solve each problem.

Answers

1) Start: _____

Elapsed: 2 hrs & 30 mins

End: 1:20



1. _____

2) Start: _____

Elapsed: 1 hr & 25 mins

End: 6:35



2. _____

3) Start: _____

Elapsed: 1 hr & 35 mins

End: 1:15

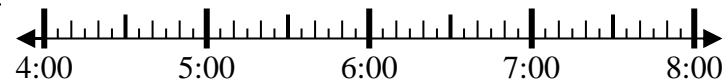


3. _____

4) Start: _____

Elapsed: 2 hrs & 15 mins

End: 6:35

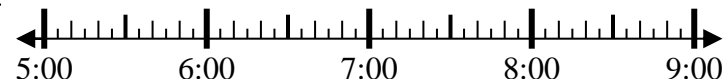


4. _____

5) Start: _____

Elapsed: 2 hrs & 25 mins

End: 7:40



5. _____

6) Start: _____

Elapsed: 2 hrs & 35 mins

End: 12:55



6. _____

7) Start: _____

Elapsed: 2 hrs & 50 mins

End: 3:35



7. _____

8) Start: _____

Elapsed: 1 hr & 30 mins

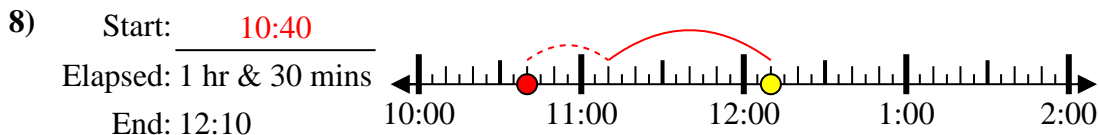
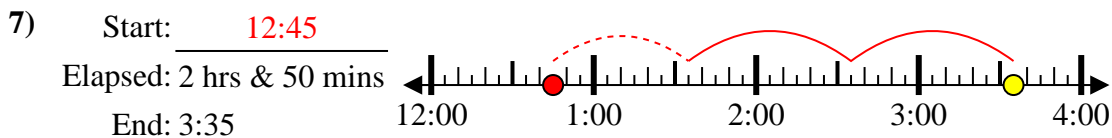
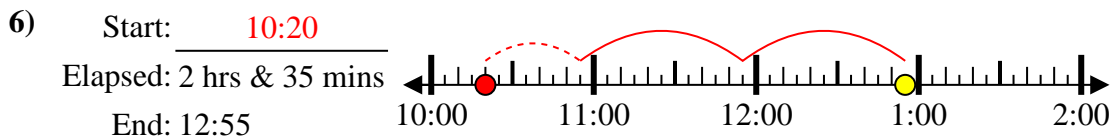
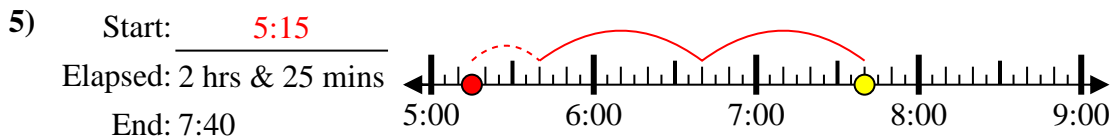
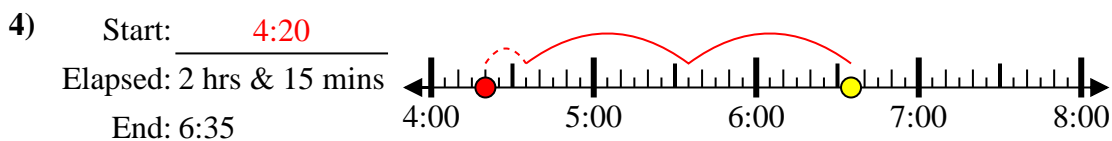
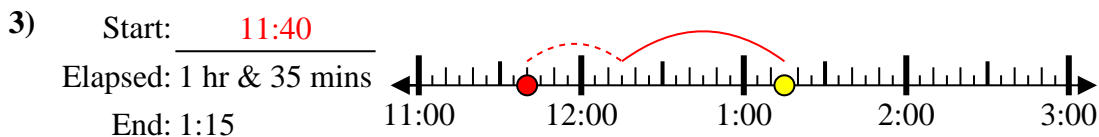
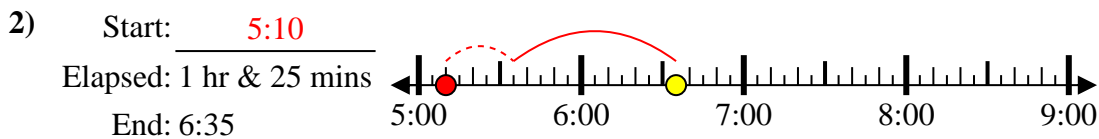
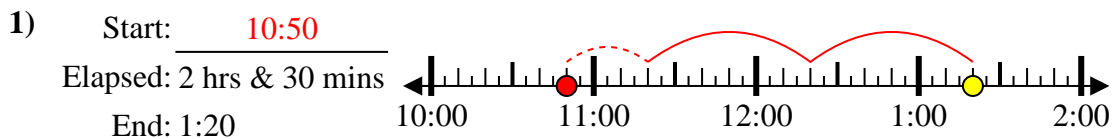
End: 12:10



8. _____



Solve each problem.



Answers

1. 10:50

2. 5:10

3. 11:40

4. 4:20

5. 5:15

6. 10:20

7. 12:45

8. 10:40



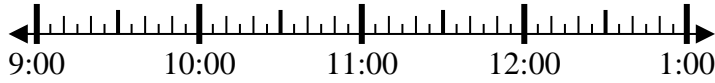
Solve each problem.

Answers

1) Start: _____

Elapsed: 1 hr & 25 mins

End: 10:45

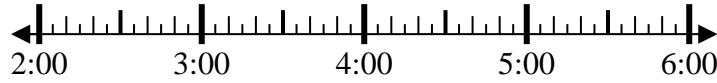


1. _____

2) Start: _____

Elapsed: 2 hrs & 55 mins

End: 4:55



2. _____

3) Start: _____

Elapsed: 2 hrs & 15 mins

End: 9:55



3. _____

4) Start: _____

Elapsed: 1 hr & 10 mins

End: 8:25



4. _____

5) Start: _____

Elapsed: 2 hrs & 25 mins

End: 1:40



5. _____

6) Start: _____

Elapsed: 1 hr & 25 mins

End: 6:55

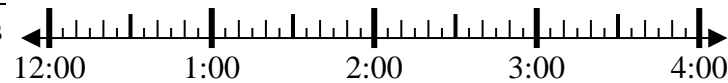


6. _____

7) Start: _____

Elapsed: 2 hrs & 40 mins

End: 2:40



7. _____

8) Start: _____

Elapsed: 1 hr & 20 mins

End: 1:35



8. _____

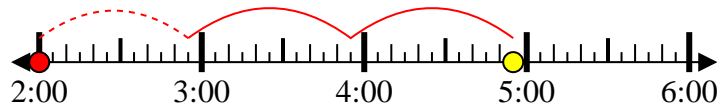


Solve each problem.

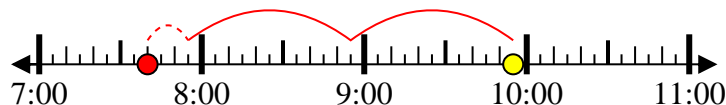
1) Start: 9:20
 Elapsed: 1 hr & 25 mins
 End: 10:45



2) Start: 2:00
 Elapsed: 2 hrs & 55 mins
 End: 4:55



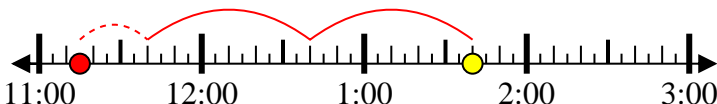
3) Start: 7:40
 Elapsed: 2 hrs & 15 mins
 End: 9:55



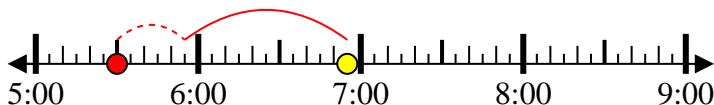
4) Start: 7:15
 Elapsed: 1 hr & 10 mins
 End: 8:25



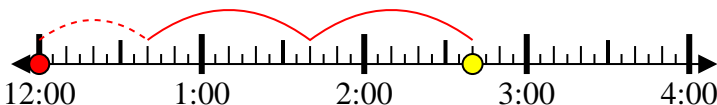
5) Start: 11:15
 Elapsed: 2 hrs & 25 mins
 End: 1:40



6) Start: 5:30
 Elapsed: 1 hr & 25 mins
 End: 6:55



7) Start: 12:00
 Elapsed: 2 hrs & 40 mins
 End: 2:40



8) Start: 12:15
 Elapsed: 1 hr & 20 mins
 End: 1:35



Answers

1. 9:20

2. 2:00

3. 7:40

4. 7:15

5. 11:15

6. 5:30

7. 12:00

8. 12:15