



Solve each problem.

Answers

1) Start: _____
 Elapsed: 2 hrs & 30 mins
 End: 1:20

1. _____

2) Start: _____
 Elapsed: 1 hr & 25 mins
 End: 6:35

2. _____

3) Start: _____
 Elapsed: 1 hr & 35 mins
 End: 1:15

3. _____

4) Start: _____
 Elapsed: 2 hrs & 15 mins
 End: 6:35

4. _____

5) Start: _____
 Elapsed: 2 hrs & 25 mins
 End: 7:40

5. _____

6) Start: _____
 Elapsed: 2 hrs & 35 mins
 End: 12:55

6. _____

7) Start: _____
 Elapsed: 2 hrs & 50 mins
 End: 3:35

7. _____

8) Start: _____
 Elapsed: 1 hr & 30 mins
 End: 12:10

8. _____



Solve each problem.

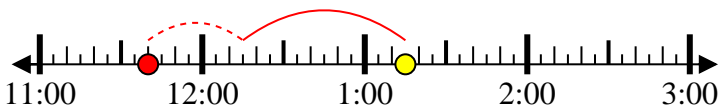
1) Start: 10:50
 Elapsed: 2 hrs & 30 mins
 End: 1:20



2) Start: 5:10
 Elapsed: 1 hr & 25 mins
 End: 6:35



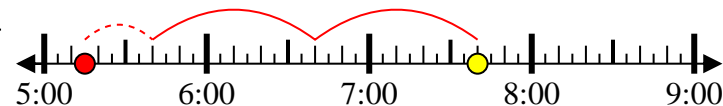
3) Start: 11:40
 Elapsed: 1 hr & 35 mins
 End: 1:15



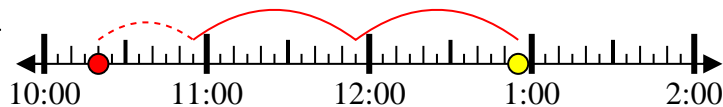
4) Start: 4:20
 Elapsed: 2 hrs & 15 mins
 End: 6:35



5) Start: 5:15
 Elapsed: 2 hrs & 25 mins
 End: 7:40



6) Start: 10:20
 Elapsed: 2 hrs & 35 mins
 End: 12:55



7) Start: 12:45
 Elapsed: 2 hrs & 50 mins
 End: 3:35



8) Start: 10:40
 Elapsed: 1 hr & 30 mins
 End: 12:10



Answers

1. 10:50

2. 5:10

3. 11:40

4. 4:20

5. 5:15

6. 10:20

7. 12:45

8. 10:40