



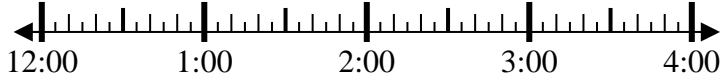
Solve each problem.

Answers

1) Start: \_\_\_\_\_

Elapsed: 1 hr & 25 mins

End: 1:35

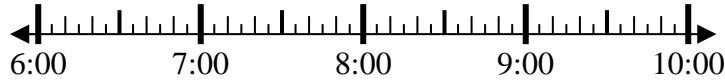


1. \_\_\_\_\_

2) Start: \_\_\_\_\_

Elapsed: 2 hrs & 10 mins

End: 8:50

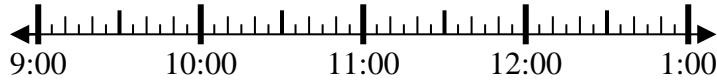


2. \_\_\_\_\_

3) Start: \_\_\_\_\_

Elapsed: 2 hrs & 50 mins

End: 11:55

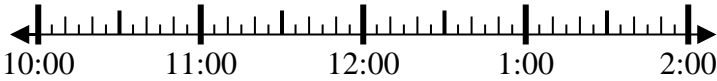


3. \_\_\_\_\_

4) Start: \_\_\_\_\_

Elapsed: 2 hrs & 40 mins

End: 1:25



4. \_\_\_\_\_

5) Start: \_\_\_\_\_

Elapsed: 1 hr & 30 mins

End: 7:05

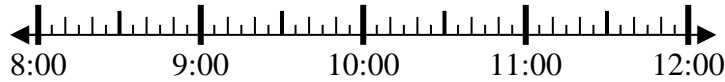


5. \_\_\_\_\_

6) Start: \_\_\_\_\_

Elapsed: 2 hrs & 25 mins

End: 10:40

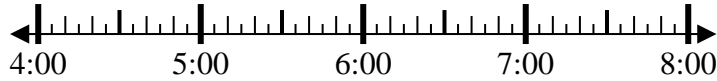


6. \_\_\_\_\_

7) Start: \_\_\_\_\_

Elapsed: 2 hrs & 55 mins

End: 7:05

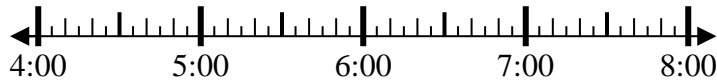


7. \_\_\_\_\_

8) Start: \_\_\_\_\_

Elapsed: 2 hrs & 20 mins

End: 6:20



8. \_\_\_\_\_

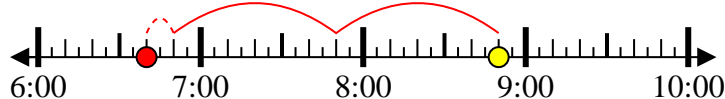


Solve each problem.

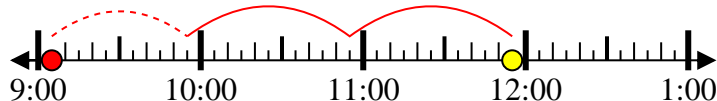
1) Start: 12:10  
 Elapsed: 1 hr & 25 mins  
 End: 1:35



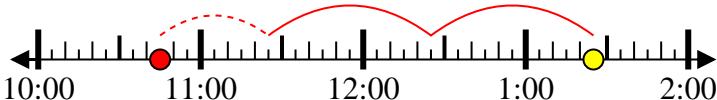
2) Start: 6:40  
 Elapsed: 2 hrs & 10 mins  
 End: 8:50



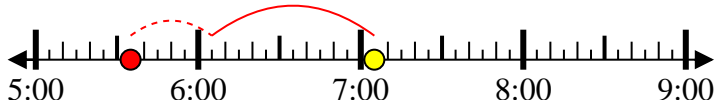
3) Start: 9:05  
 Elapsed: 2 hrs & 50 mins  
 End: 11:55



4) Start: 10:45  
 Elapsed: 2 hrs & 40 mins  
 End: 1:25



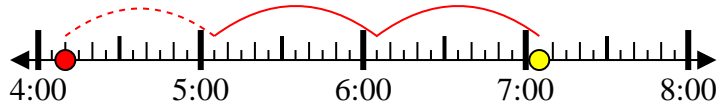
5) Start: 5:35  
 Elapsed: 1 hr & 30 mins  
 End: 7:05



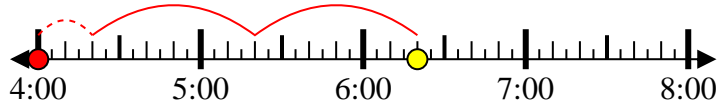
6) Start: 8:15  
 Elapsed: 2 hrs & 25 mins  
 End: 10:40



7) Start: 4:10  
 Elapsed: 2 hrs & 55 mins  
 End: 7:05



8) Start: 4:00  
 Elapsed: 2 hrs & 20 mins  
 End: 6:20



Answers

1. 12:10

2. 6:40

3. 9:05

4. 10:45

5. 5:35

6. 8:15

7. 4:10

8. 4:00