



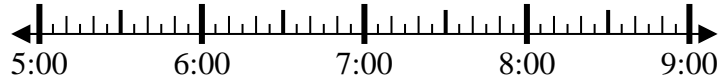
Solve each problem.

Answers

1) Start: 5:50

Elapsed: 1 hr & 30 mins

End: _____

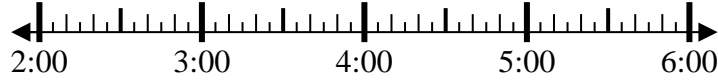


1. _____

2) Start: 2:10

Elapsed: 1 hr & 45 mins

End: _____

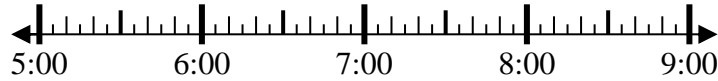


2. _____

3) Start: 5:15

Elapsed: 1 hr & 50 mins

End: _____



3. _____

4) Start: 8:10

Elapsed: 1 hr & 35 mins

End: _____

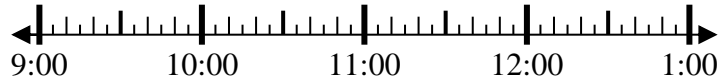


4. _____

5) Start: 9:30

Elapsed: 2 hrs & 20 mins

End: _____

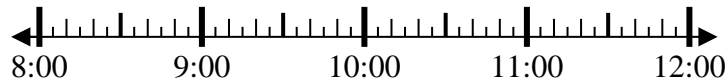


5. _____

6) Start: 8:20

Elapsed: 2 hrs & 10 mins

End: _____

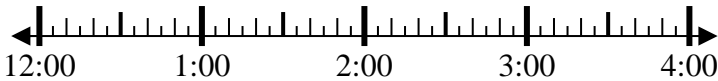


6. _____

7) Start: 12:25

Elapsed: 1 hr & 25 mins

End: _____

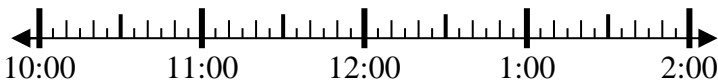


7. _____

8) Start: 10:10

Elapsed: 1 hr & 45 mins

End: _____



8. _____

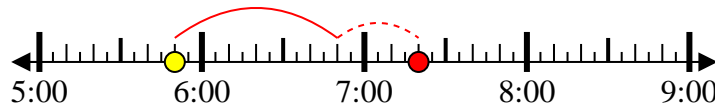


Solve each problem.

1) Start: 5:50

Elapsed: 1 hr & 30 mins

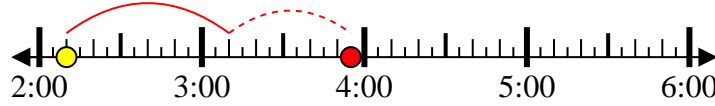
End: 7:20



2) Start: 2:10

Elapsed: 1 hr & 45 mins

End: 3:55



3) Start: 5:15

Elapsed: 1 hr & 50 mins

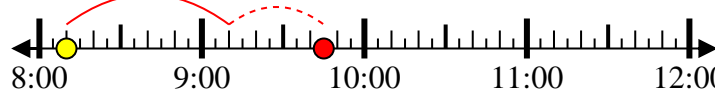
End: 7:05



4) Start: 8:10

Elapsed: 1 hr & 35 mins

End: 9:45



5) Start: 9:30

Elapsed: 2 hrs & 20 mins

End: 11:50



6) Start: 8:20

Elapsed: 2 hrs & 10 mins

End: 10:30



7) Start: 12:25

Elapsed: 1 hr & 25 mins

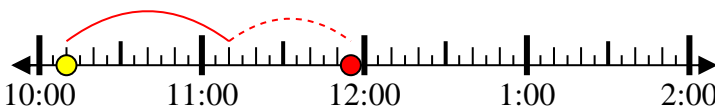
End: 1:50



8) Start: 10:10

Elapsed: 1 hr & 45 mins

End: 11:55



Answers

1. 7:20

2. 3:55

3. 7:05

4. 9:45

5. 11:50

6. 10:30

7. 1:50

8. 11:55