



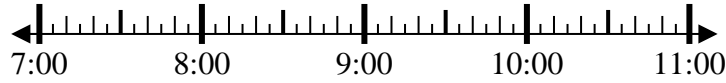
Solve each problem.

Answers

1) Start: 7:05

Elapsed: 2 hrs & 20 mins

End: _____

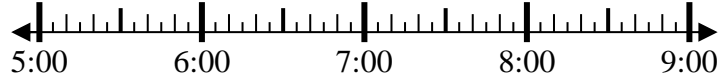


1. _____

2) Start: 5:25

Elapsed: 2 hrs & 20 mins

End: _____

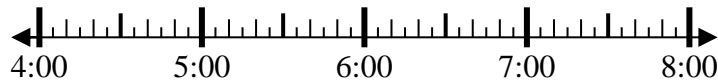


2. _____

3) Start: 4:15

Elapsed: 1 hr & 35 mins

End: _____



3. _____

4) Start: 12:05

Elapsed: 2 hrs & 40 mins

End: _____

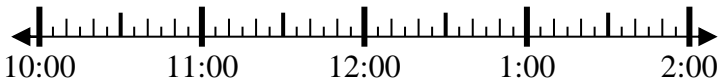


4. _____

5) Start: 10:05

Elapsed: 1 hr & 45 mins

End: _____

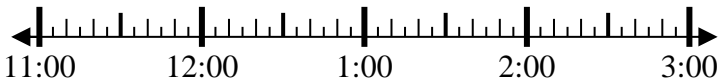


5. _____

6) Start: 11:45

Elapsed: 2 hrs & 15 mins

End: _____

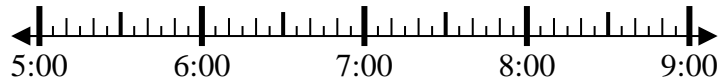


6. _____

7) Start: 5:25

Elapsed: 1 hr & 40 mins

End: _____

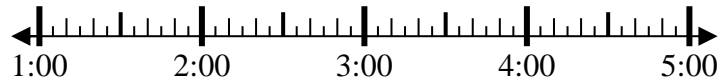


7. _____

8) Start: 1:25

Elapsed: 1 hr & 15 mins

End: _____



8. _____

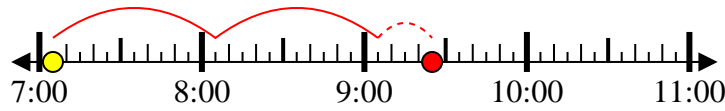


Solve each problem.

1) Start: 7:05

Elapsed: 2 hrs & 20 mins

End: 9:25



2) Start: 5:25

Elapsed: 2 hrs & 20 mins

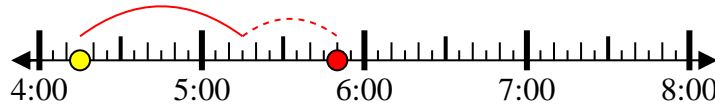
End: 7:45



3) Start: 4:15

Elapsed: 1 hr & 35 mins

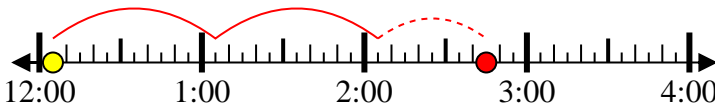
End: 5:50



4) Start: 12:05

Elapsed: 2 hrs & 40 mins

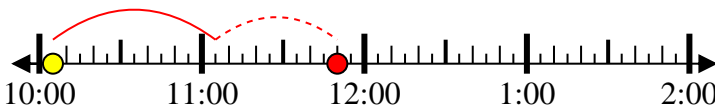
End: 2:45



5) Start: 10:05

Elapsed: 1 hr & 45 mins

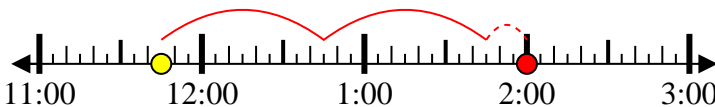
End: 11:50



6) Start: 11:45

Elapsed: 2 hrs & 15 mins

End: 2:00



7) Start: 5:25

Elapsed: 1 hr & 40 mins

End: 7:05



8) Start: 1:25

Elapsed: 1 hr & 15 mins

End: 2:40



Answers

1. 9:25

2. 7:45

3. 5:50

4. 2:45

5. 11:50

6. 2:00

7. 7:05

8. 2:40