



Solve each problem.

Answers

1) Start: 7:45

Elapsed: _____

End: 9:00

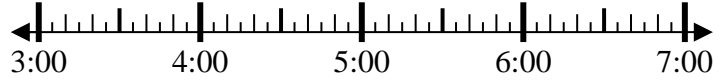


1. _____

2) Start: 3:25

Elapsed: _____

End: 4:45

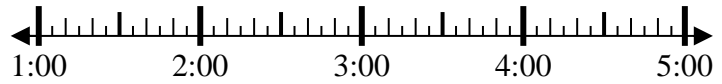


2. _____

3) Start: 1:05

Elapsed: _____

End: 3:20



3. _____

4) Start: 4:40

Elapsed: _____

End: 6:50

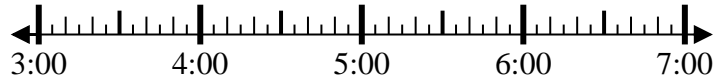


4. _____

5) Start: 3:20

Elapsed: _____

End: 5:55

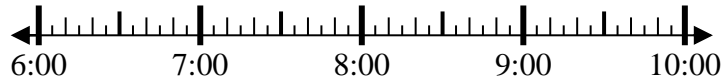


5. _____

6) Start: 6:25

Elapsed: _____

End: 8:35

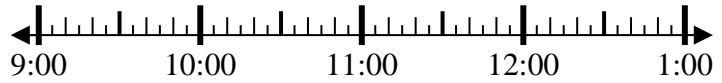


6. _____

7) Start: 9:00

Elapsed: _____

End: 11:45



7. _____

8) Start: 5:05

Elapsed: _____

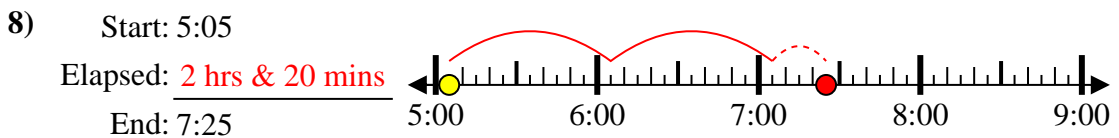
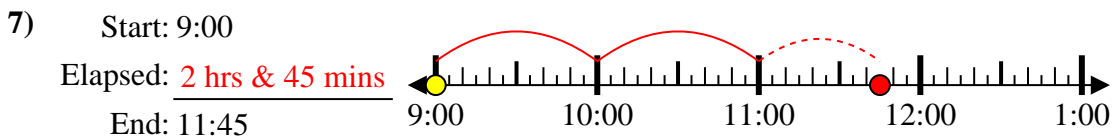
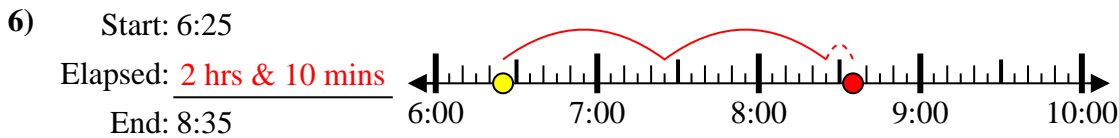
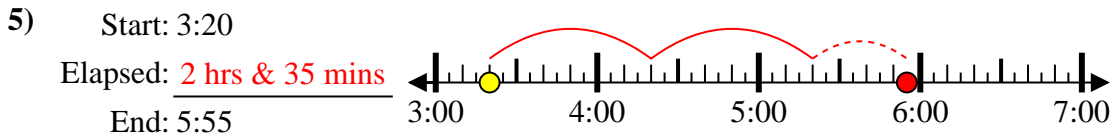
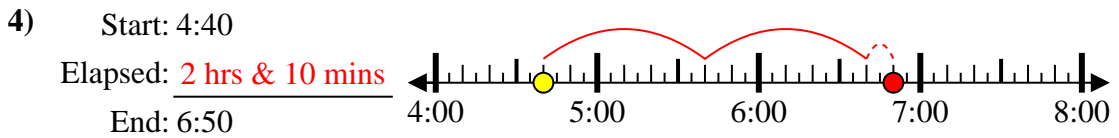
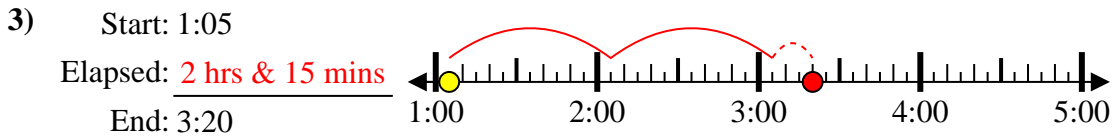
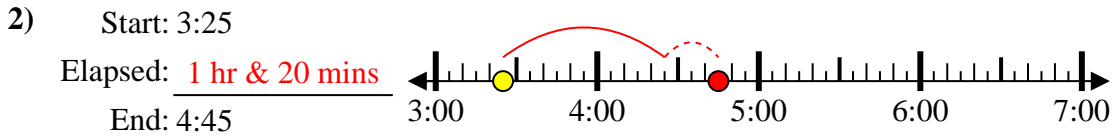
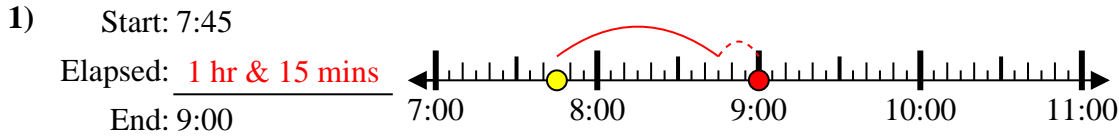
End: 7:25



8. _____



Solve each problem.



Answers

1. 1 hr & 15 mins

2. 1 hr & 20 mins

3. 2 hrs & 15 mins

4. 2 hrs & 10 mins

5. 2 hrs & 35 mins

6. 2 hrs & 10 mins

7. 2 hrs & 45 mins

8. 2 hrs & 20 mins