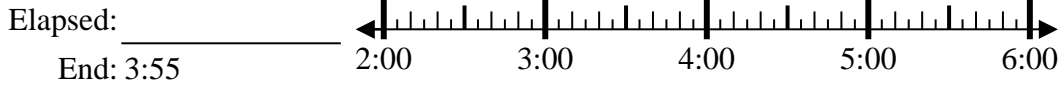




Solve each problem.

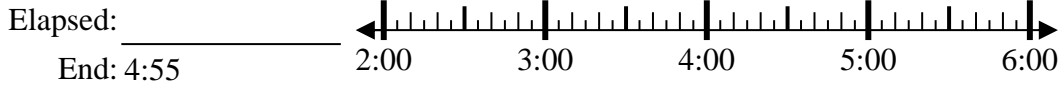
Answers

1) Start: 2:15



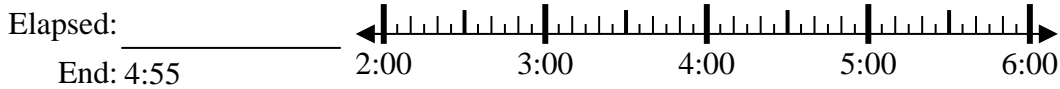
1. _____

2) Start: 2:10



2. _____

3) Start: 2:45



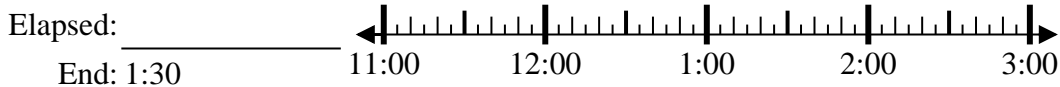
3. _____

4) Start: 2:20



4. _____

5) Start: 11:05



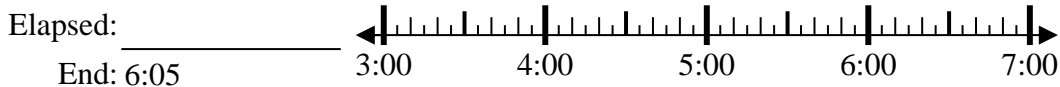
5. _____

6) Start: 11:05



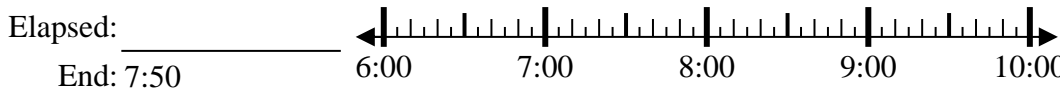
6. _____

7) Start: 3:45



7. _____

8) Start: 6:20



8. _____

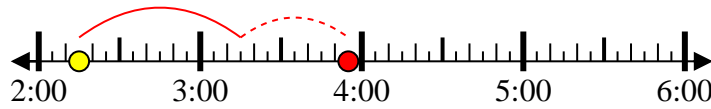


Solve each problem.

1) Start: 2:15

Elapsed: 1 hr & 40 mins

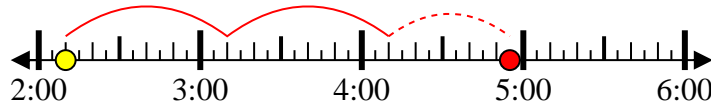
End: 3:55



2) Start: 2:10

Elapsed: 2 hrs & 45 mins

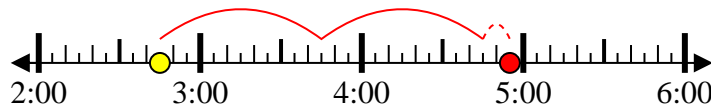
End: 4:55



3) Start: 2:45

Elapsed: 2 hrs & 10 mins

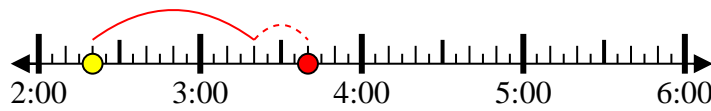
End: 4:55



4) Start: 2:20

Elapsed: 1 hr & 20 mins

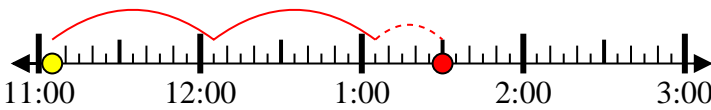
End: 3:40



5) Start: 11:05

Elapsed: 2 hrs & 25 mins

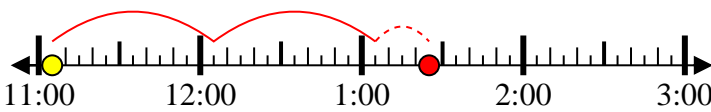
End: 1:30



6) Start: 11:05

Elapsed: 2 hrs & 20 mins

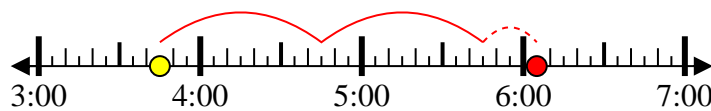
End: 1:25



7) Start: 3:45

Elapsed: 2 hrs & 20 mins

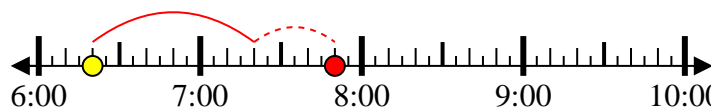
End: 6:05



8) Start: 6:20

Elapsed: 1 hr & 30 mins

End: 7:50



Answers

1. 1 hr & 40 mins

2. 2 hrs & 45 mins

3. 2 hrs & 10 mins

4. 1 hr & 20 mins

5. 2 hrs & 25 mins

6. 2 hrs & 20 mins

7. 2 hrs & 20 mins

8. 1 hr & 30 mins



Solve each problem.

Answers

1) Start: 6:45

Elapsed: _____

End: 7:55

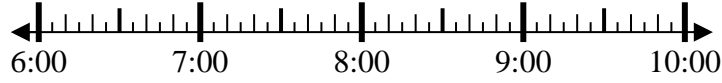


1. _____

2) Start: 6:25

Elapsed: _____

End: 9:05

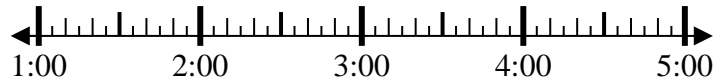


2. _____

3) Start: 1:10

Elapsed: _____

End: 3:00



3. _____

4) Start: 11:15

Elapsed: _____

End: 1:00



4. _____

5) Start: 3:25

Elapsed: _____

End: 5:35

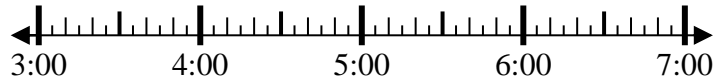


5. _____

6) Start: 3:20

Elapsed: _____

End: 5:55

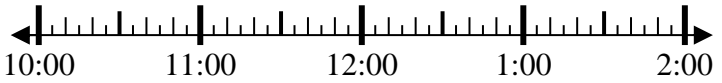


6. _____

7) Start: 10:35

Elapsed: _____

End: 12:25

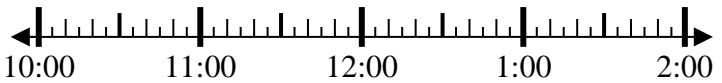


7. _____

8) Start: 10:00

Elapsed: _____

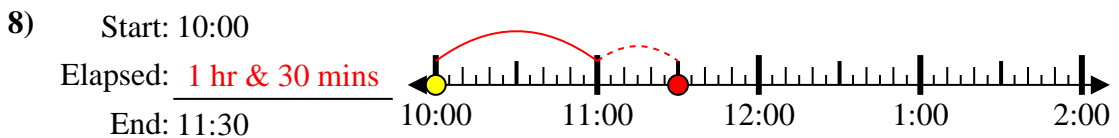
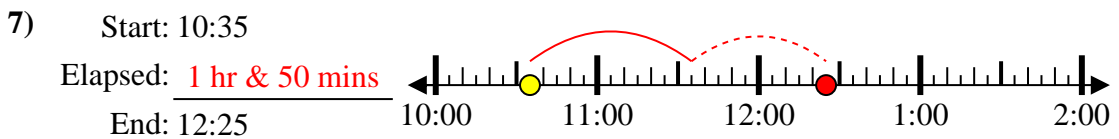
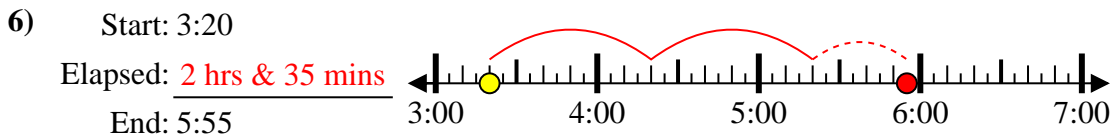
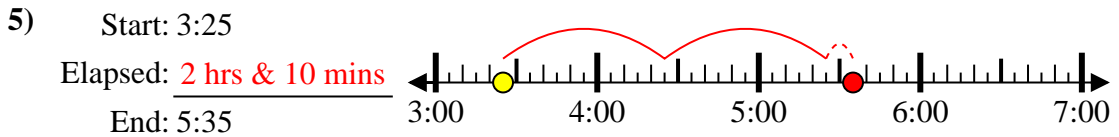
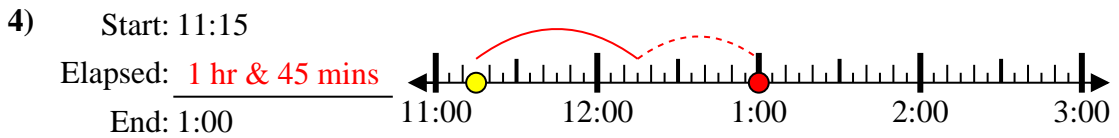
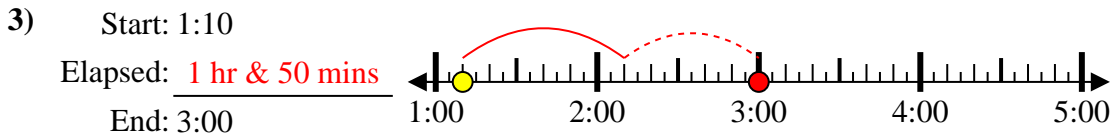
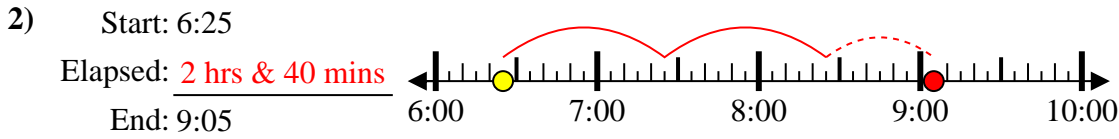
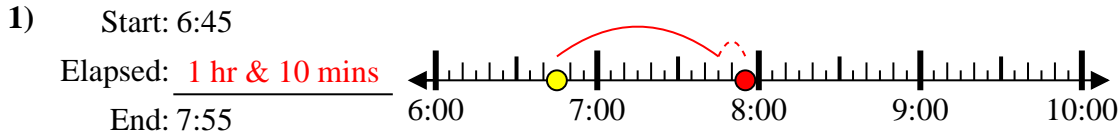
End: 11:30



8. _____



Solve each problem.



Answers

1. 1 hr & 10 mins

2. 2 hrs & 40 mins

3. 1 hr & 50 mins

4. 1 hr & 45 mins

5. 2 hrs & 10 mins

6. 2 hrs & 35 mins

7. 1 hr & 50 mins

8. 1 hr & 30 mins



Solve each problem.

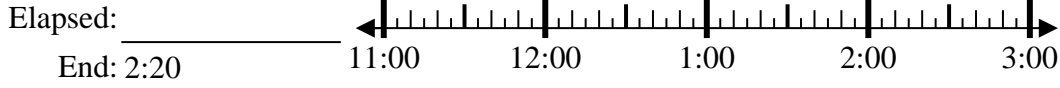
Answers

1) Start: 2:00



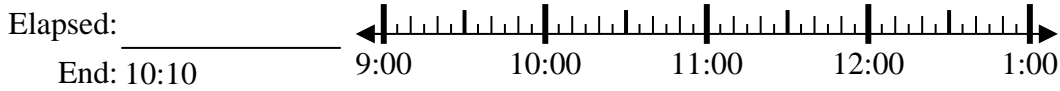
1. _____

2) Start: 11:35



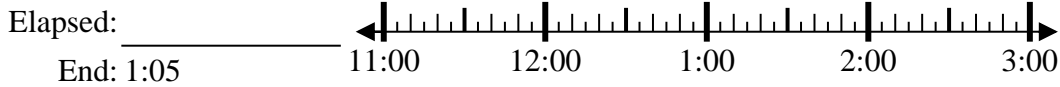
2. _____

3) Start: 9:00



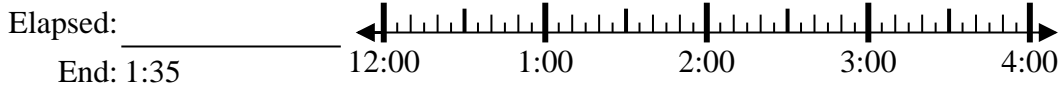
3. _____

4) Start: 11:45



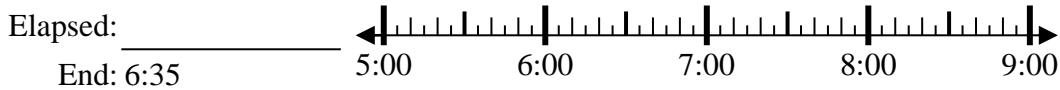
4. _____

5) Start: 12:20



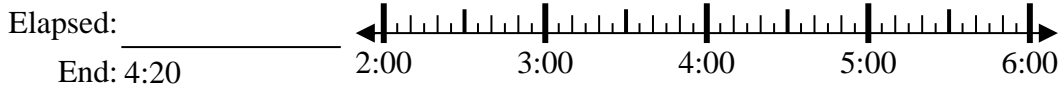
5. _____

6) Start: 5:25



6. _____

7) Start: 2:35



7. _____

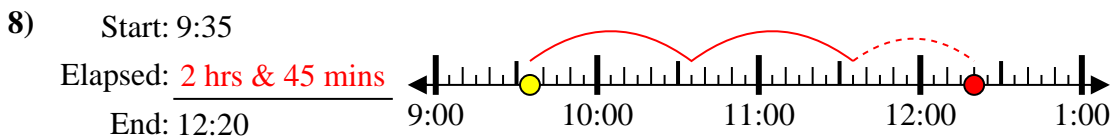
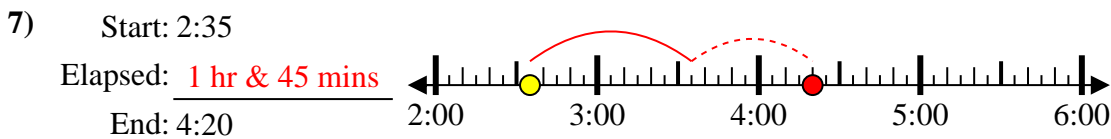
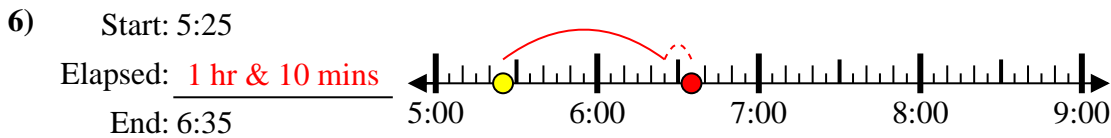
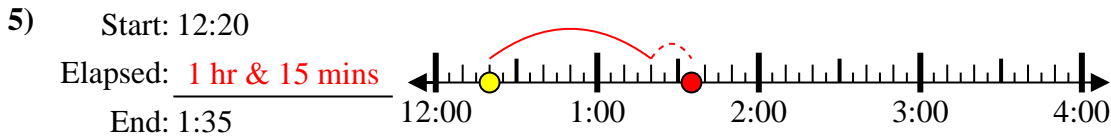
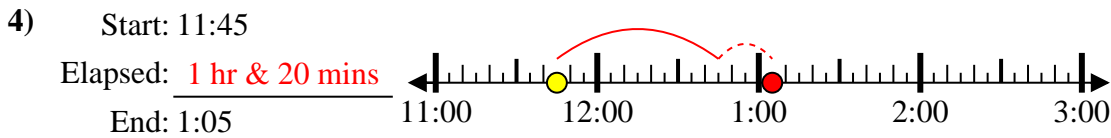
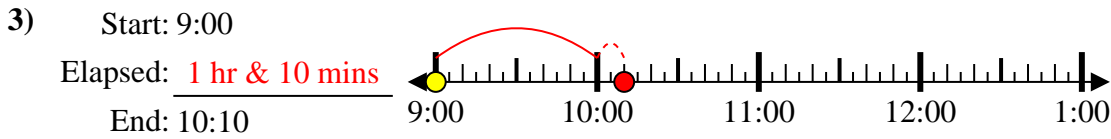
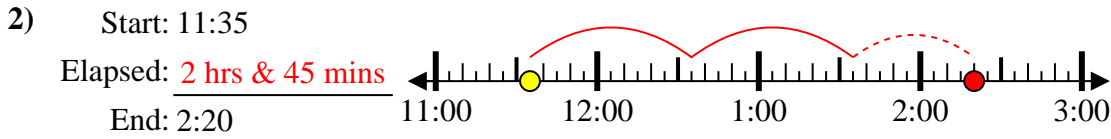
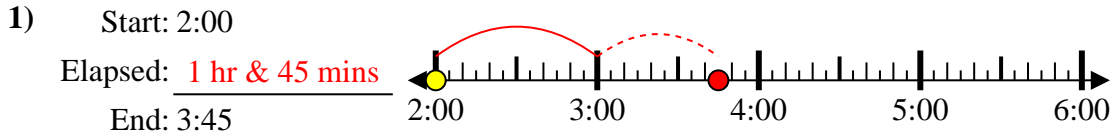
8) Start: 9:35



8. _____



Solve each problem.



Answers

1. 1 hr & 45 mins

2. 2 hrs & 45 mins

3. 1 hr & 10 mins

4. 1 hr & 20 mins

5. 1 hr & 15 mins

6. 1 hr & 10 mins

7. 1 hr & 45 mins

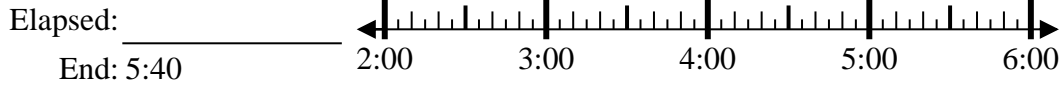
8. 2 hrs & 45 mins



Solve each problem.

Answers

1) Start: 2:50



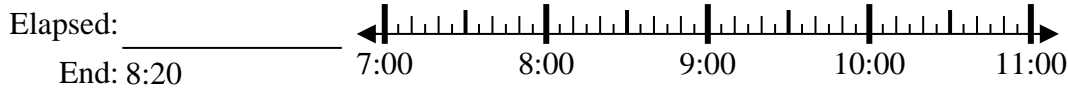
1. _____

2) Start: 9:10



2. _____

3) Start: 7:05



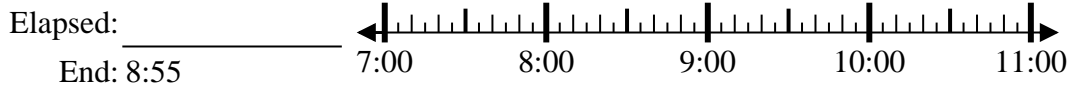
3. _____

4) Start: 3:00



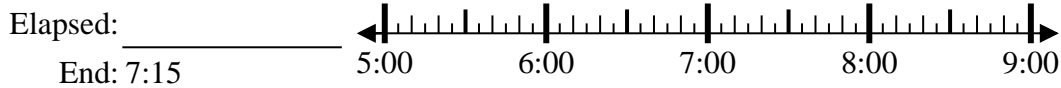
4. _____

5) Start: 7:15



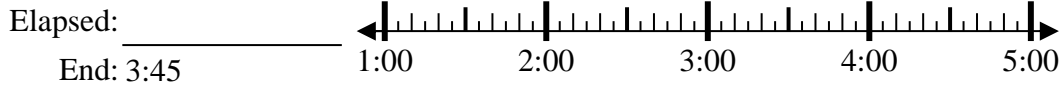
5. _____

6) Start: 5:00



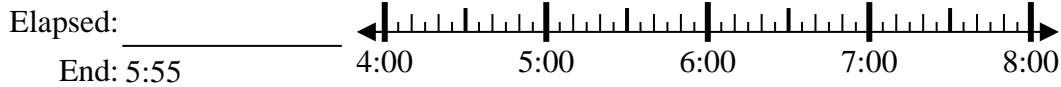
6. _____

7) Start: 1:00



7. _____

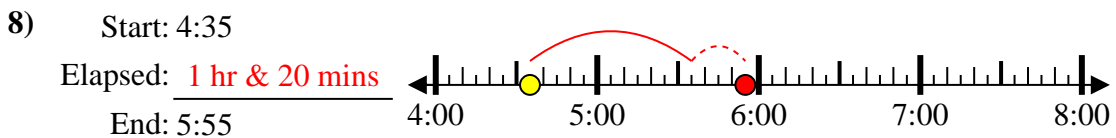
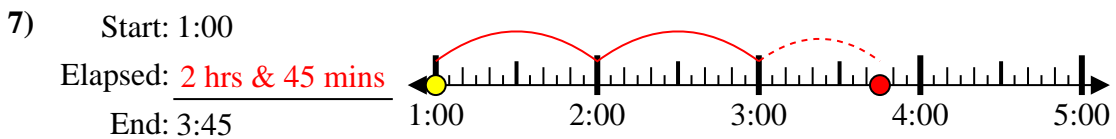
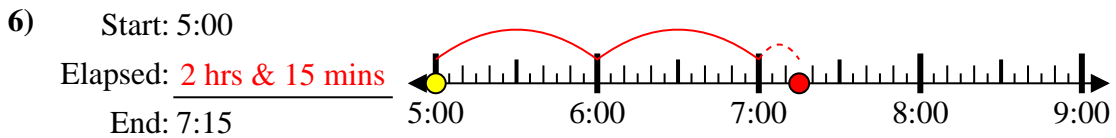
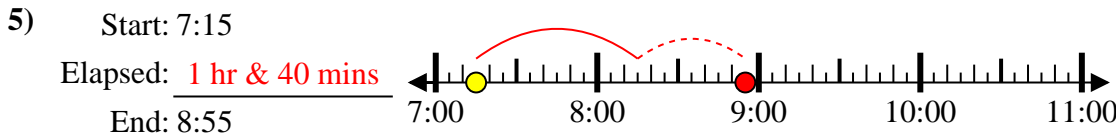
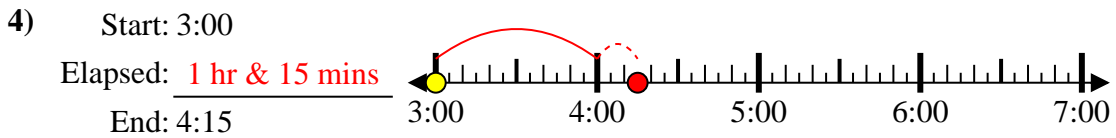
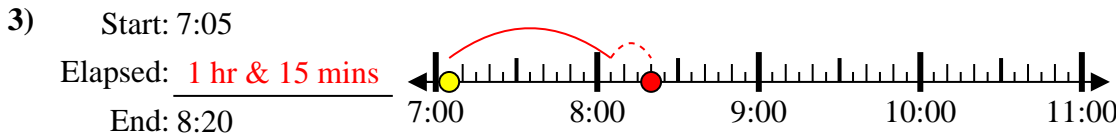
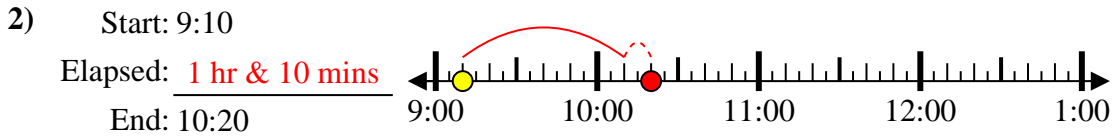
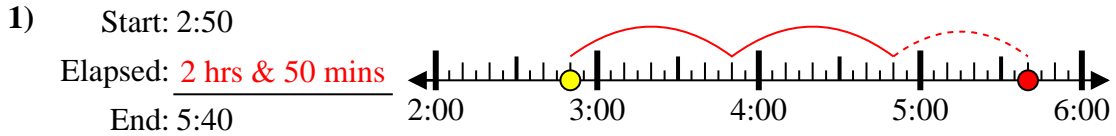
8) Start: 4:35



8. _____



Solve each problem.



Answers

1. 2 hrs & 50 mins

2. 1 hr & 10 mins

3. 1 hr & 15 mins

4. 1 hr & 15 mins

5. 1 hr & 40 mins

6. 2 hrs & 15 mins

7. 2 hrs & 45 mins

8. 1 hr & 20 mins



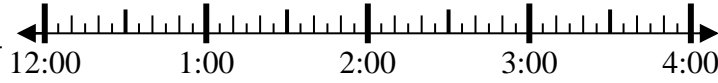
Solve each problem.

Answers

1) Start: 12:10

Elapsed: _____

End: 1:35

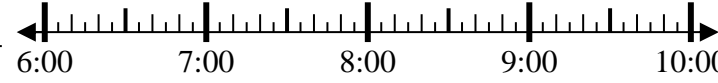


1. _____

2) Start: 6:40

Elapsed: _____

End: 8:50

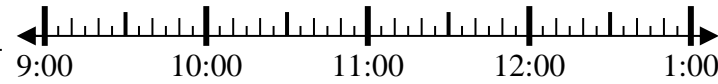


2. _____

3) Start: 9:05

Elapsed: _____

End: 11:55



3. _____

4) Start: 10:45

Elapsed: _____

End: 1:25

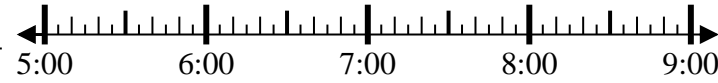


4. _____

5) Start: 5:35

Elapsed: _____

End: 7:05

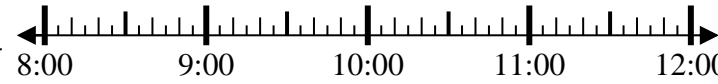


5. _____

6) Start: 8:15

Elapsed: _____

End: 10:40

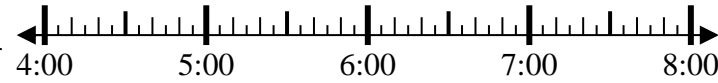


6. _____

7) Start: 4:10

Elapsed: _____

End: 7:05



7. _____

8) Start: 4:00

Elapsed: _____

End: 6:20



8. _____



Solve each problem.

1) Start: 12:10
 Elapsed: 1 hr & 25 mins
 End: 1:35

2) Start: 6:40
 Elapsed: 2 hrs & 10 mins
 End: 8:50

3) Start: 9:05
 Elapsed: 2 hrs & 50 mins
 End: 11:55

4) Start: 10:45
 Elapsed: 2 hrs & 40 mins
 End: 1:25

5) Start: 5:35
 Elapsed: 1 hr & 30 mins
 End: 7:05

6) Start: 8:15
 Elapsed: 2 hrs & 25 mins
 End: 10:40

7) Start: 4:10
 Elapsed: 2 hrs & 55 mins
 End: 7:05

8) Start: 4:00
 Elapsed: 2 hrs & 20 mins
 End: 6:20

Answers

1. 1 hr & 25 mins
2. 2 hrs & 10 mins
3. 2 hrs & 50 mins
4. 2 hrs & 40 mins
5. 1 hr & 30 mins
6. 2 hrs & 25 mins
7. 2 hrs & 55 mins
8. 2 hrs & 20 mins



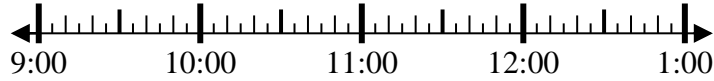
Solve each problem.

Answers

1) Start: 9:35

Elapsed: _____

End: 12:05



1. _____

2) Start: 12:50

Elapsed: _____

End: 2:35

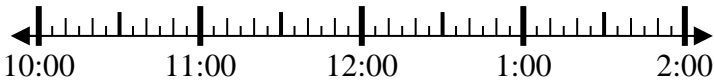


2. _____

3) Start: 10:15

Elapsed: _____

End: 11:40

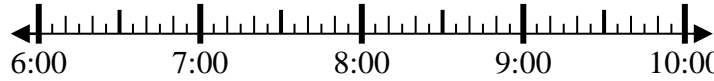


3. _____

4) Start: 6:25

Elapsed: _____

End: 8:10

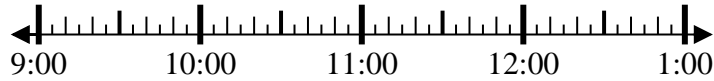


4. _____

5) Start: 9:10

Elapsed: _____

End: 10:25

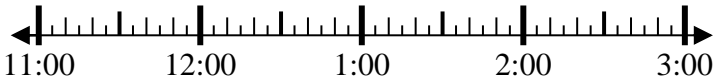


5. _____

6) Start: 11:45

Elapsed: _____

End: 2:00



6. _____

7) Start: 12:20

Elapsed: _____

End: 2:00

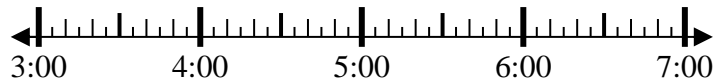


7. _____

8) Start: 3:35

Elapsed: _____

End: 5:15



8. _____

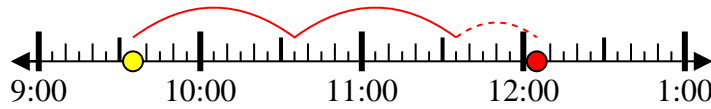


Solve each problem.

1) Start: 9:35

Elapsed: 2 hrs & 30 mins

End: 12:05

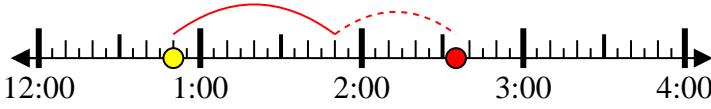


1. 2 hrs & 30 mins

2) Start: 12:50

Elapsed: 1 hr & 45 mins

End: 2:35



2. 1 hr & 45 mins

3) Start: 10:15

Elapsed: 1 hr & 25 mins

End: 11:40

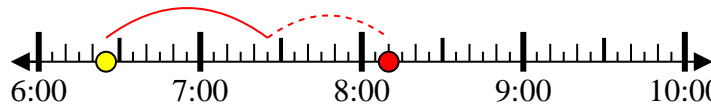


3. 1 hr & 25 mins

4) Start: 6:25

Elapsed: 1 hr & 45 mins

End: 8:10



4. 1 hr & 45 mins

5) Start: 9:10

Elapsed: 1 hr & 15 mins

End: 10:25

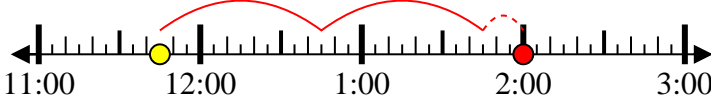


5. 1 hr & 15 mins

6) Start: 11:45

Elapsed: 2 hrs & 15 mins

End: 2:00

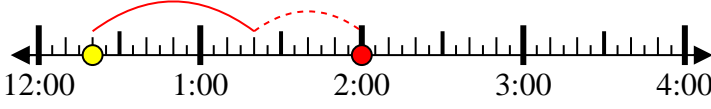


6. 2 hrs & 15 mins

7) Start: 12:20

Elapsed: 1 hr & 40 mins

End: 2:00



7. 1 hr & 40 mins

8) Start: 3:35

Elapsed: 1 hr & 40 mins

End: 5:15



8. 1 hr & 40 mins

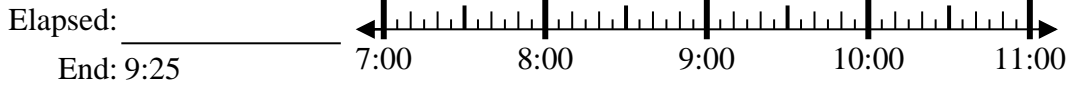
Answers



Solve each problem.

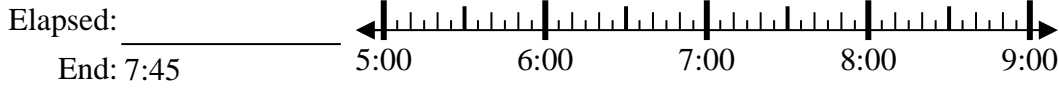
Answers

1) Start: 7:05



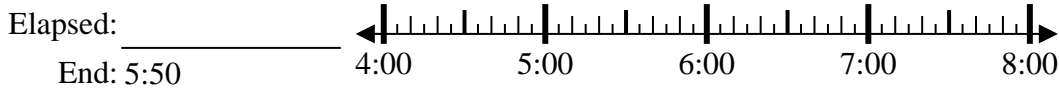
1. _____

2) Start: 5:25



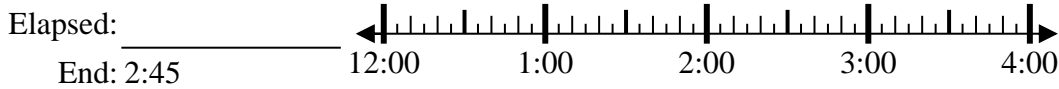
2. _____

3) Start: 4:15



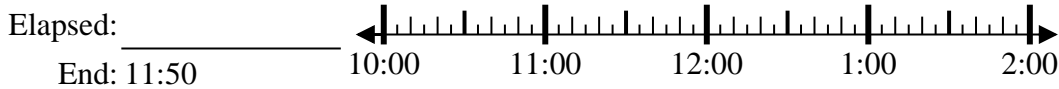
3. _____

4) Start: 12:05



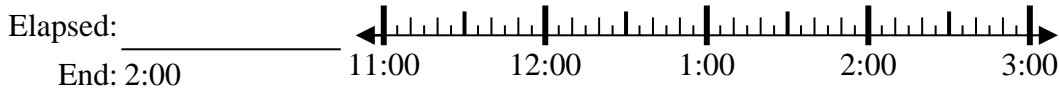
4. _____

5) Start: 10:05



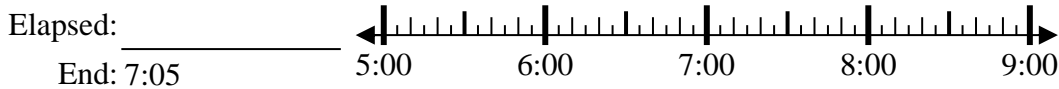
5. _____

6) Start: 11:45



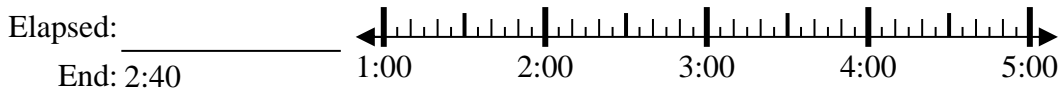
6. _____

7) Start: 5:25



7. _____

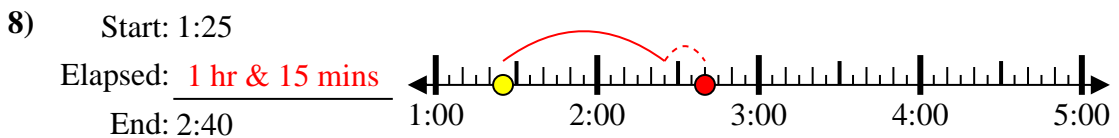
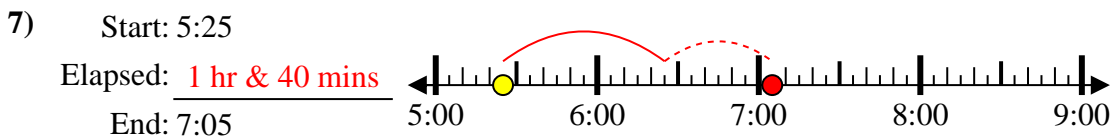
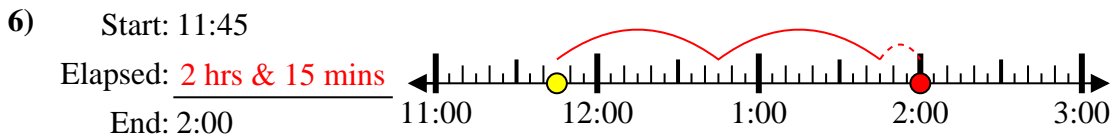
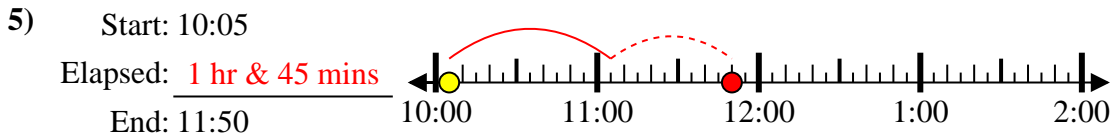
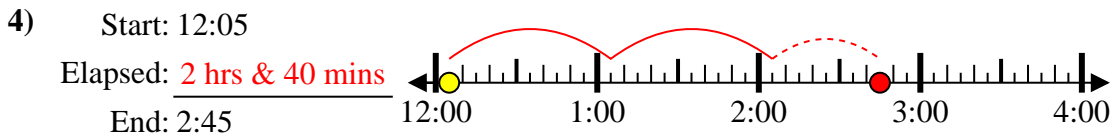
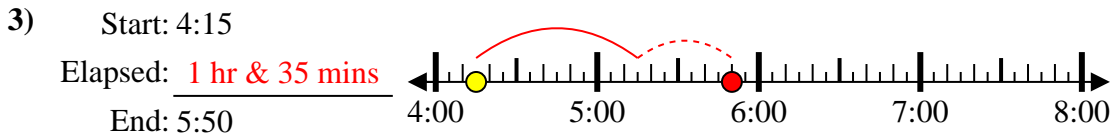
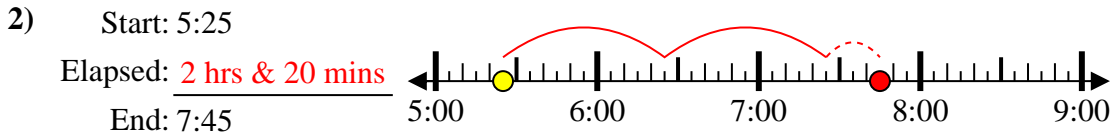
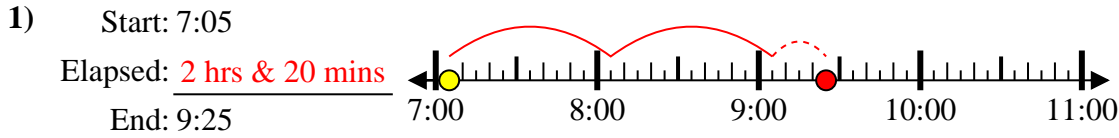
8) Start: 1:25



8. _____



Solve each problem.



Answers

1. 2 hrs & 20 mins

2. 2 hrs & 20 mins

3. 1 hr & 35 mins

4. 2 hrs & 40 mins

5. 1 hr & 45 mins

6. 2 hrs & 15 mins

7. 1 hr & 40 mins

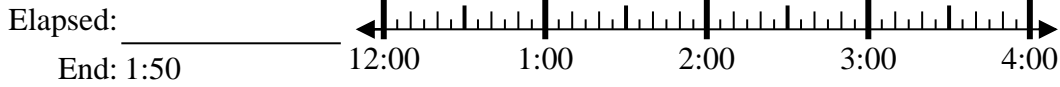
8. 1 hr & 15 mins



Solve each problem.

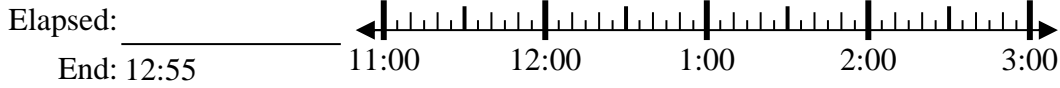
Answers

1) Start: 12:15



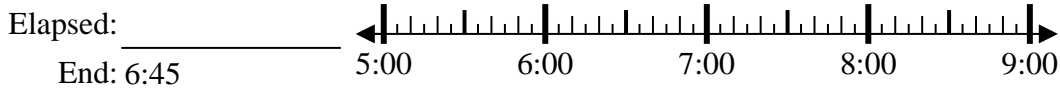
1. _____

2) Start: 11:30



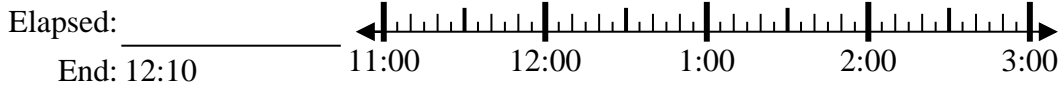
2. _____

3) Start: 5:10



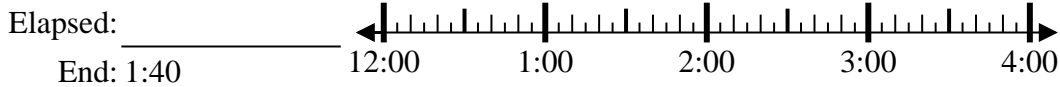
3. _____

4) Start: 11:00



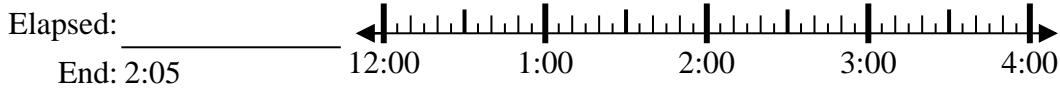
4. _____

5) Start: 12:30



5. _____

6) Start: 12:40



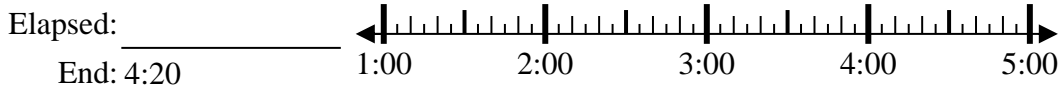
6. _____

7) Start: 9:40



7. _____

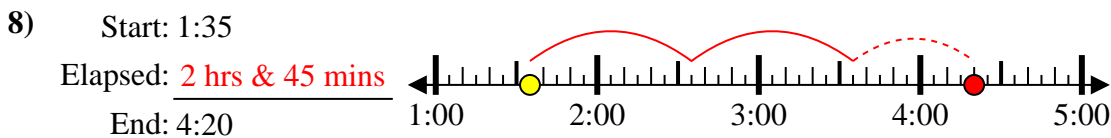
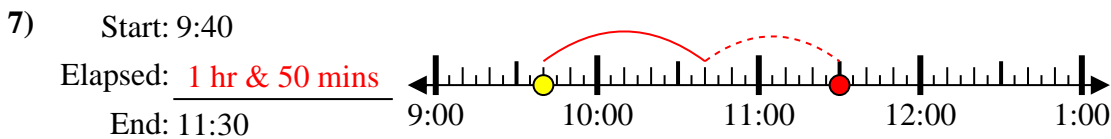
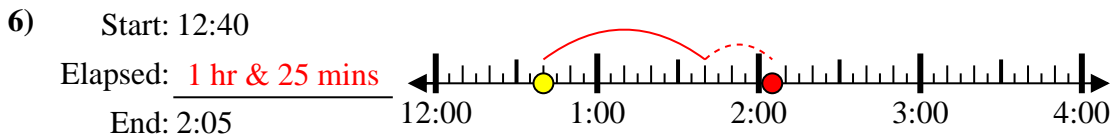
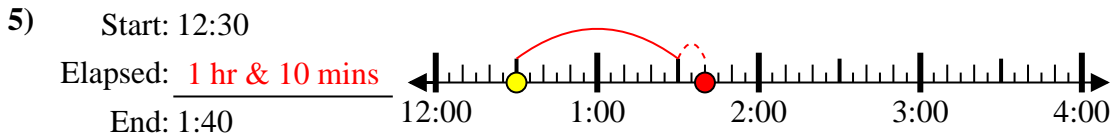
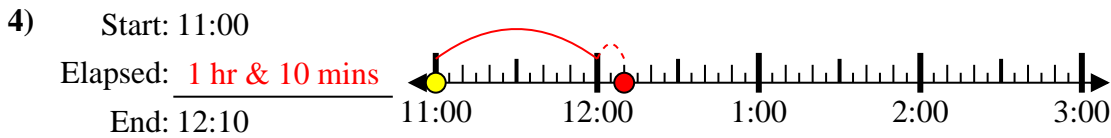
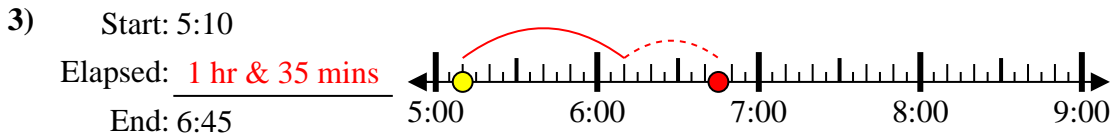
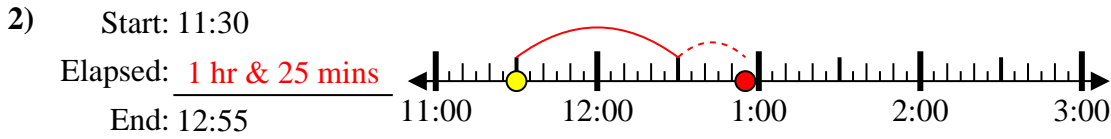
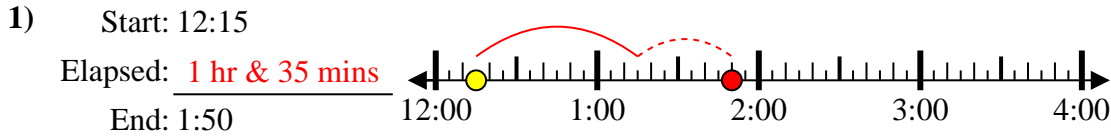
8) Start: 1:35



8. _____



Solve each problem.



Answers

1. 1 hr & 35 mins

2. 1 hr & 25 mins

3. 1 hr & 35 mins

4. 1 hr & 10 mins

5. 1 hr & 10 mins

6. 1 hr & 25 mins

7. 1 hr & 50 mins

8. 2 hrs & 45 mins



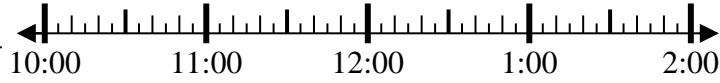
Solve each problem.

Answers

1) Start: 10:50

Elapsed: _____

End: 1:20

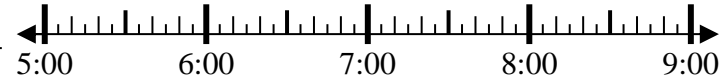


1. _____

2) Start: 5:10

Elapsed: _____

End: 6:35

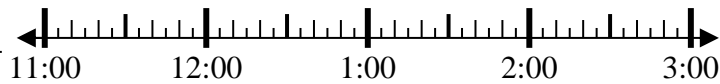


2. _____

3) Start: 11:40

Elapsed: _____

End: 1:15

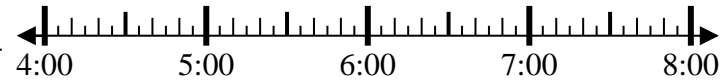


3. _____

4) Start: 4:20

Elapsed: _____

End: 6:35

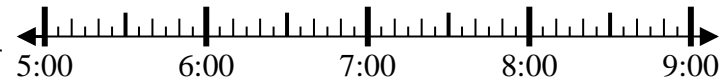


4. _____

5) Start: 5:15

Elapsed: _____

End: 7:40

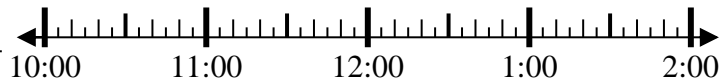


5. _____

6) Start: 10:20

Elapsed: _____

End: 12:55



6. _____

7) Start: 12:45

Elapsed: _____

End: 3:35

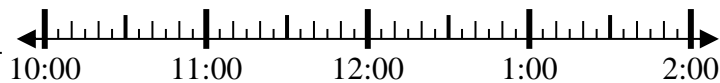


7. _____

8) Start: 10:40

Elapsed: _____

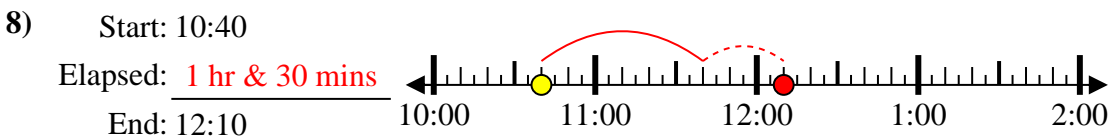
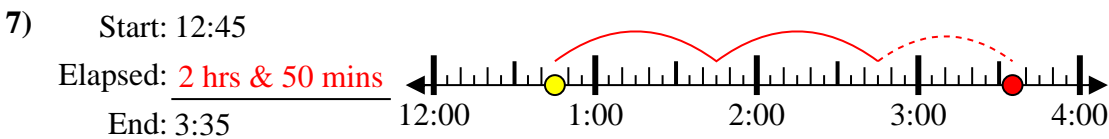
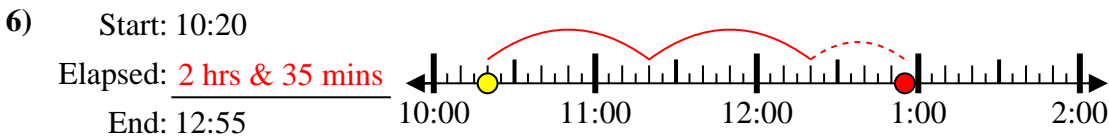
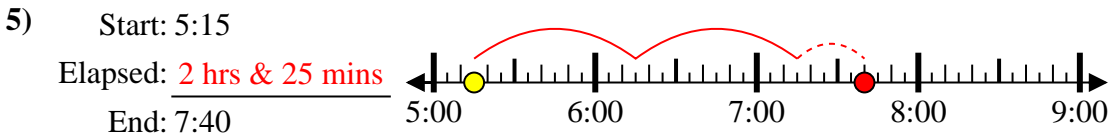
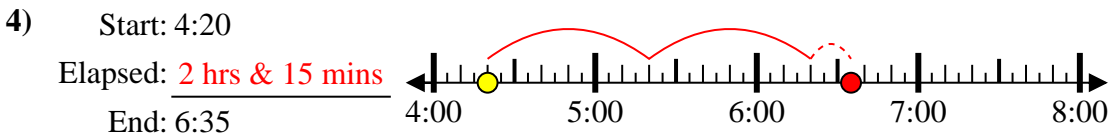
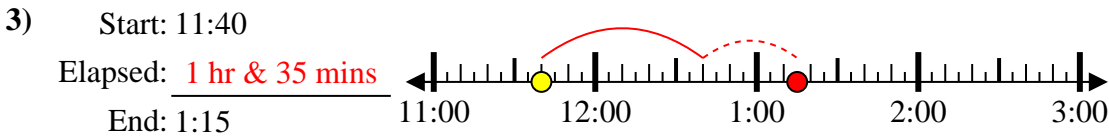
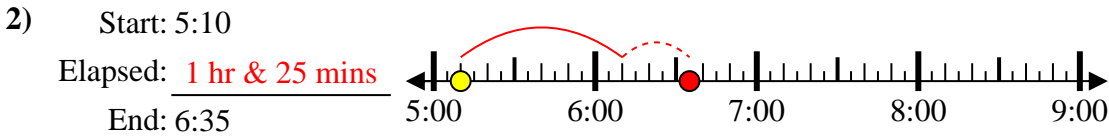
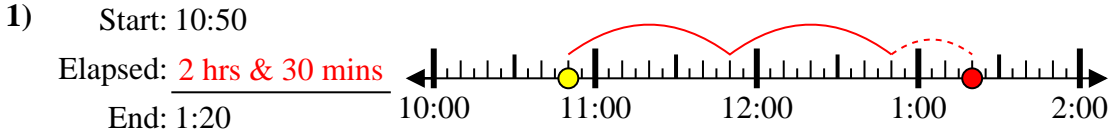
End: 12:10



8. _____



Solve each problem.



Answers

1. 2 hrs & 30 mins

2. 1 hr & 25 mins

3. 1 hr & 35 mins

4. 2 hrs & 15 mins

5. 2 hrs & 25 mins

6. 2 hrs & 35 mins

7. 2 hrs & 50 mins

8. 1 hr & 30 mins



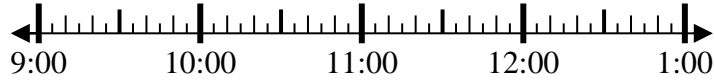
Solve each problem.

Answers

1) Start: 9:20

Elapsed: _____

End: 10:45

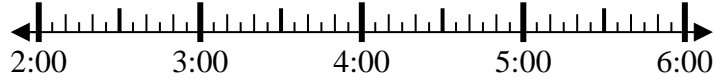


1. _____

2) Start: 2:00

Elapsed: _____

End: 4:55

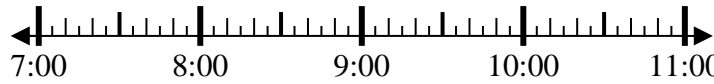


2. _____

3) Start: 7:40

Elapsed: _____

End: 9:55

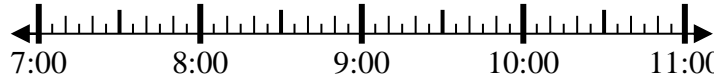


3. _____

4) Start: 7:15

Elapsed: _____

End: 8:25

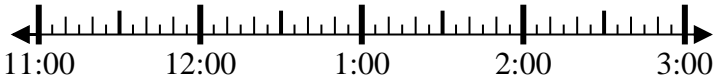


4. _____

5) Start: 11:15

Elapsed: _____

End: 1:40

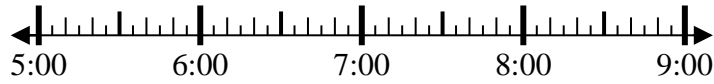


5. _____

6) Start: 5:30

Elapsed: _____

End: 6:55

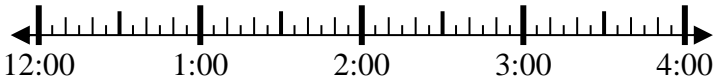


6. _____

7) Start: 12:00

Elapsed: _____

End: 2:40



7. _____

8) Start: 12:15

Elapsed: _____

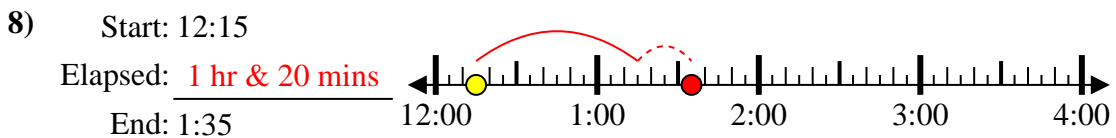
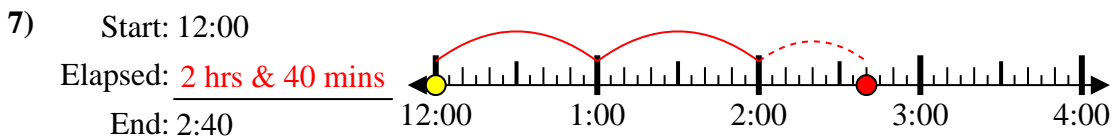
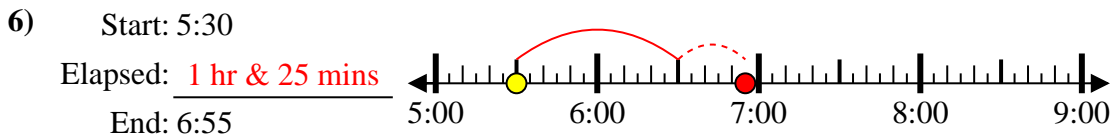
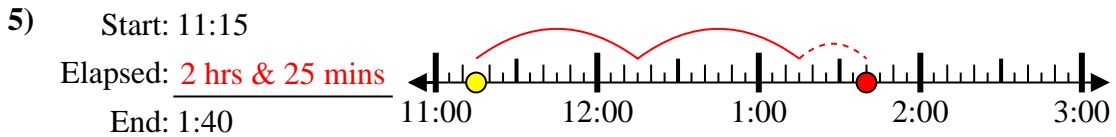
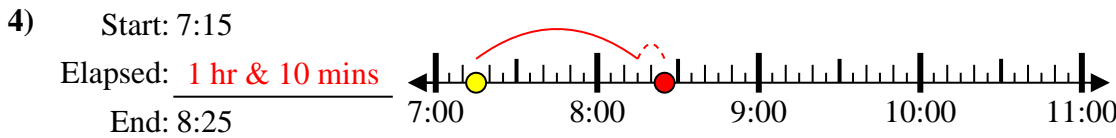
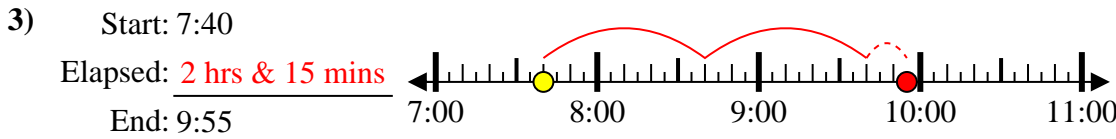
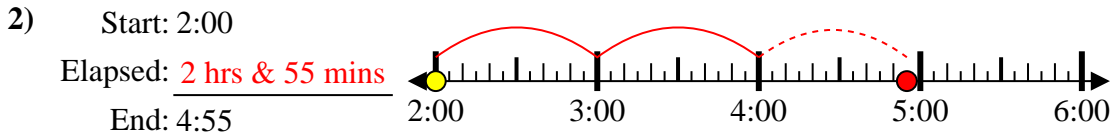
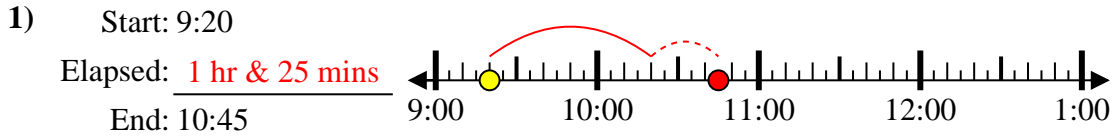
End: 1:35



8. _____



Solve each problem.



Answers

1. 1 hr & 25 mins

2. 2 hrs & 55 mins

3. 2 hrs & 15 mins

4. 1 hr & 10 mins

5. 2 hrs & 25 mins

6. 1 hr & 25 mins

7. 2 hrs & 40 mins

8. 1 hr & 20 mins