



Solve each problem.

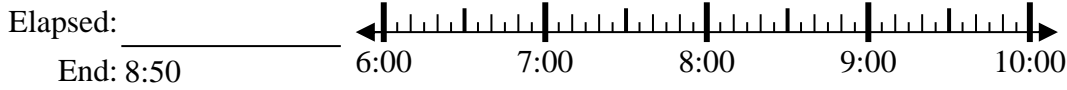
Answers

1) Start: 12:10



1. \_\_\_\_\_

2) Start: 6:40



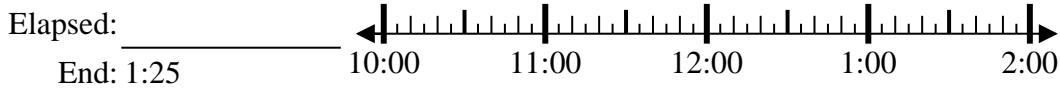
2. \_\_\_\_\_

3) Start: 9:05



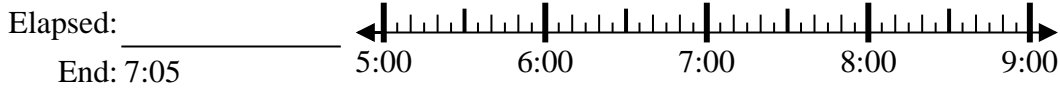
3. \_\_\_\_\_

4) Start: 10:45



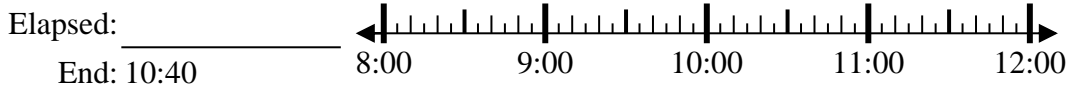
4. \_\_\_\_\_

5) Start: 5:35



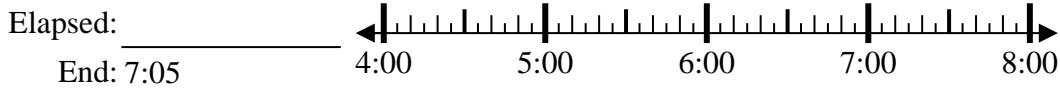
5. \_\_\_\_\_

6) Start: 8:15



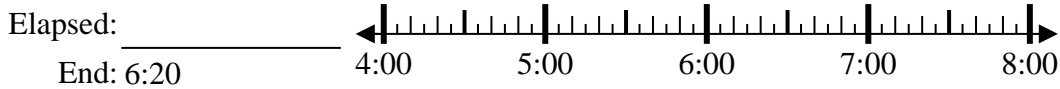
6. \_\_\_\_\_

7) Start: 4:10



7. \_\_\_\_\_

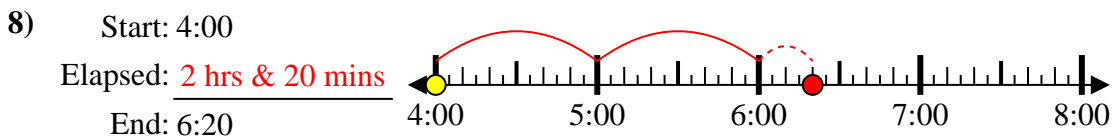
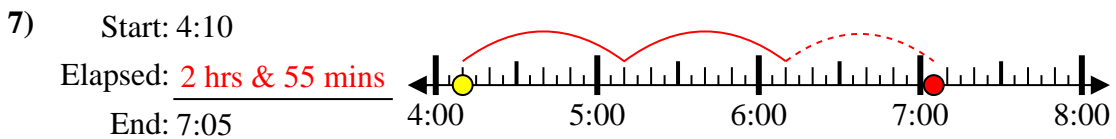
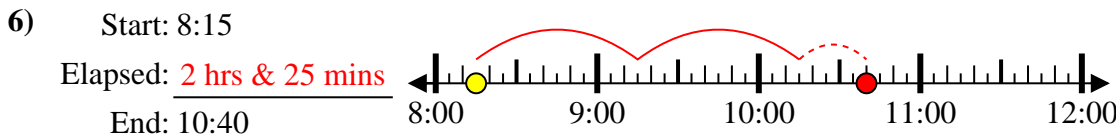
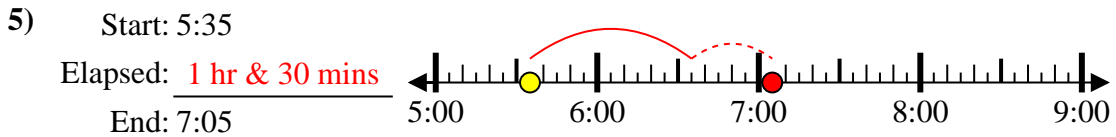
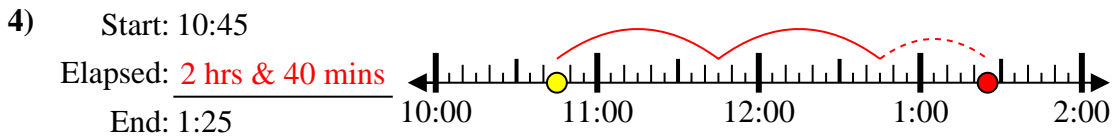
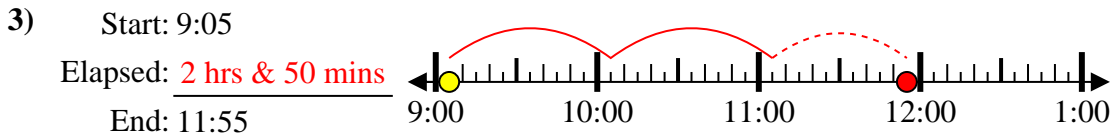
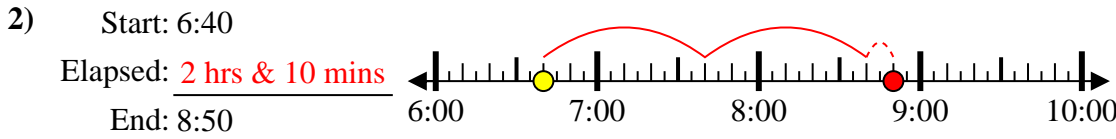
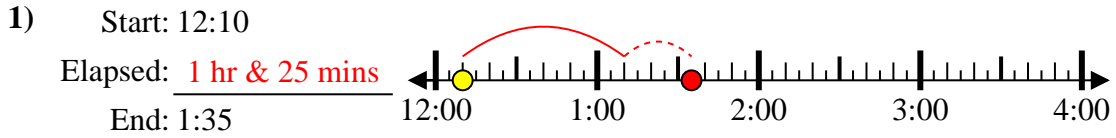
8) Start: 4:00



8. \_\_\_\_\_



Solve each problem.



Answers

1. 1 hr & 25 mins

2. 2 hrs & 10 mins

3. 2 hrs & 50 mins

4. 2 hrs & 40 mins

5. 1 hr & 30 mins

6. 2 hrs & 25 mins

7. 2 hrs & 55 mins

8. 2 hrs & 20 mins