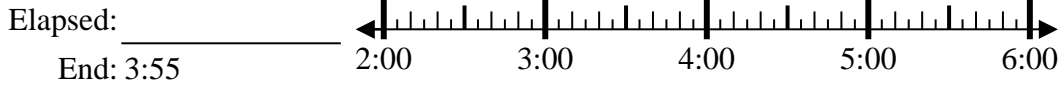




Solve each problem.

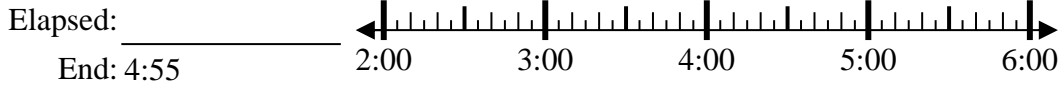
Answers

1) Start: 2:15



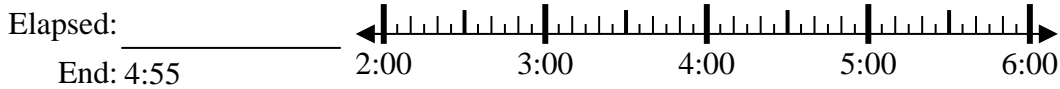
1. \_\_\_\_\_

2) Start: 2:10



2. \_\_\_\_\_

3) Start: 2:45



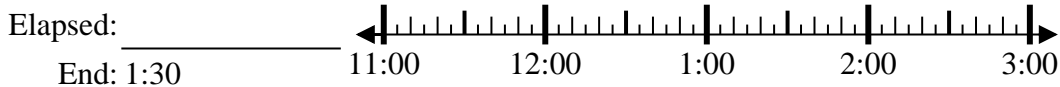
3. \_\_\_\_\_

4) Start: 2:20



4. \_\_\_\_\_

5) Start: 11:05



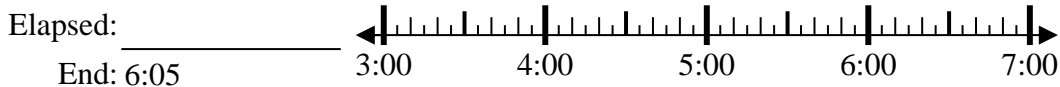
5. \_\_\_\_\_

6) Start: 11:05



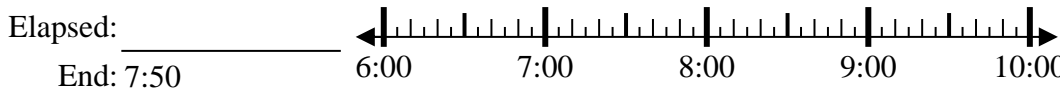
6. \_\_\_\_\_

7) Start: 3:45



7. \_\_\_\_\_

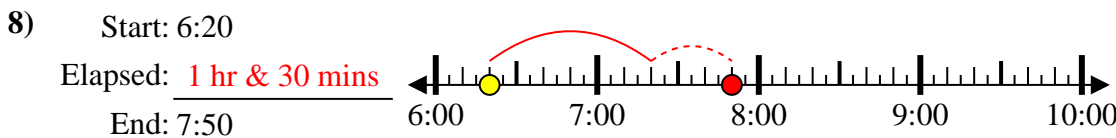
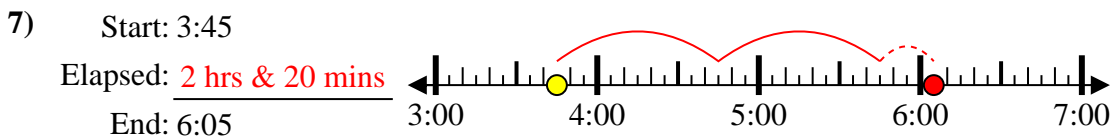
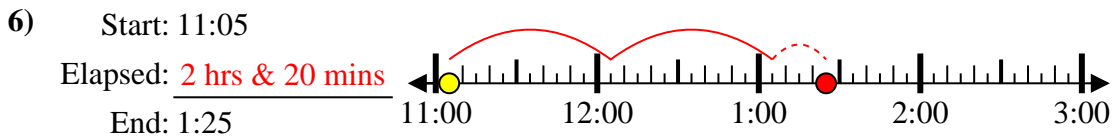
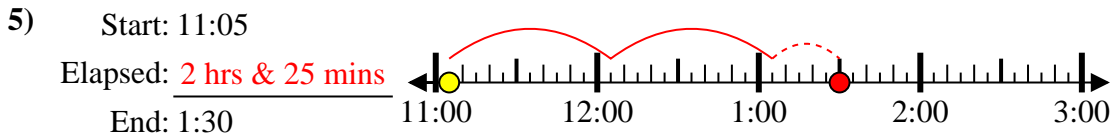
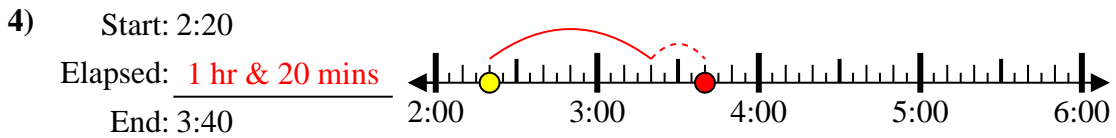
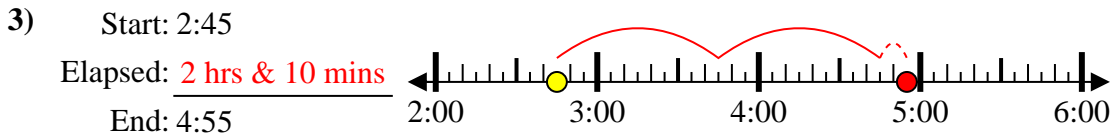
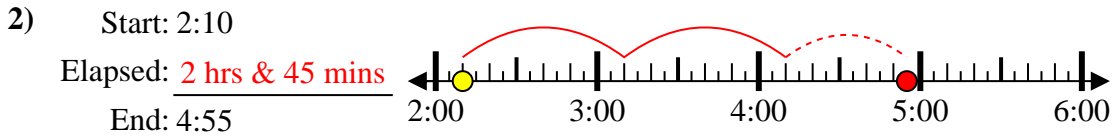
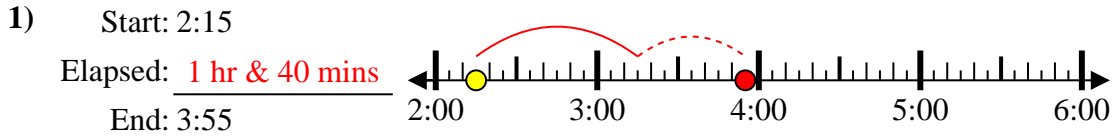
8) Start: 6:20



8. \_\_\_\_\_



Solve each problem.



Answers

1. 1 hr & 40 mins

2. 2 hrs & 45 mins

3. 2 hrs & 10 mins

4. 1 hr & 20 mins

5. 2 hrs & 25 mins

6. 2 hrs & 20 mins

7. 2 hrs & 20 mins

8. 1 hr & 30 mins