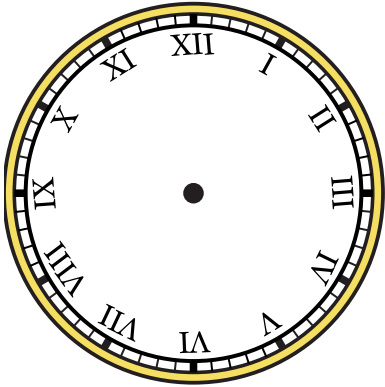




Draw the hour and minute hand on the clock so it represents the time shown.

1) 10:20




2) 1:45



3) 6:35



4) 5:25




5) 7:45



6) 10:10



7) 10:25



8) 12:50




9) 9:10






Draw the hour and minute hand on the clock so it represents the time shown.


1) 10:20



2) 1:45



3) 6:35




4) 5:25



5) 7:45




6) 10:10



7) 10:25



8) 12:50



9) 9:10

