

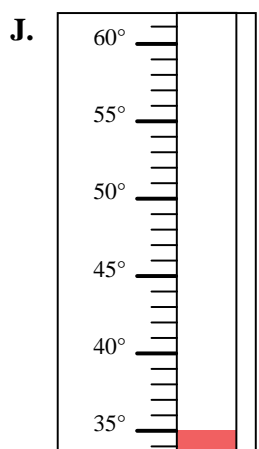
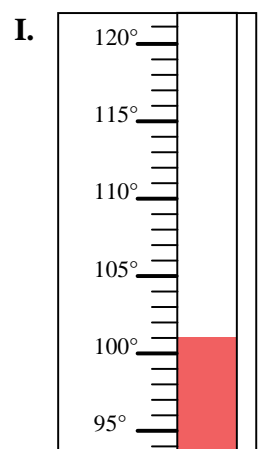
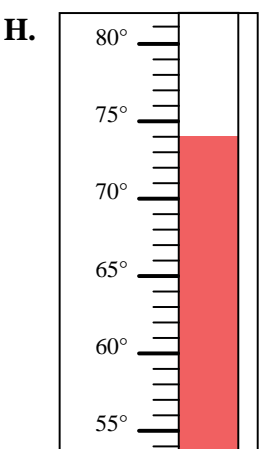
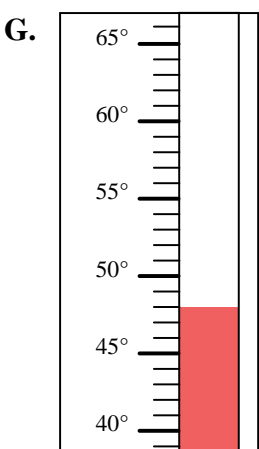
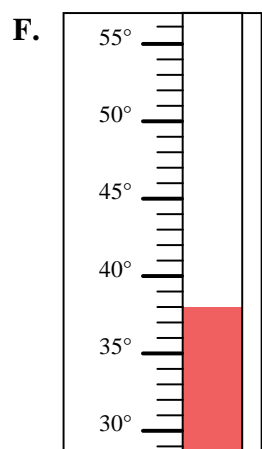
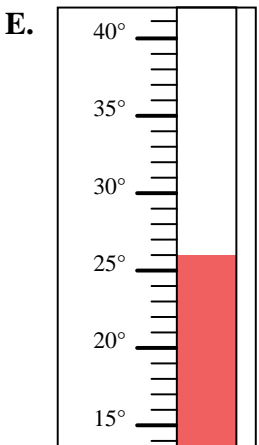
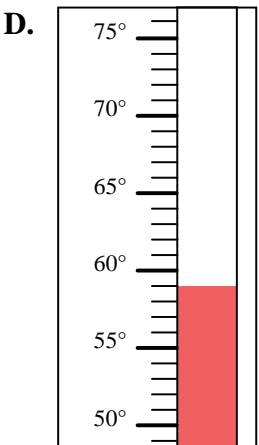
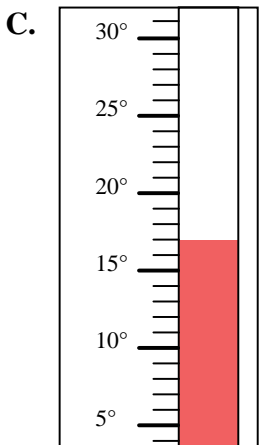
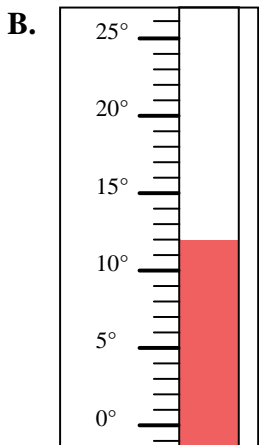
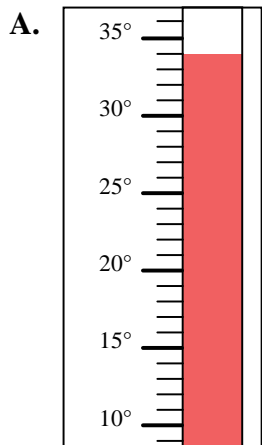


Determine which letter best answers each question.

**Answers**

- 1) Which thermometer best represents the temperature 34°?
- 2) Which thermometer best represents the temperature 12°?
- 3) Which thermometer best represents the temperature 48°?
- 4) Which thermometer best represents the temperature 59°?
- 5) Which thermometer best represents the temperature 101°?
- 6) Which thermometer best represents the temperature 38°?
- 7) Which thermometer best represents the temperature 26°?
- 8) Which thermometer best represents the temperature 74°?
- 9) Which thermometer best represents the temperature 17°?
- 10) Which thermometer best represents the temperature 35°?

1. \_\_\_\_\_
2. \_\_\_\_\_
3. \_\_\_\_\_
4. \_\_\_\_\_
5. \_\_\_\_\_
6. \_\_\_\_\_
7. \_\_\_\_\_
8. \_\_\_\_\_
9. \_\_\_\_\_
10. \_\_\_\_\_





Determine which letter best answers each question.

**Answers**

- 1) Which thermometer best represents the temperature 34°?
- 2) Which thermometer best represents the temperature 12°?
- 3) Which thermometer best represents the temperature 48°?
- 4) Which thermometer best represents the temperature 59°?
- 5) Which thermometer best represents the temperature 101°?
- 6) Which thermometer best represents the temperature 38°?
- 7) Which thermometer best represents the temperature 26°?
- 8) Which thermometer best represents the temperature 74°?
- 9) Which thermometer best represents the temperature 17°?
- 10) Which thermometer best represents the temperature 35°?

1. **A**
2. **B**
3. **G**
4. **D**
5. **I**
6. **F**
7. **E**
8. **H**
9. **C**
10. **J**

