

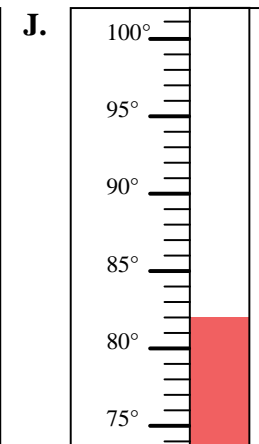
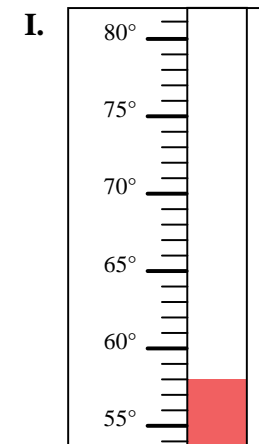
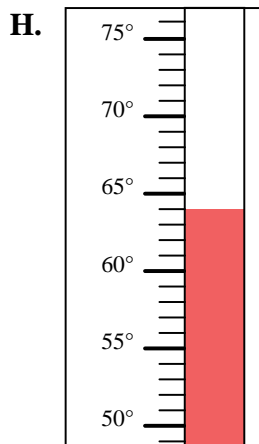
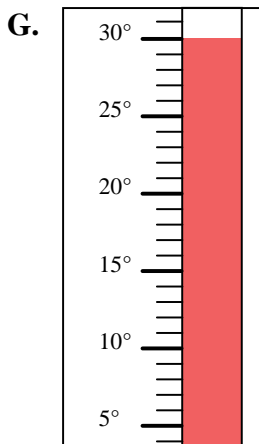
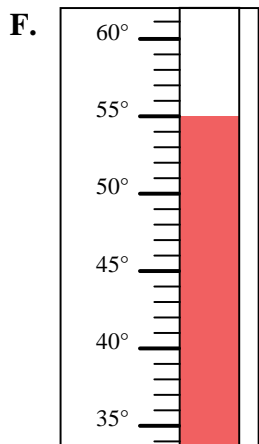
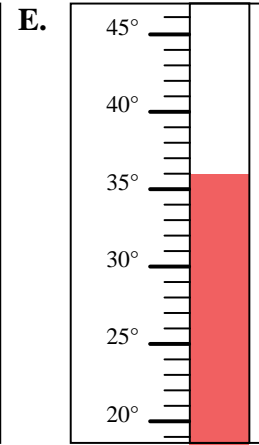
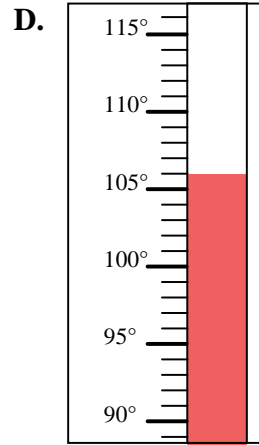
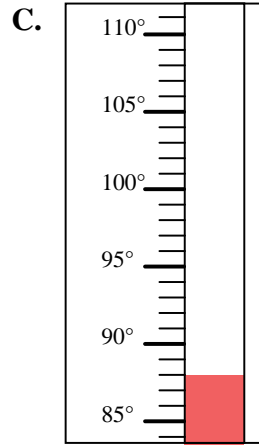
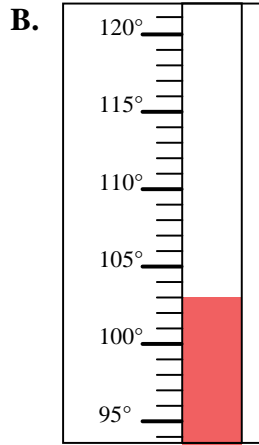
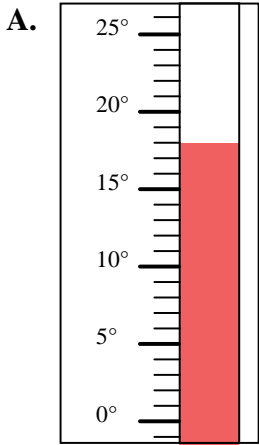


Determine which letter best answers each question.

**Answers**

- 1) Which thermometer best represents the temperature 82°?
- 2) Which thermometer best represents the temperature 64°?
- 3) Which thermometer best represents the temperature 58°?
- 4) Which thermometer best represents the temperature 106°?
- 5) Which thermometer best represents the temperature 88°?
- 6) Which thermometer best represents the temperature 36°?
- 7) Which thermometer best represents the temperature 18°?
- 8) Which thermometer best represents the temperature 30°?
- 9) Which thermometer best represents the temperature 55°?
- 10) Which thermometer best represents the temperature 103°?

1. \_\_\_\_\_
2. \_\_\_\_\_
3. \_\_\_\_\_
4. \_\_\_\_\_
5. \_\_\_\_\_
6. \_\_\_\_\_
7. \_\_\_\_\_
8. \_\_\_\_\_
9. \_\_\_\_\_
10. \_\_\_\_\_





Determine which letter best answers each question.

- 1) Which thermometer best represents the temperature  $82^{\circ}$ ?
- 2) Which thermometer best represents the temperature  $64^{\circ}$ ?
- 3) Which thermometer best represents the temperature  $58^{\circ}$ ?
- 4) Which thermometer best represents the temperature  $106^{\circ}$ ?
- 5) Which thermometer best represents the temperature  $88^{\circ}$ ?
- 6) Which thermometer best represents the temperature  $36^{\circ}$ ?
- 7) Which thermometer best represents the temperature  $18^{\circ}$ ?
- 8) Which thermometer best represents the temperature  $30^{\circ}$ ?
- 9) Which thermometer best represents the temperature  $55^{\circ}$ ?
- 10) Which thermometer best represents the temperature  $103^{\circ}$ ?

**Answers**

1.     **J**
2.     **H**
3.     **I**
4.     **D**
5.     **C**
6.     **E**
7.     **A**
8.     **G**
9.     **F**
10.     **B**

